



KING EDWARD VI  
HANDSWORTH GRAMMAR  
SCHOOL FOR BOYS



KING EDWARD VI  
ACADEMY TRUST  
BIRMINGHAM

# Year 9

## 2023 Mathematics 2024

### Unit 14 Booklet – Part 1

HGS Maths



Tasks



Dr Frost Course



Name: \_\_\_\_\_

Class: \_\_\_\_\_



KING EDWARD VI  
HANDSWORTH GRAMMAR  
SCHOOL FOR BOYS



KING EDWARD VI  
ACADEMY TRUST  
BIRMINGHAM

# Year 9

## 2023 Mathematics 2024

### Unit 14 Booklet – Part 2

HGS Maths



Tasks



Dr Frost Course



Name: \_\_\_\_\_

Class: \_\_\_\_\_

## Contents Page

- 1 [Linear Inequalities](#)
- 2 [Straight Line Graphs](#)
- 3 [Basic Vectors](#)
- 4 [Transformations](#)
- 5 [Invariant Points](#)

# 1 Linear Inequalities

## Worked Example

List the integers that satisfy:

- a)  $-4 \leq x < 4$
- b)  $-4 \leq x < 0$

## Your Turn

List the integers that satisfy:

- a)  $-3 < y \leq 2$
- b)  $-7 < y \leq 2$

## Worked Example

Represent on a number line:

a)  $x > -1$

b)  $x \leq 1$

## Your Turn

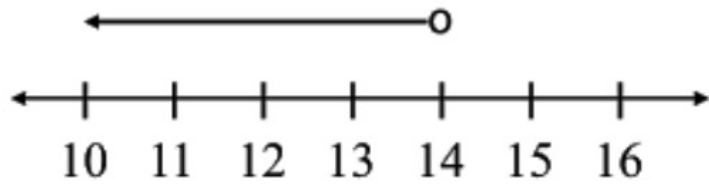
Represent on a number line:

a)  $x \leq -2$

b)  $x > 2$

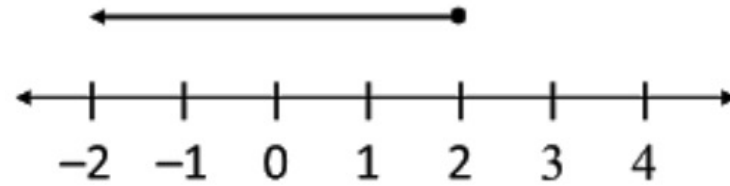
### Worked Example

Write down the inequality for  $x$  shown on the number line:

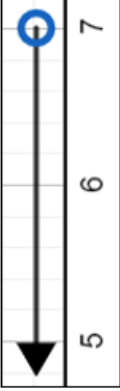


### Your Turn

Write down the inequality for  $x$  shown on the number line:



## Fill in the Gaps

1) $x$ is less than 7	$x < 7$	
2) $x$ is less than or equal to 7		
3) $x$ is more than 4		
4) $x$ is more than 10		
5) $x$ is more than 3.5		
6) $x$ is more than or equal to 7.5		
7) $x$ is less than or equal to 0		
8) $x$ is more than or equal to 3.5		



## Worked Example

Represent on a number line:

a)  $-1 < x \leq 2$

b)  $-1 \leq x < 2$

## Your Turn

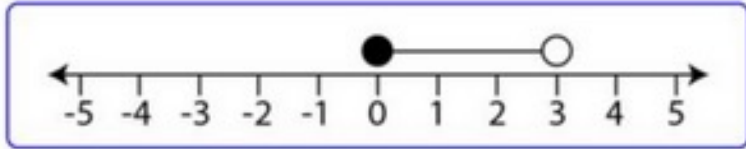
Represent on a number line:

a)  $-2 \leq x < 1$

b)  $-3 < x \leq 4$

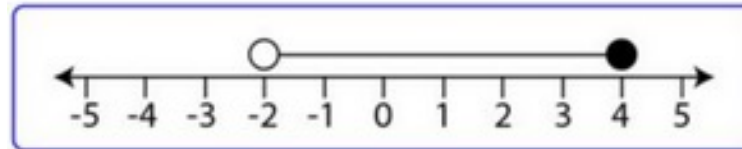
### Worked Example

Write down the inequality for  $x$  shown on the number line:



### Your Turn

Write down the inequality for  $x$  shown on the number line:



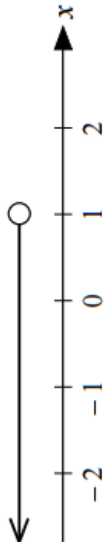

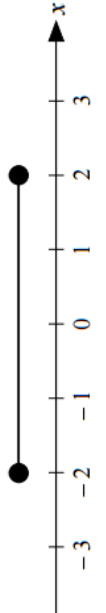
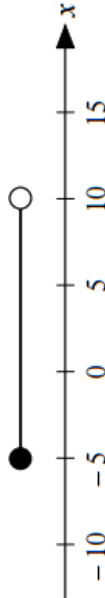
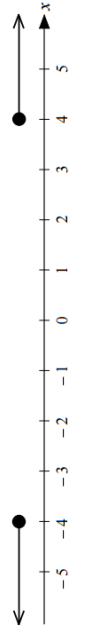
### Worked Example

Plot  $x < 3$  or  $x > 7$  on a number line

### Your Turn

Plot  $x \leq -3$  or  $x > 5$  on a number line

## Fill in the Gaps

Complete the table		Number Line	Set Notation
1			
2			
3			
4		$\{x : -1 < x < 3\}$	
5		$\{x : -2 < x \leq 2\}$	
6			
7		$\{x : x < -3 \text{ or } x > 3\}$	
8			

## Worked Example

Solve:

a)  $2x - 8 < 16$

b)  $2(4 - x) < 16$

## Your Turn

Solve:

a)  $3x - 9 > 27$

b)  $3(3 - x) > 27$

### Worked Example

Solve:

a)  $10(x + 3) + 3(2x + 6) < 144$

b)  $7(x + 3) - 3(2x - 6) \geq 84$

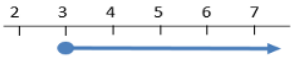
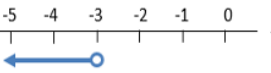
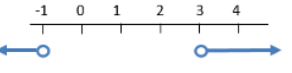
### Your Turn

Solve:

a)  $5(x + 3) + 2(2x - 6) \leq 111$

b)  $5(x - 3) - 2(2x - 6) \geq 111$

## Fill in the Gaps

Q	<i>Inequality</i>	Represent on a number line	<i>Integer solutions</i>
1	$x > 3$		
2			$x = 3, 4, 5 \dots$
3			$x = -3, -4, -5 \dots$
4	$-3 \leq x$		
5	$x - 1 > 2$		
6			
7	$x + 5 \leq 2$		
8			
9			$x = 4, 5, 6 \dots$ or $x = -1, -2, -3 \dots$
10	$< x \leq$		$x = -2, -1, 0, 1, 2, 3$
11	$x \geq 1$ and $x < 3$		
12	$3x > 9$		

## Worked Example

Solve:

a)  $9x + 4 < 2x + 60$

b)  $3x - 23 \leq 7 - 2x$

## Your Turn

Solve:

a)  $5x + 7 > 2x + 22$

b)  $2x - 23 \geq 9 - 2x$



## Worked Example

Solve:

a)  $3(x + 2) < 2(x + 3)$

b)  $3(x + 8) > 3(2 - x)$

## Your Turn

Solve:

a)  $7(x - 3) \leq 2(x + 7)$

b)  $3(x - 5) \geq 5(5 - x)$

## Worked Example

Solve:

a)  $-1 < 2x + 3 < 9$

b)  $-1 \leq 2x + 6 < 9$

## Your Turn

Solve:

a)  $-9 < 2x + 3 < 1$

b)  $-9 \leq 2x + 6 \leq 1$

### Worked Example

*A* says, 'I think of a number, multiply it by 7 and then subtract 10'.

*B* says, 'I am thinking of the same original number, but I add 5 then multiply by 2'

If *A*'s answer is greater than *B*'s, what is the range of values they could be thinking of?

### Your Turn

*P* says, 'I think of a number, multiply it by 5 and then subtract 3'.

*Q* says, 'I am thinking of the same original number, but I add 2 then multiply by 3'

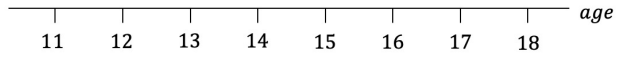
If *Q*'s answer is greater than *P*'s, what is the range of values they could be thinking of?

## Worked Example

$$12 \leq a \leq 17$$

$$a > 15$$

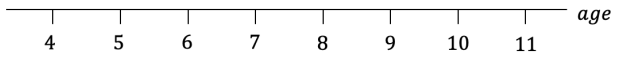
**Combined**



$$x \leq 6 \text{ or } x \geq 8$$

$$5 < x \leq 9$$

**Combined**

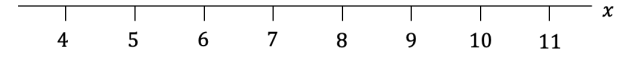


## Your Turn

$$x \leq 8$$

$$6 \leq x < 9$$

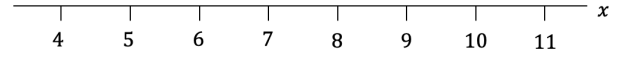
**Combined**



$$x \leq 6 \text{ or } x > 9$$

$$7 \leq x \leq 10$$

**Combined**



## Worked Example

Solve:

$$3 - x \leq 2 < 10 - 2x$$

## Your Turn

Solve:

$$1 + x < 5 \leq 7 + 5x$$

## Extra Notes

## 2 Straight Line Graphs

### Worked Example

Plot the graph of  $y = 2x + 1$  for the values  $-2 \leq x \leq 2$

$x$					
$y$					



### Your Turn

Plot the graph of  $y = 4x + 2$  for the values  $-2 \leq x \leq 2$

$x$					
$y$					





### Worked Example

Plot the graph of  $y = -2x + 1$  for the values  $-2 \leq x \leq 2$

$x$					
$y$					



### Your Turn

Plot the graph of  $y = -4x - 2$  for the values  $-2 \leq x \leq 2$

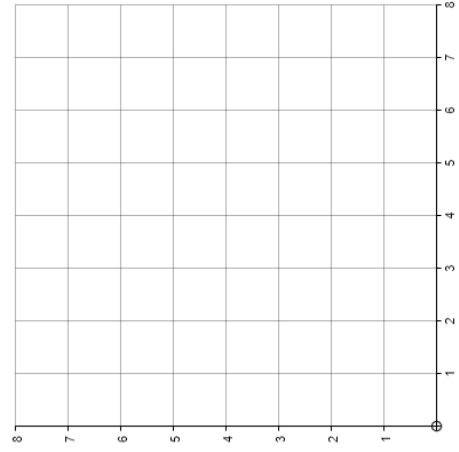
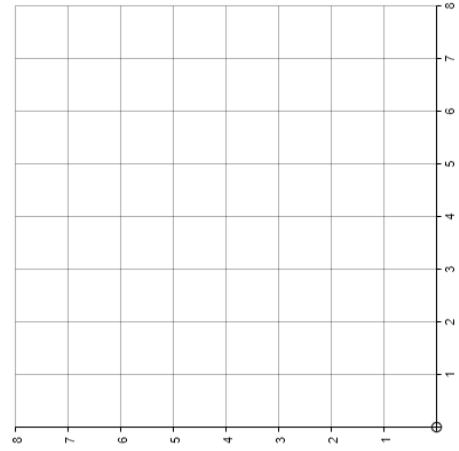
$x$					
$y$					



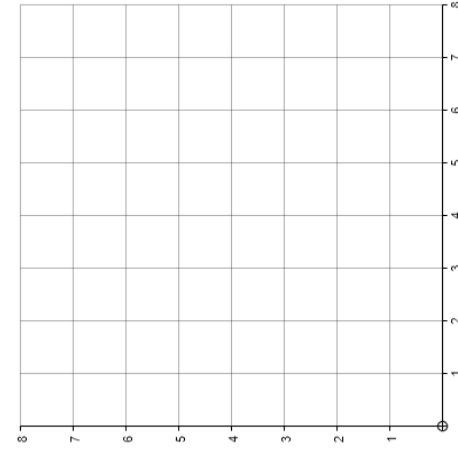
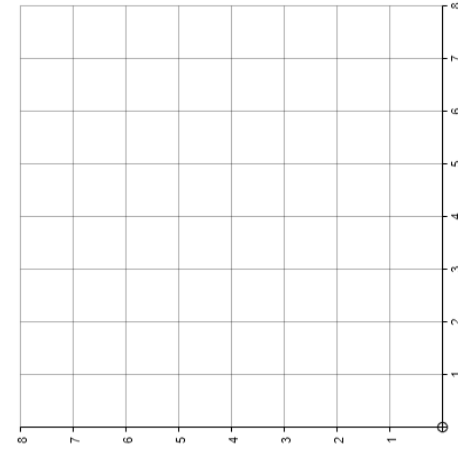
# Fluency Practice

## Plotting Linear Graphs

(a)							(b)						
	0	1	2	3	4			0	1	2	3	4	
$x$						$x$							
$y = x + 1$						$y = 8 - x$							
$y = x + 2$						$y = 7 - x$							
$y = x + 3$						$y = 6 - x$							



(c)							(d)						
	0	1	2	3	4			0	1	2	3	4	
$x$						$x$							
$y = 0.5x$						$y = 8 - 0.5x$							
$y = x$						$y = 8 - x$							
$y = 2x$						$y = 8 - 2x$							



### Worked Example

Plot the graph of  $2x + y = 8$  for the values  $-2 \leq x \leq 2$

$x$					
$y$					



### Your Turn

Plot the graph of  $2x - y = 8$  for the values  $-2 \leq x \leq 2$

$x$					
$y$					



### Worked Example

Plot the graph of  $x + 2y = 8$  for the values  $-2 \leq x \leq 2$

$x$					
$y$					



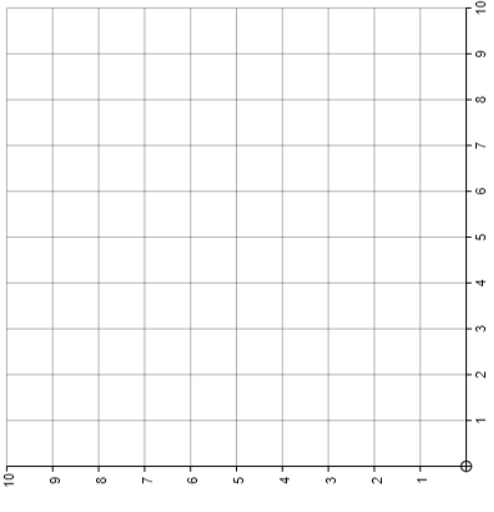
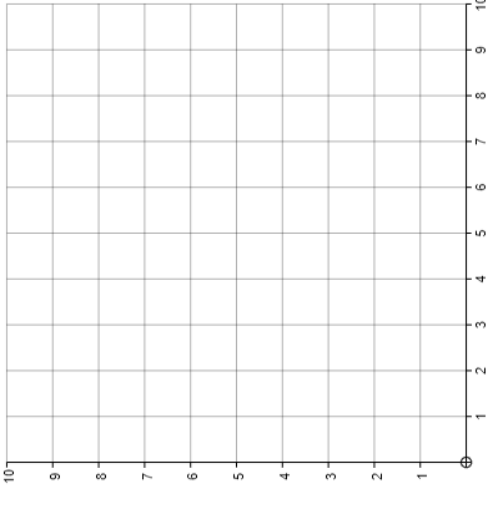
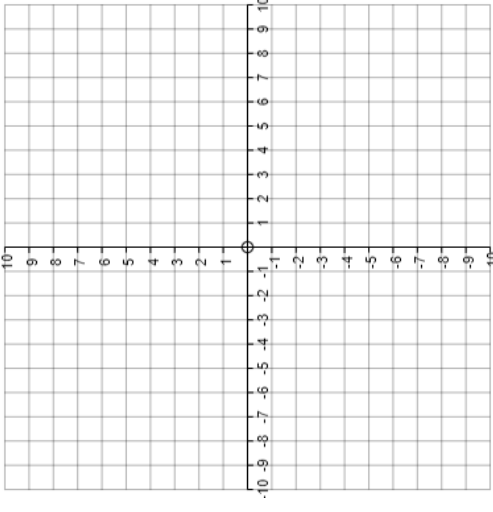
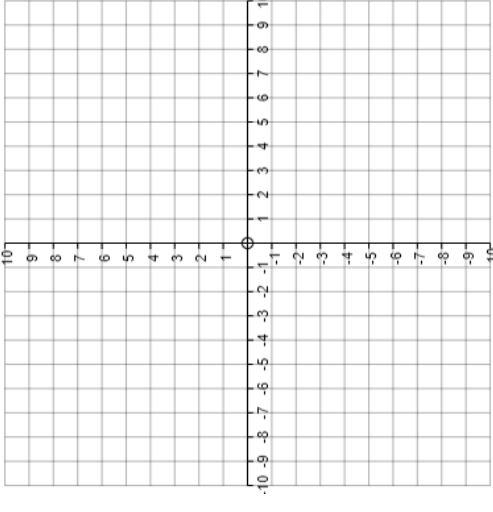
### Your Turn

Plot the graph of  $x - 2y = 8$  for the values  $-2 \leq x \leq 2$

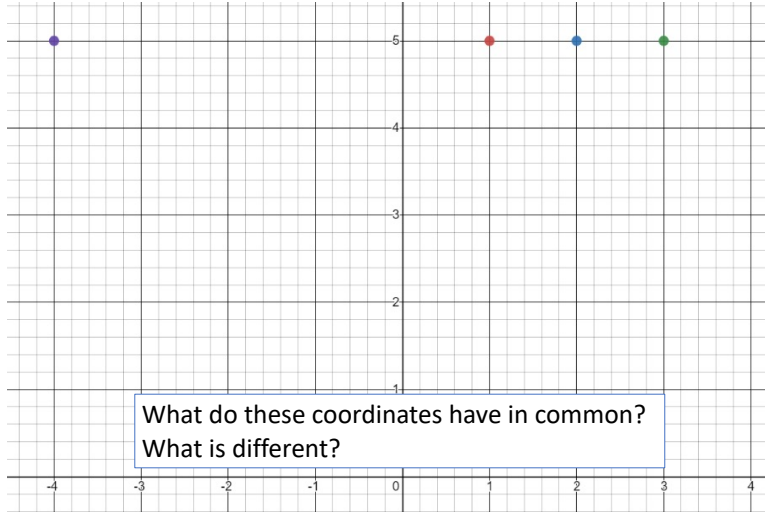
$x$					
$y$					



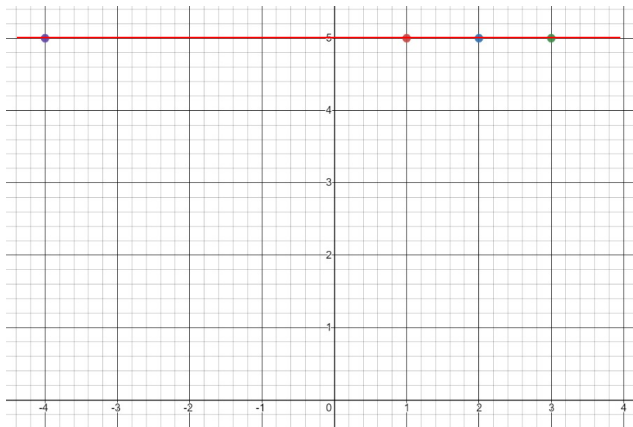
# Fluency Practice

Plotting Linear Graphs Using the Cover-Up Method	
<b>(a)</b> $2x + y = 6$	<b>(b)</b> $x + 3y = 9$
When $x = 0, y =$	When $x = 0, y =$
When $y = 0, x =$	When $y = 0, x =$
	
<b>(c)</b> $5x + 2y = 10$	<b>(d)</b> $3x + 2y = 9$
When $x = 0, y =$	When $x = 0, y =$
When $y = 0, x =$	When $y = 0, x =$
	

# Horizontal and Vertical Lines

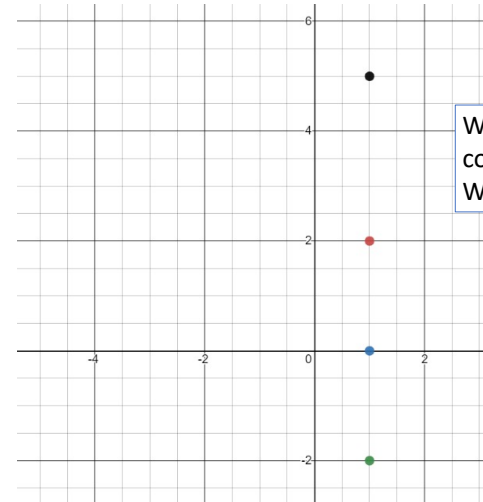


The relationship of the shared characteristic between points can be written as an equation.

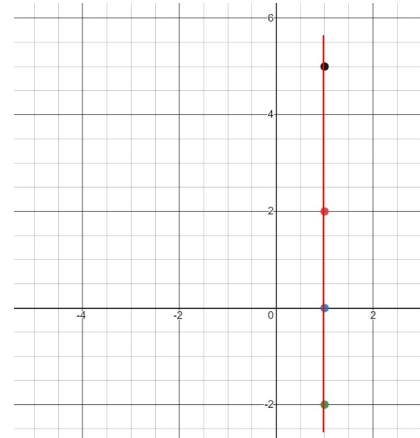


All of these points have a y coordinate of 5.

The straight line can be described as  $y = 5$  because this is true for every point on the line.



The relationship of the shared characteristic between points can be written as an equation.

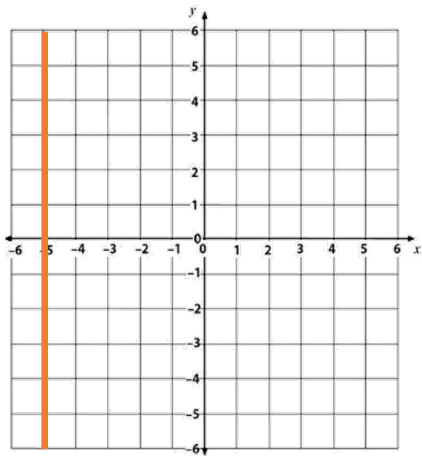
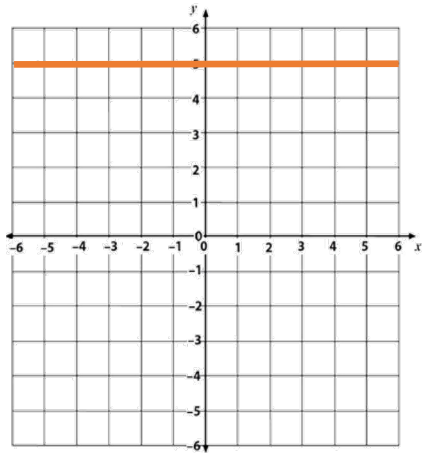


All of these points have an x coordinate of 1.

The straight line can be described as  $x = 1$  because this is true for every point on the line.

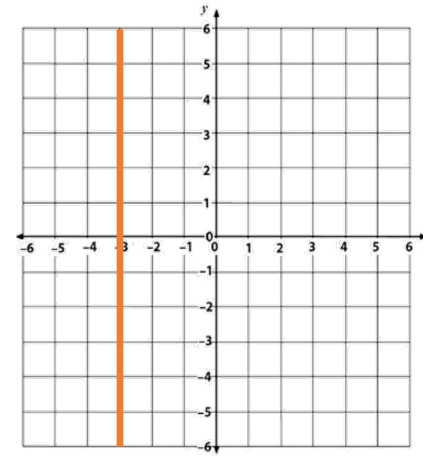
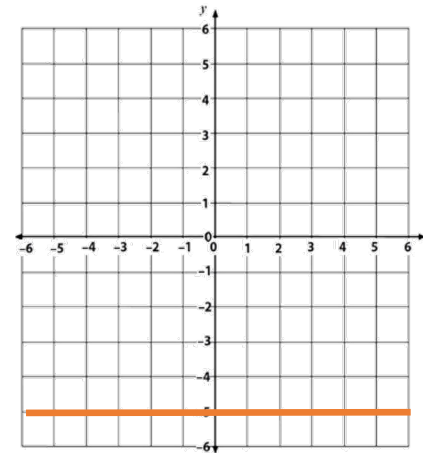
## Worked Example

Find the equation of the line:



## Your Turn

Find the equation of the line:

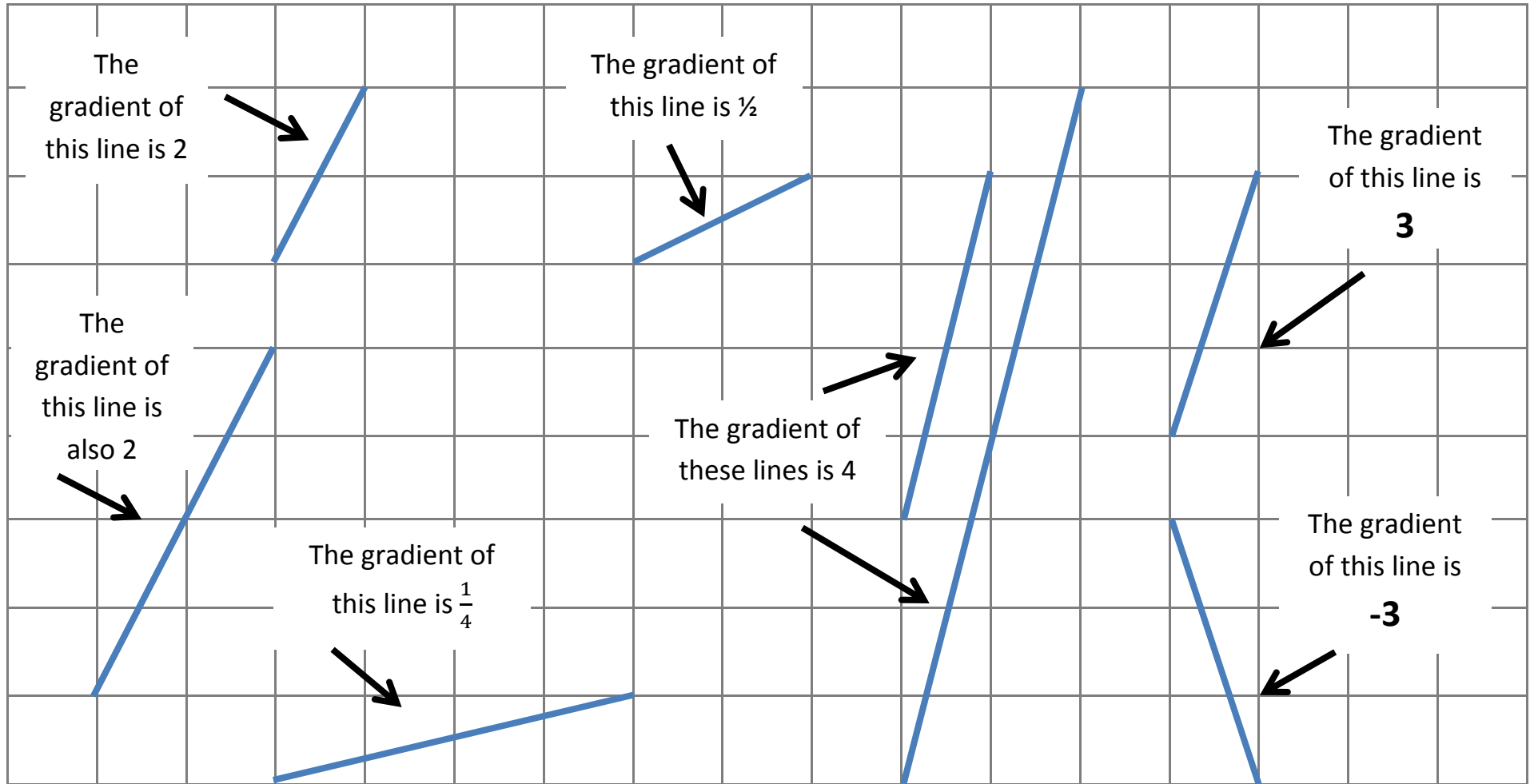


# Gradient



# Fluency Practice

Look at these pictures and try to figure out what the word 'gradient' means:



### Worked Example

Calculate the gradient between the coordinates:

- a)  $(-2, -1)$  and  $(5, 7)$
- b)  $(2, -1)$  and  $(-5, -7)$

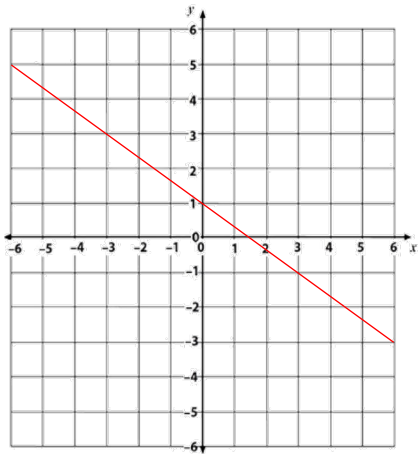
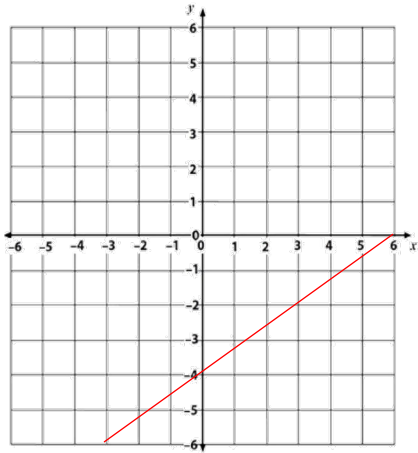
### Your Turn

Calculate the gradient between the coordinates:

- a)  $(-4, 2)$  and  $(6, 8)$
- b)  $(-4, 2)$  and  $(-6, -8)$

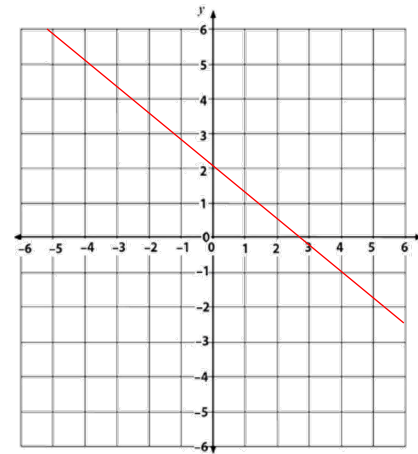
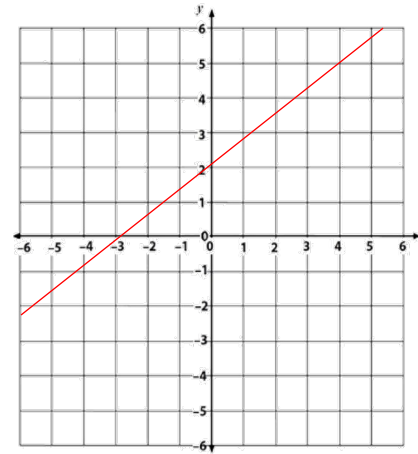
## Worked Example

Find the gradient of:



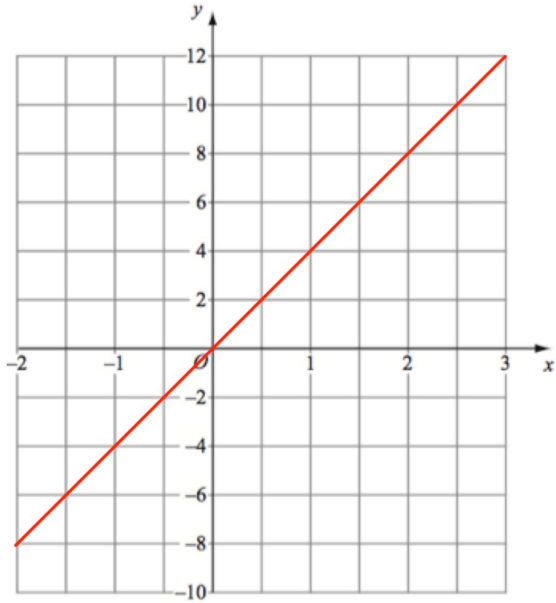
## Your Turn

Find the gradient of:



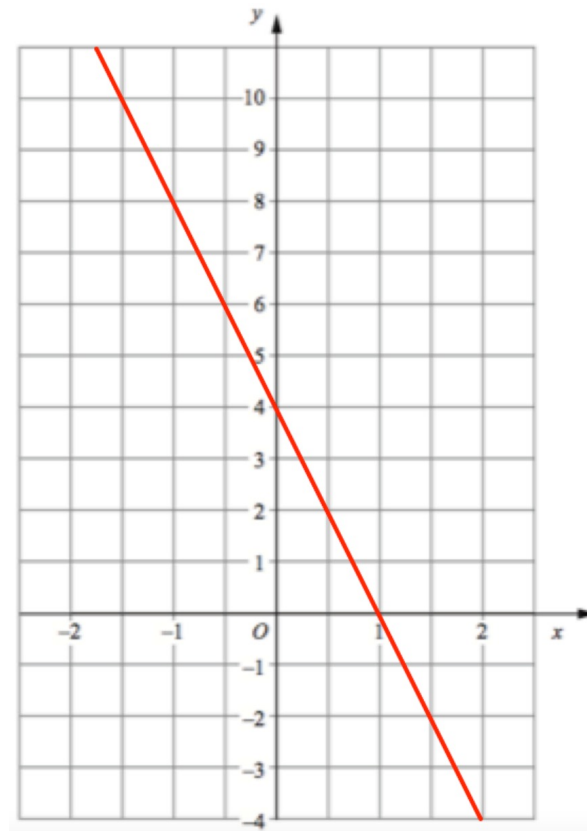
## Worked Example

Find the gradient of:



## Your Turn

Find the gradient of:



### Worked Example

The gradient connecting the two points  $(2a, 5)$  and  $(7a, 8)$  is 6. Solve for  $a$ .

### Your Turn

The gradient connecting the two points  $(3a, 7)$  and  $(5a, 12)$  is 6. Solve for  $a$ .

### Worked Example

The gradient connecting the two points  $(2, 10)$  and  $(5, d)$  is 4.  
Solve for  $d$ .

### Your Turn

The gradient connecting the two points  $(-3, -10)$  and  $(2, d)$  is 12. Solve for  $d$ .

**Worked Example**

$$y = 2x - 1$$

Gradient:

y-intercept:

$$y = -2x + 6$$

Gradient:

y-intercept:

$$2x + 3y = 6$$

Gradient:

y-intercept:

**Your Turn**

$$y = 3x - 4$$

Gradient:

y-intercept:

$$y = -3x + 6$$

Gradient:

y-intercept:

$$3x + 2y = 6$$

Gradient:

y-intercept:

### Worked Example

Write in the form  $y = mx + c$  the line with:

Gradient 2 and  $y$ -intercept 3

Gradient  $\frac{2}{3}$  and  $y$ -intercept  $-3$

Gradient  $-\frac{3}{2}$  and  $y$ -intercept 0

Gradient 0 and  $y$ -intercept 4

### Your Turn

Write in the form  $y = mx + c$  the line with:

Gradient 3 and  $y$ -intercept 4

Gradient  $-\frac{5}{6}$  and  $y$ -intercept  $-1$

Gradient  $\frac{3}{4}$  and  $y$ -intercept 0

Gradient 0 and  $y$ -intercept  $-5$



## Fill in the Gaps

Equation	Gradient	y-intercept
$y = 2x + 3$	2	(0, 3)
$y = 4x + 3$	4	
$y = 4x - 3$		(0, -3)
$y = 2x - 1$		
$y = 3x + 5$		
$y = x + 2$		
$y = 7x$		
$y = \frac{1}{2}x - 3$		
$y = \frac{2}{3}x + \frac{4}{3}$		
$y = -3x + 6$	-3	
$y = -2x - 1$		
$y = -5x + 2$		
$y = -x$		

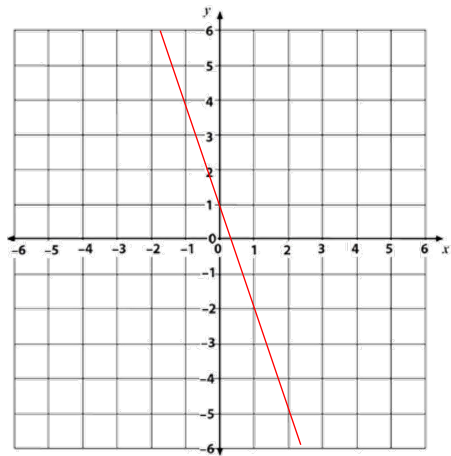
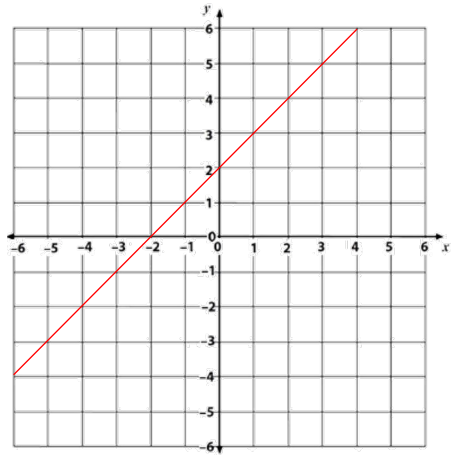
  

Equation	Gradient	y-intercept
$y = -\frac{3}{2}x + 1$		
$y = -\frac{2}{5}x - \frac{4}{5}$		
	3	(0, 6)
	-2	(0, 0)
	1	(0, -3)
	$\frac{1}{3}$	(0, -5)
	$-\frac{4}{5}$	$(0, \frac{2}{5})$
	-1	(0, 8)
$2y = 6x - 10$		
$y + 2x = 7$		
$6x + 3y = 18$		
$x - 2y = 8$		
$3y = 5x - 6$		

## Equation of Straight Line Graphs

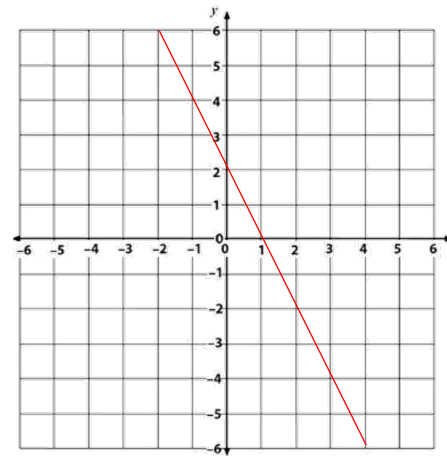
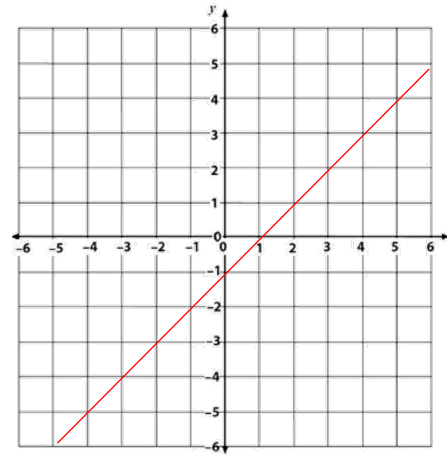
## Worked Example

Find the equation of:



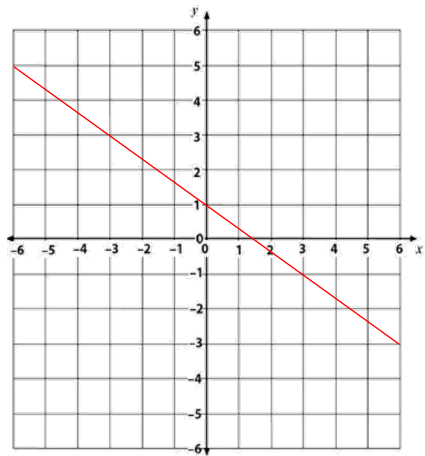
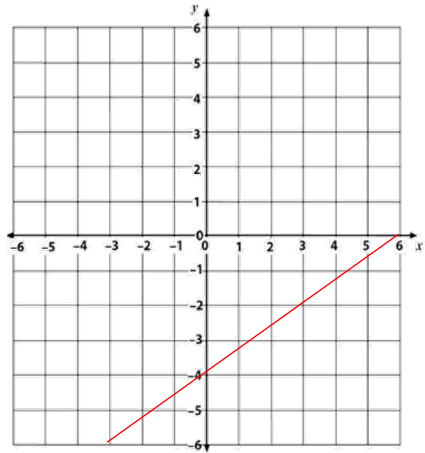
## Your Turn

Find the equation of:



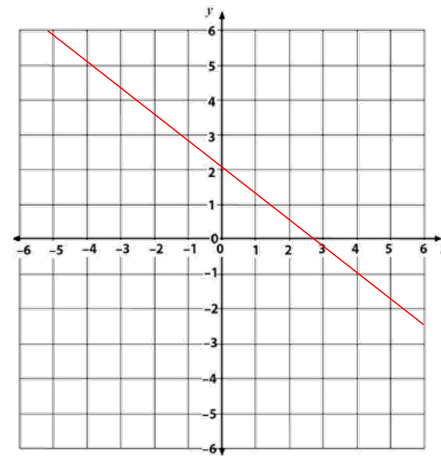
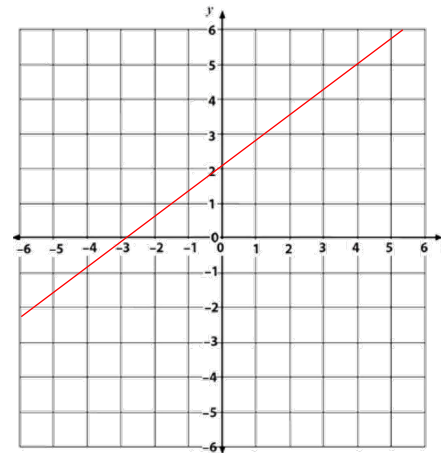
## Worked Example

Find the equation of:



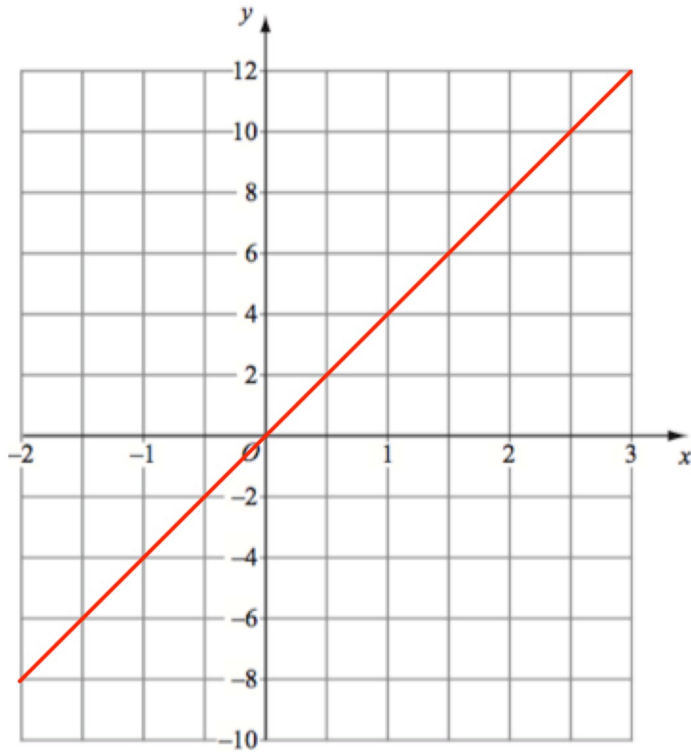
## Your Turn

Find the equation of:



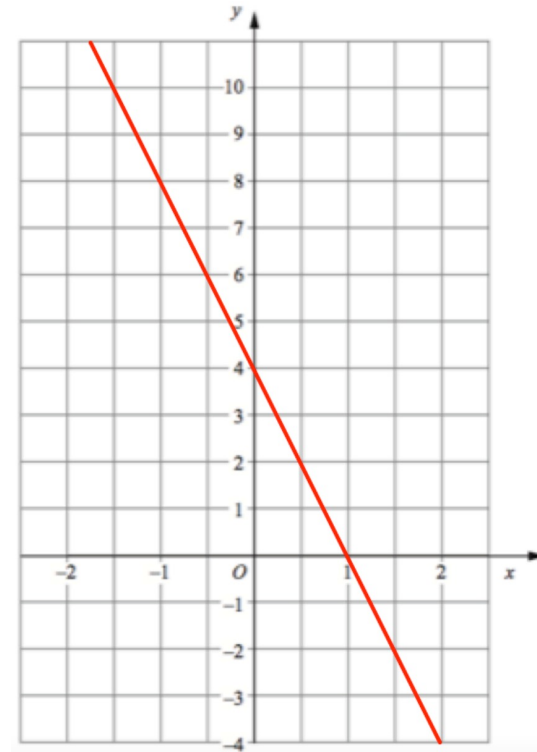
## Worked Example

Find the equation of:

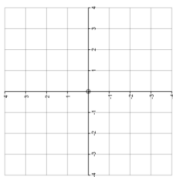
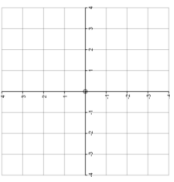
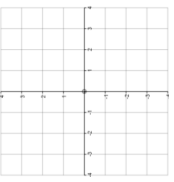
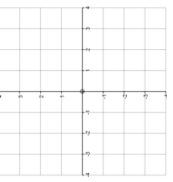
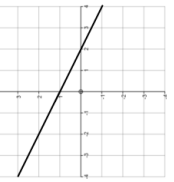
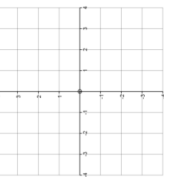


## Your Turn

Find the equation of:



## Fill in the Gaps

Equation of Straight Line	Graph	Gradient	Y-Intercept	A Point on the Line	Another Point on the Line
$y = x - 3$				$(-5, \square)$	$(\square, 10)$
$y = 1 + 2x$				$(2, \square)$	$(\square, -7)$
		$-1$	$(0, 2)$	$(2, \square)$	$(\square, -7)$
		$-3$		$(1, 0)$	$(\square, 9)$
				$(-8, \square)$	$(\square, 2)$
				$(1, 1)$	$(5, 13)$

### Worked Example

Find the equation of the line, given a point and the gradient:  
 $(-6, 22)$  Gradient 3

### Your Turn

Find the equation of the line, given a point and the gradient:  
 $(-2, 5)$  Gradient 4

### Worked Example

Write the equation of the line in the form  $y = mx + c$  which passes through the points  $(2, 3)$  and  $(5, -9)$

### Your Turn

Write the equation of the line in the form  $y = mx + c$  which passes through the points  $(3, 10)$  and  $(-5, 18)$



### Worked Example

Write the equation of the line in the form  $y = mx + c$  which passes through the points  $(2, -3)$  and  $(7, -5)$

### Your Turn

Write the equation of the line in the form  $y = mx + c$  which passes through the points  $(3, -2)$  and  $(-7, 5)$

## Worked Example

Find where the line intercepts the axes:

Line	$x$ -intercept	$y$ -intercept
$y = 2x + 3$		
$y = 2x - 3$		

## Your Turn

Find where the line intercepts the axes:

Line	$x$ -intercept	$y$ -intercept
$y = 5x - 4$		
$y = 5x + 4$		

## Worked Example

Find where the line intercepts the axes:

Line	$x$ -intercept	$y$ -intercept
$y = 3 - 2x$		
$y = 2 - 3x$		
$2x + 3y = 6$		

## Your Turn

Find where the line intercepts the axes:

Line	$x$ -intercept	$y$ -intercept
$y = 5 - 4x$		
$y = 4 - 5x$		
$5x + 4y = 20$		

### Worked Example

Does the point  $(2, 9)$  lie on the line  $y = 4x + 1$ ?

### Your Turn

Does the point  $(2, 9)$  lie on the line  $y = 9 - 2x$ ?

**Worked Example**

$$y = 5x + 10$$

$$ax + by = d$$

Gradient:

 $x$  intercept: $y$  intercept:

Sketch:

**Your Turn**

$$y = 5x + 15$$

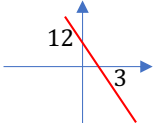
$$ax + by = d$$

Gradient:

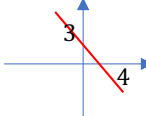
 $x$  intercept: $y$  intercept:

Sketch:

## Fill in the Gaps

	$y = mx + c$	$ax + by = d$	Gradient	$x$ intercept	$y$ intercept	Sketch
1.	$y = 2x + 8$					
2.		$2x - y = -6$				
3.			3	$(-3, 0)$		
4.				$(3, 0)$	$(0, -9)$	
5.			4		$(0, -12)$	
6.						
7.				$(12, 0)$	$(0, 3)$	

## Fill in the Gaps

	$y = mx + c$	$ax + by = d$	Gradient	$x$ intercept	$y$ intercept	Sketch
8.	$y = -\frac{1}{3}x + 4$					
9.		$4x + 3y = 12$				
10.						
11.			$\frac{3}{4}$	$(4, 0)$		
12.		$3x - 4y = 24$				
13.			$1\frac{3}{4}$	$(8, 0)$		
14.				No intercept	$(0, -14)$	

# Fill in the Gaps

Linear Graphs		Plotting, Reading, Calculating					Complete the missing information.			
Equation	Gradient	y-Intercept	Table of Values					Sketch (label marked intercepts)	Coordinates on the Line	
A	$y = 2x + 6$		x	-2	-1	0	1	2		(3, ) (5, )
			y	2			8			
B		-2	x	-2	-1	0	1	2		(6, ) (-3, )
			y	-10	-6		2	6		
C	$y = 4 - x$		x	-2	-1	0	1	2		(3, ) (-4, )
			y							
D			x	-2	-1	0	1	2		(4, ) (-5, )
			y	16	13					
E	$y = \frac{x}{2} - 8$		x	-4	-2	0	2	4		(-6, ) (3, )
			y							
F	$2x + y = 10$		x			0				(4, ) ( , 20)
			y	0						
G			x	-2	0	3				( , 4) (-3, )
			y		-2	16				
H			x	-4	-2	0	2	4		(6, ) (-12, )
			y			1	4			
I	$2x + 3y = 24$		x			0				(6, ) ( , -6)
			y	0						



## Fill in the Gaps

Equation of line $y = mx + c$	Equation of line $ax + by + c = 0,$ $a, b, c \in \mathbb{Z}$	Gradient of line $m$	y axis intercept	x axis intercept	Area of triangle enclosed by line and the coordinate axes.	Sketch
Eg1: $y = \frac{2}{3}x + 6$	$2x - 3y + 18 = 0$	$m = \frac{2}{3}$	$x = 0, y = 6$ $\rightarrow (0, 6)$	$y = 0, x = -9$ $\rightarrow (-9, 0)$	$\text{Area} = \frac{1}{2}bh$ $\rightarrow \frac{1}{2}(6)(9) = 27\text{units}^2$	
1) $y = \frac{1}{2}x - 5$						
2)		$m = 3$	$x = 0, y = 8$ $\rightarrow (0, 8)$			
3)	$3x + 4y = 12$					
4)			$(0, 7)$	$(14, 0)$		
5)		$m = -\frac{1}{3}$		$(-9, 0)$		

## Fill in the Gaps

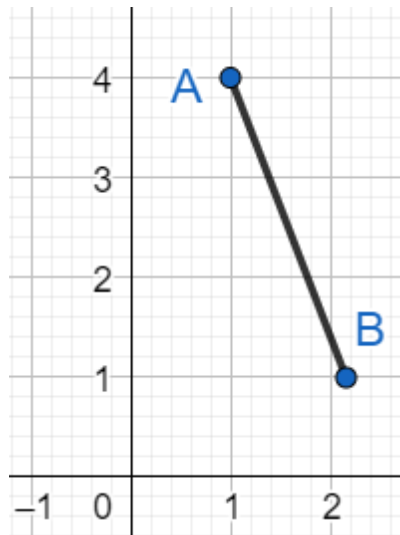
Equation of line $y = mx + c$	Equation of line $ax + by + c = 0,$ $a, b, c \in \mathbb{Z}$	Gradient of line $m$	$y$ axis intercept	$x$ axis intercept	Area of triangle enclosed by line and the coordinate axes.	Sketch
Eg1: $y = \frac{2}{3}x + 6$	$2x - 3y + 18 = 0$	$m = \frac{2}{3}$	$x = 0, y = 6$ $\rightarrow (0, 6)$	$y = 0, x = -9$ $\rightarrow (-9, 0)$	$\text{Area} = \frac{1}{2}bh$ $\rightarrow \frac{1}{2}(6)(9) = 27\text{units}^2$	
6)		$m > 0$	$(0, -6)$		$\text{Area} = 7.5 \text{ units}^2$	
7)		$m = -5$			$\text{Area} = 10 \text{ units}^2$	
8)	$x + ky - 6 = 0$ $k \in \mathbb{R}$	$m = -\frac{1}{4}$				
9)	$y = \frac{3}{4}x + k$ $k > 0, k \in \mathbb{R}$				$\text{Area} = 6 \text{ units}^2$	
10)						

## Extra Notes

## 3 Basic Vectors

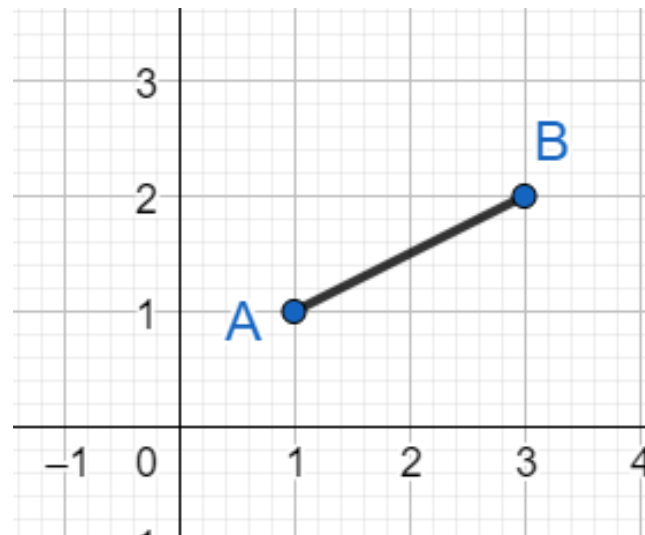
### Worked Example

Write the vector  $\overrightarrow{AB}$  in column form



### Your Turn

Write the vector  $\overrightarrow{AB}$  in column form



## Worked Example

$$\mathbf{a} = \begin{pmatrix} 2 \\ 3 \end{pmatrix}$$


Find  $3\mathbf{a}$  and draw it below



## Your Turn

$$\mathbf{a} = \begin{pmatrix} 2 \\ 3 \end{pmatrix}$$

Find  $-2\mathbf{a}$  and draw it below



### Worked Example

$$\mathbf{a} = \begin{pmatrix} 2 \\ 3 \end{pmatrix}$$

$$\mathbf{b} = \begin{pmatrix} 5 \\ 7 \end{pmatrix}$$

Find  $3\mathbf{a} - 2\mathbf{b}$

### Your Turn

$$\mathbf{a} = \begin{pmatrix} 2 \\ 3 \end{pmatrix}$$

$$\mathbf{b} = \begin{pmatrix} 5 \\ 7 \end{pmatrix}$$

Find  $4\mathbf{a} - 3\mathbf{b}$

## Extra Notes

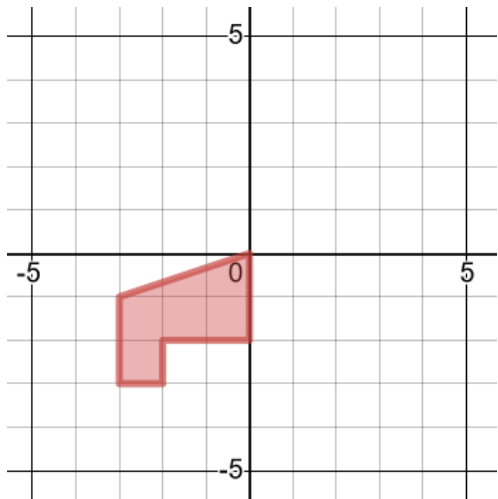
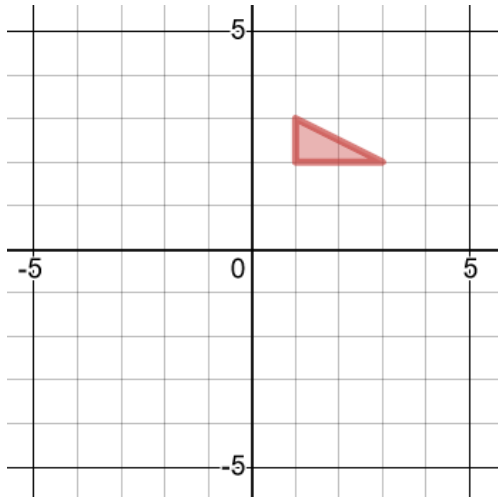


## 4 Transformations

## Reflections

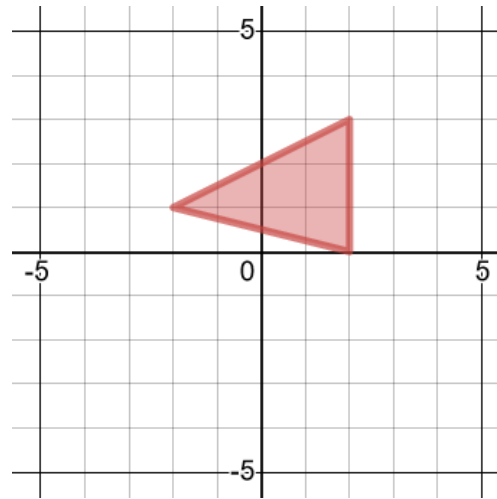
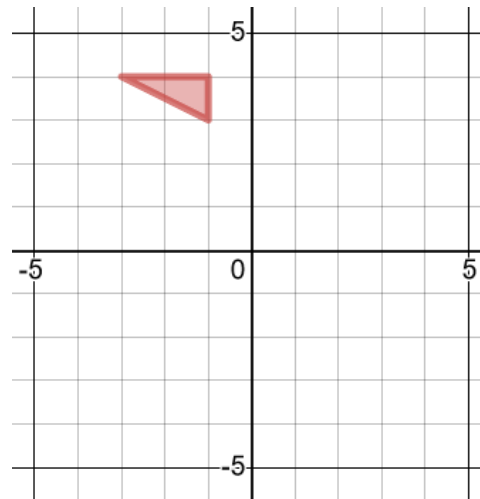
## Worked Example

Reflect in the  $x$ -axis



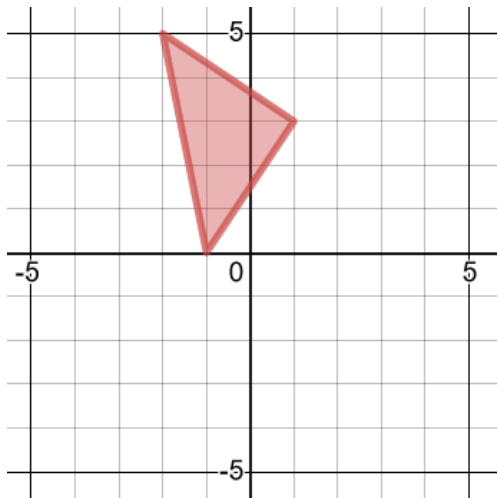
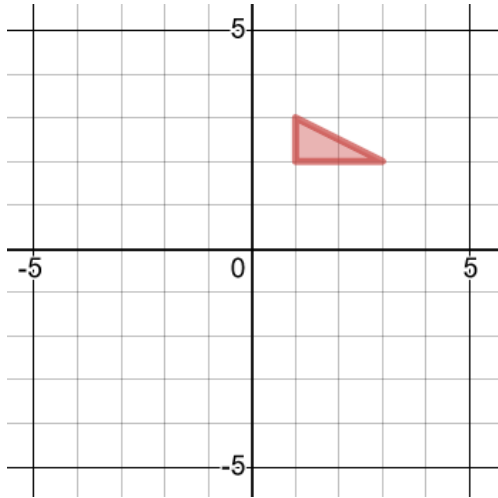
## Your Turn

Reflect in the  $x$ -axis



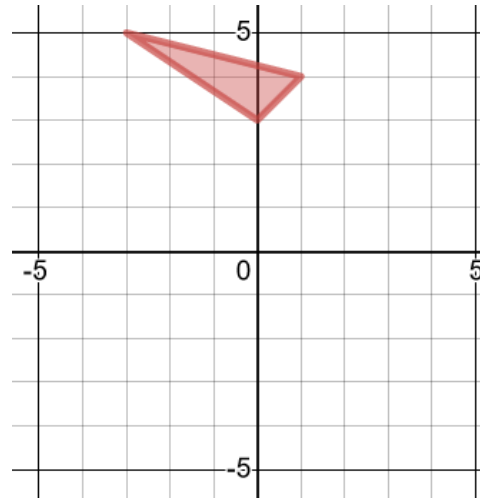
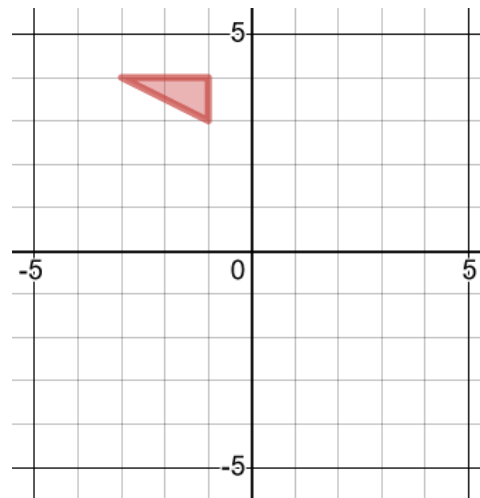
## Worked Example

Reflect in the  $y$ -axis



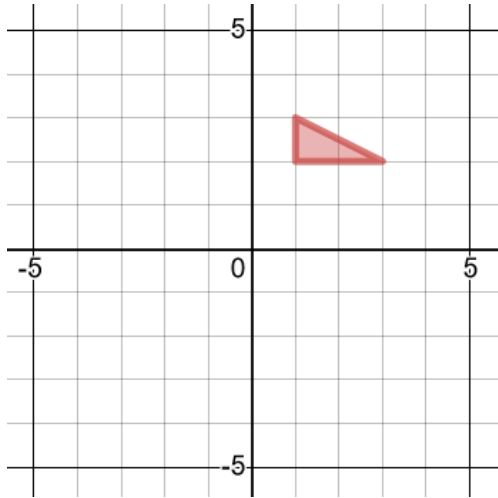
## Your Turn

Reflect in the  $y$ -axis

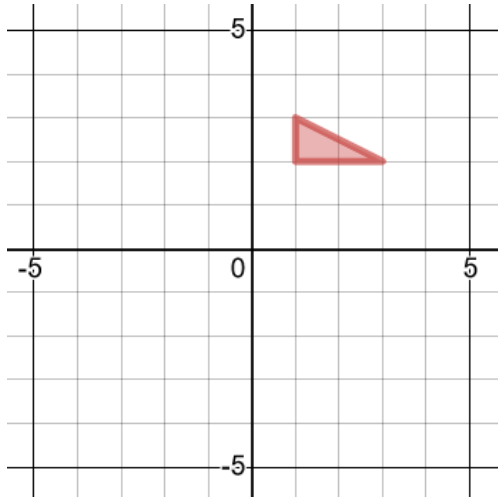


## Worked Example

Reflect in the line  $y = 1$

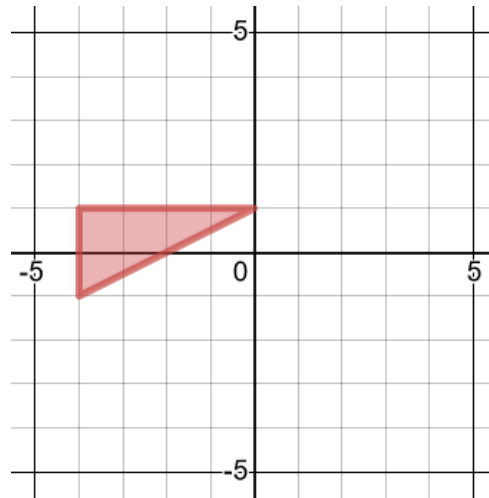


Reflect in the line  $x = 3$

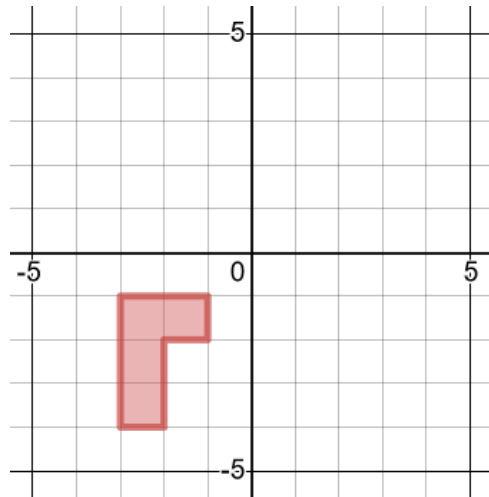


## Your Turn

Reflect in the line  $y = 2$

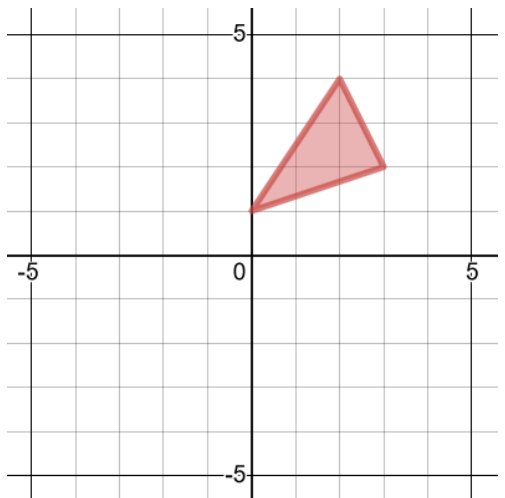
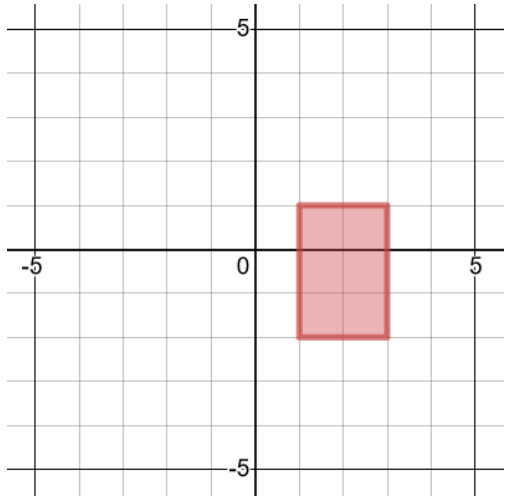


Reflect in the line  $x = 1$



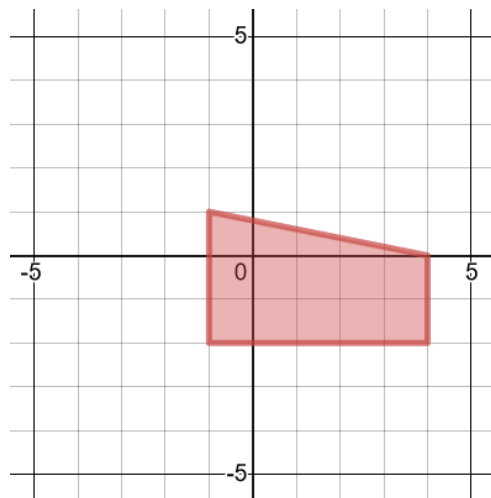
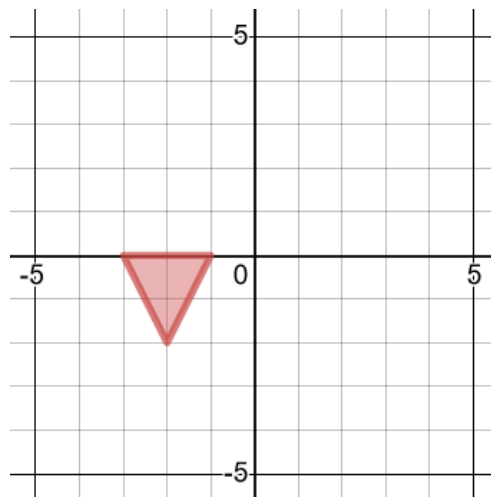
## Worked Example

Reflect in the line  $y = x$



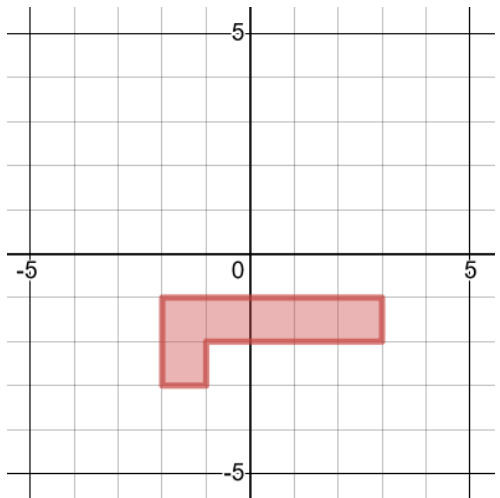
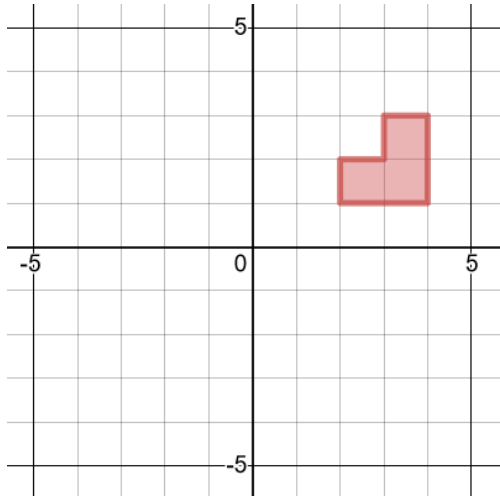
## Your Turn

Reflect in the line  $y = x$



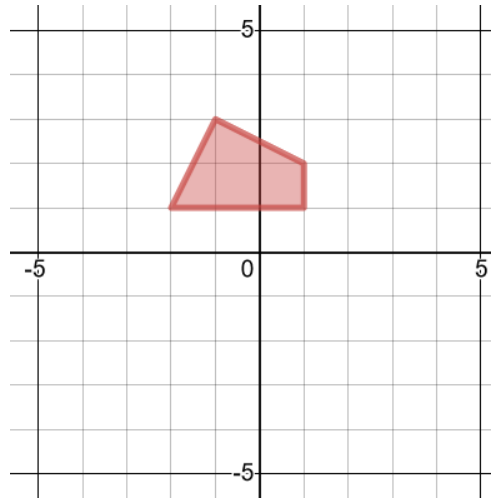
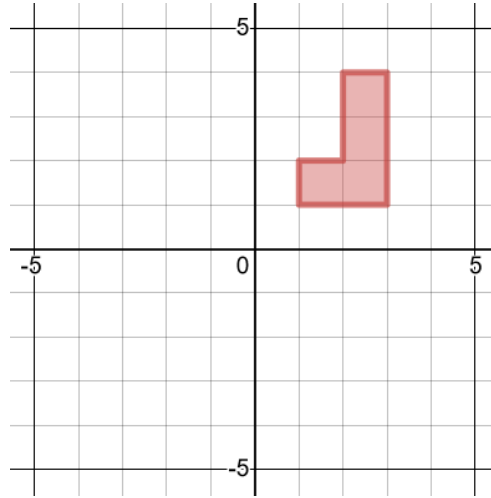
## Worked Example

Reflect in the line  $y = -x$



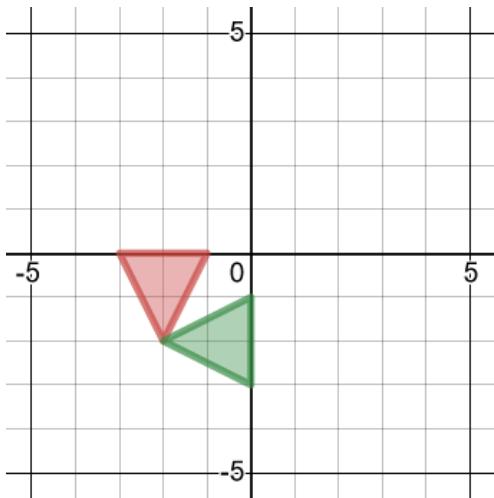
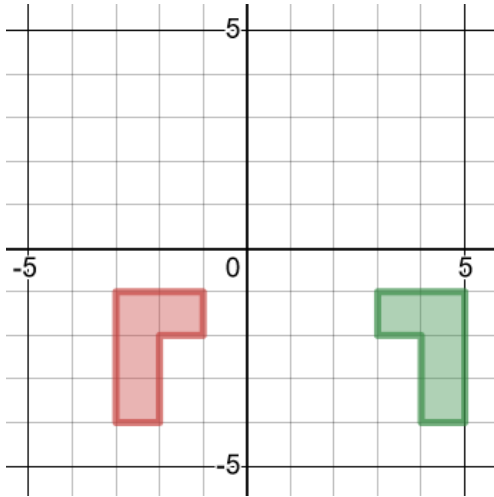
## Your Turn

Reflect in the line  $y = -x$



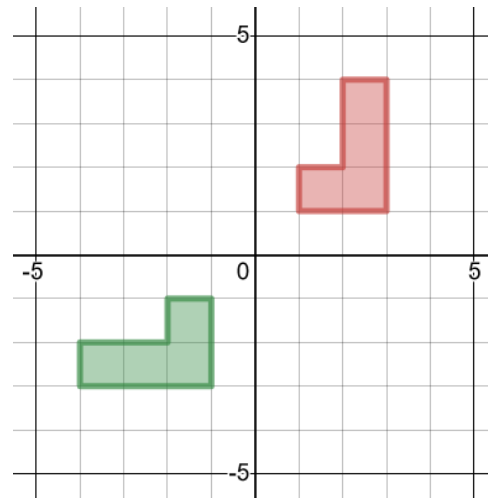
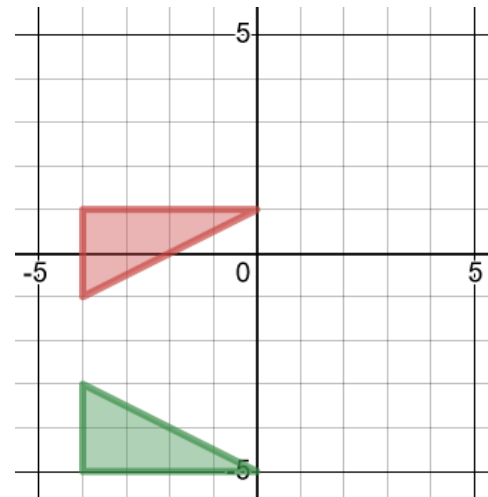
## Worked Example

Describe the single transformation of the red object onto the green image



## Your Turn

Describe the single transformation of the red object onto the green image

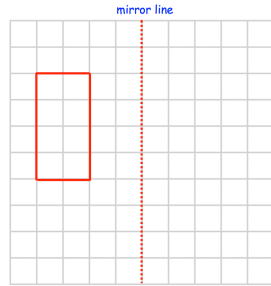




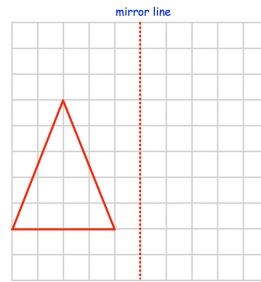
# Fluency Practice

Question 1: Reflect each shape in the mirror line given

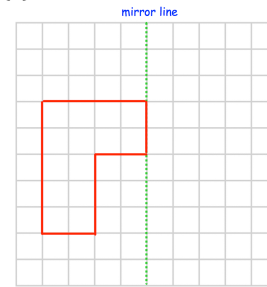
(a)



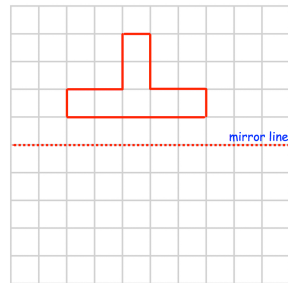
(b)



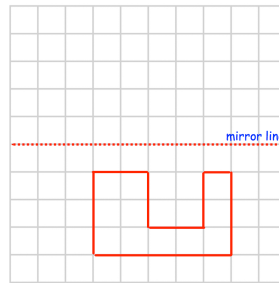
(c)



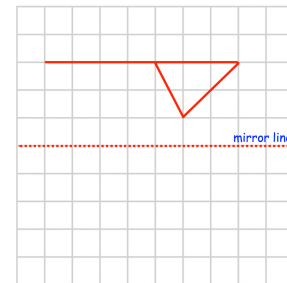
(d)



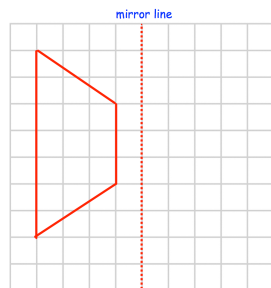
(e)



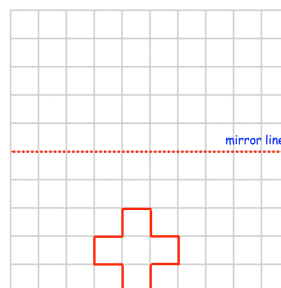
(f)



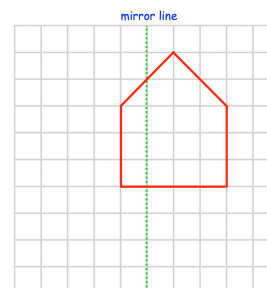
(g)



(h)

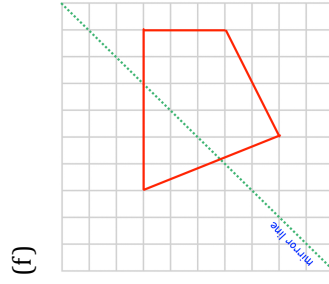
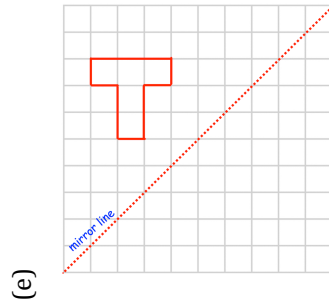
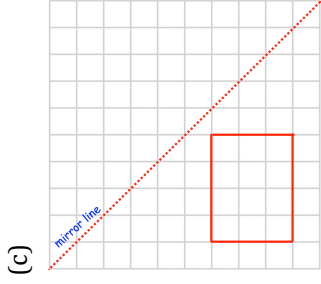
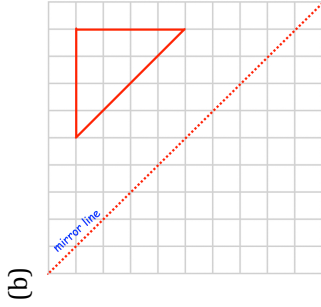
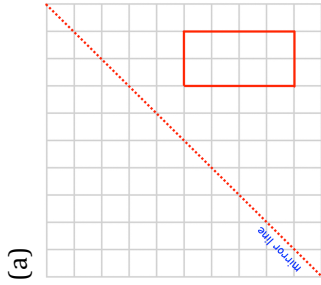


(i)

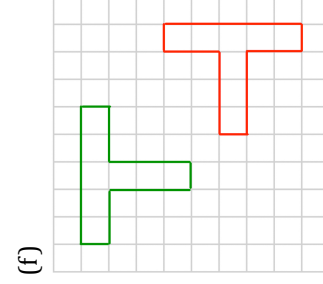
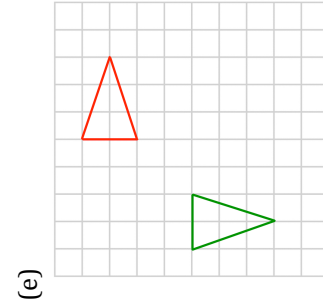
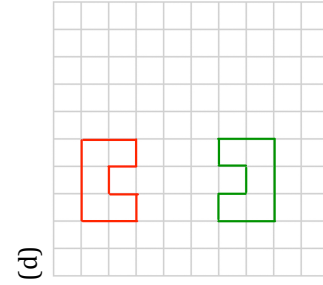
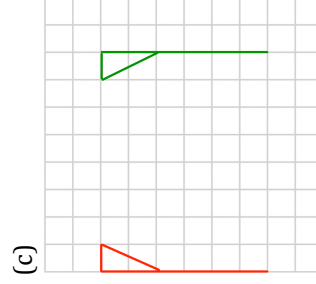
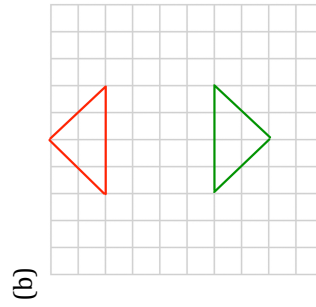
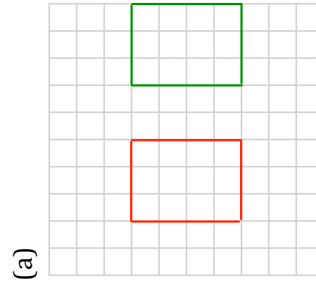


# Fluency Practice

Question 2: Reflect each shape in the mirror line given



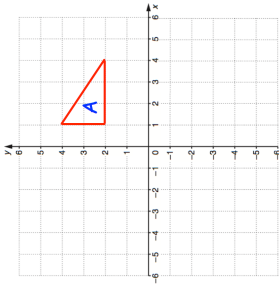
Question 3: Find the mirror line for each of the reflections below.



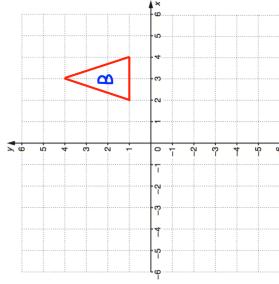
# Fluency Practice

## Question 4:

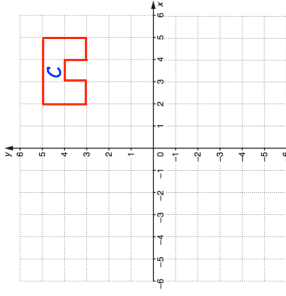
(a) Reflect triangle A in the x-axis



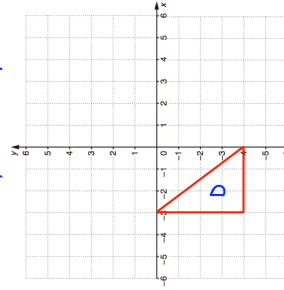
(b) Reflect triangle B in the y-axis



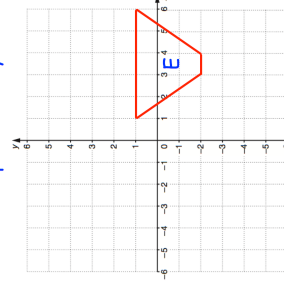
(c) Reflect shape C in the x-axis



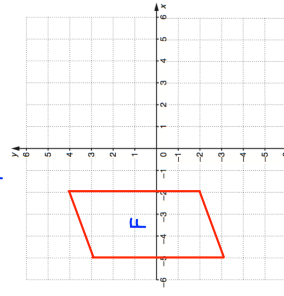
(d) Reflect shape D in the y-axis



(e) Reflect shape E in the y-axis

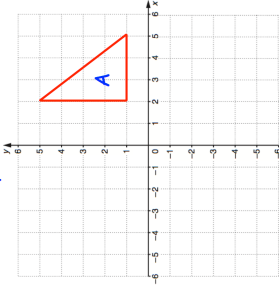


(f) Reflect shape F in the x-axis

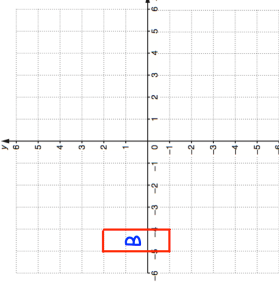


## Question 5:

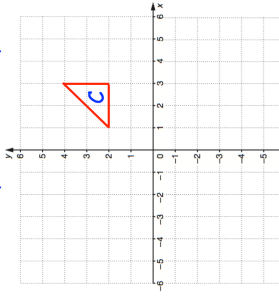
(a) Reflect shape A in the line  $x = 1$



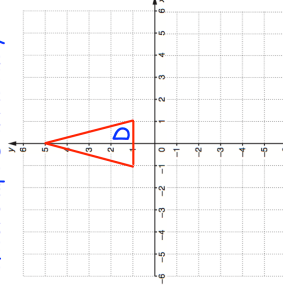
(b) Reflect shape B in the line  $x = -2$



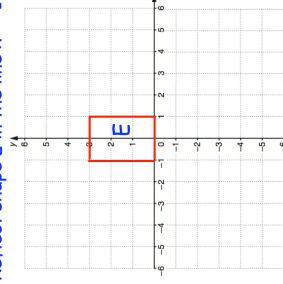
(c) Reflect shape C in the line  $y = -1$



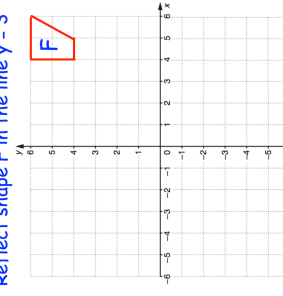
(d) Reflect shape D in the line  $y = 2$



(e) Reflect shape E in the line  $x = -1$



(f) Reflect shape F in the line  $y = 3$

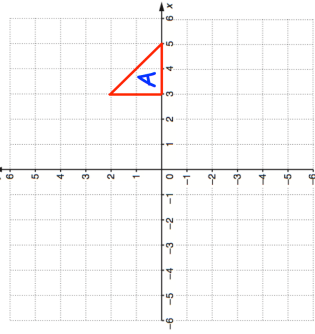


# Fluency Practice

Question 6:

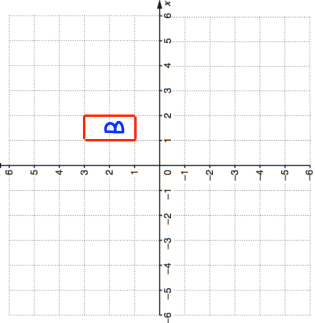
(a)

Reflect shape A in the line  $y = x$



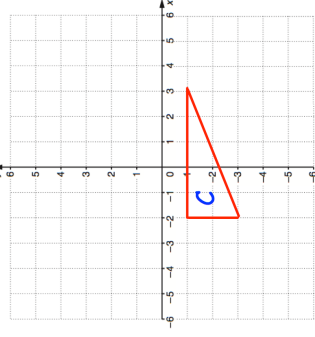
(b)

Reflect shape B in the line  $y = -x$



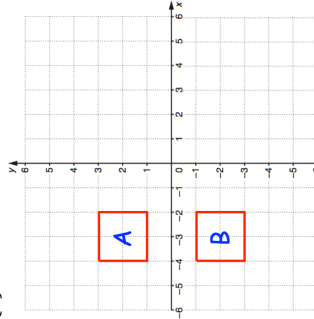
(c)

Reflect shape C in the line  $y = x$

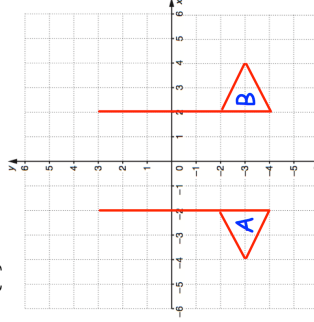


Question 7: Describe fully the single transformation that takes shape A to shape B.

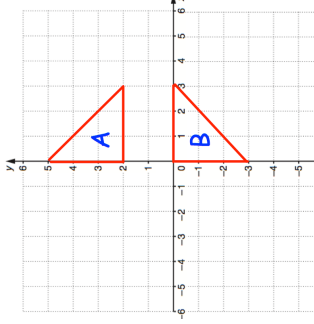
(a)



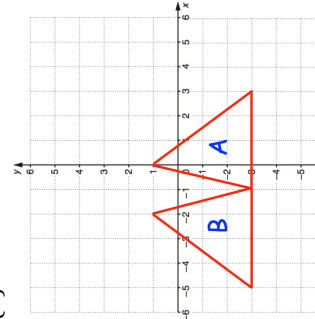
(b)



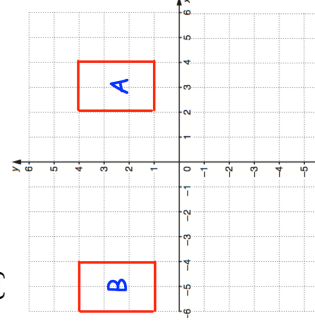
(c)



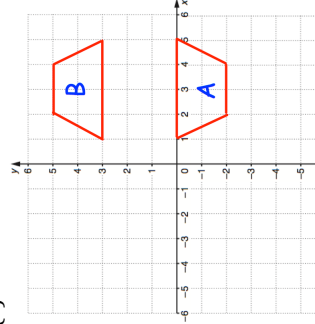
(d)



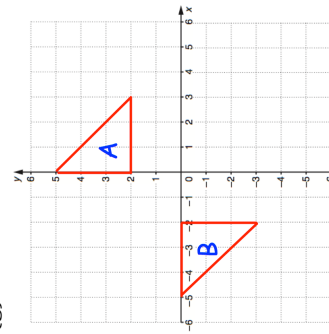
(e)



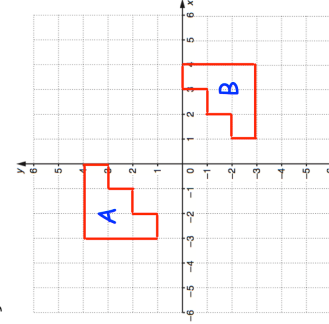
(f)



(g)

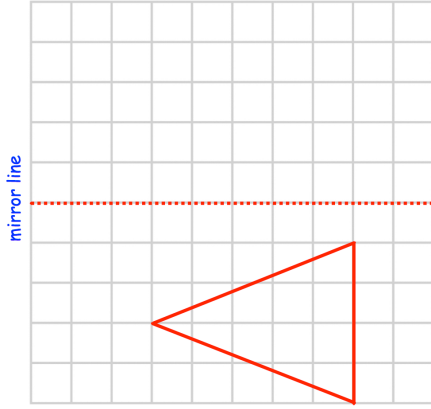


(h)

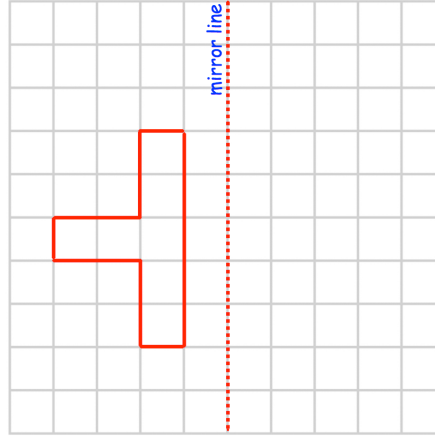


# Templates

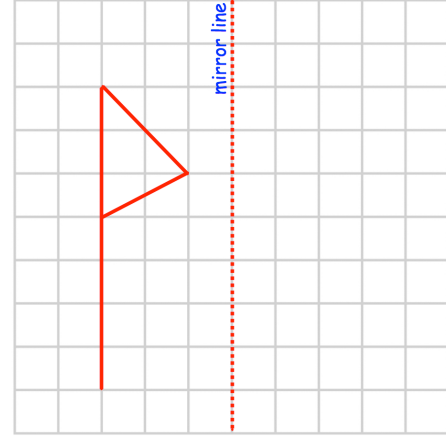
Question 1(b)



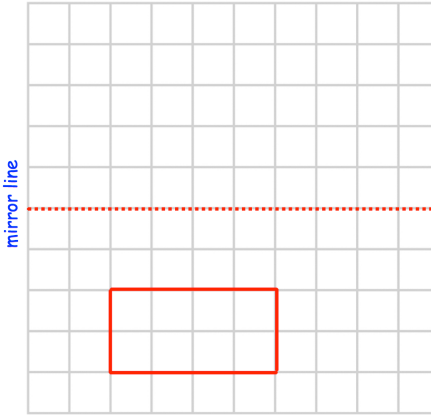
Question 1(d)



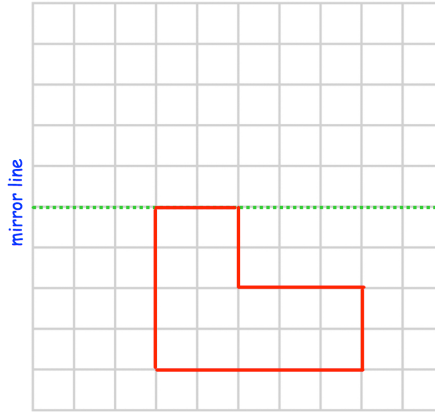
Question 1(f)



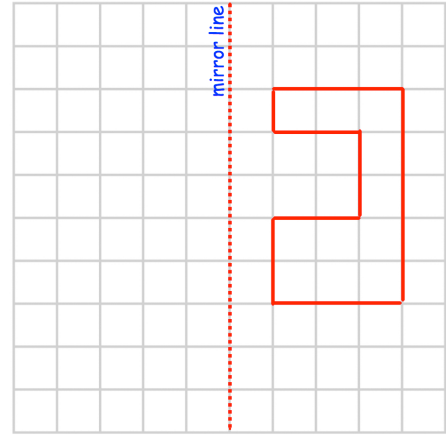
Question 1(a)



Question 1(c)

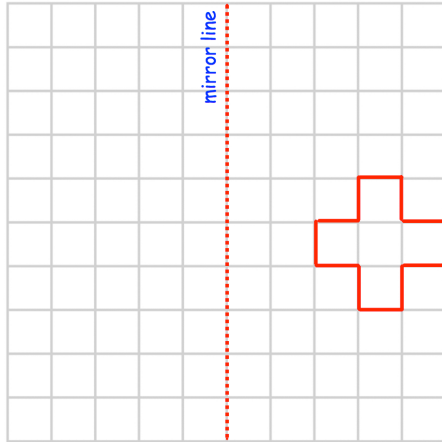


Question 1(e)

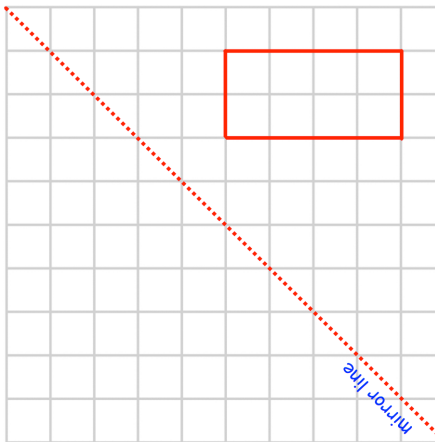


# Templates

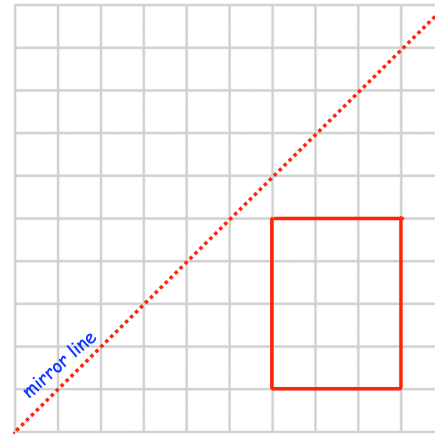
Question 1(h)



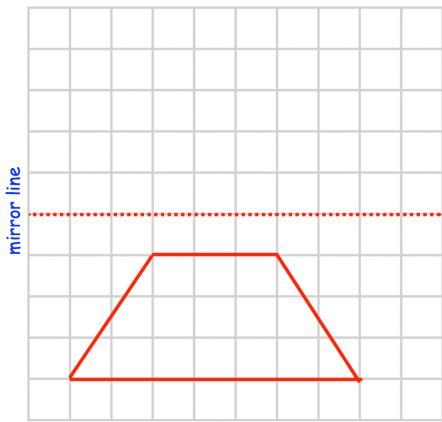
Question 2(a)



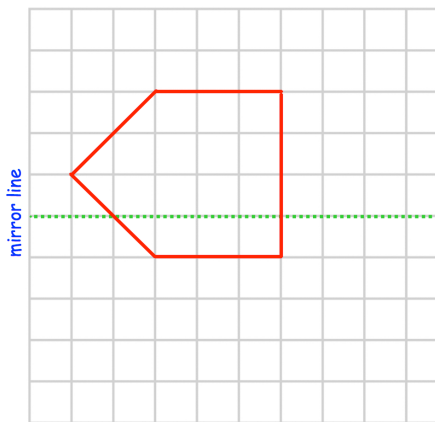
Question 2(c)



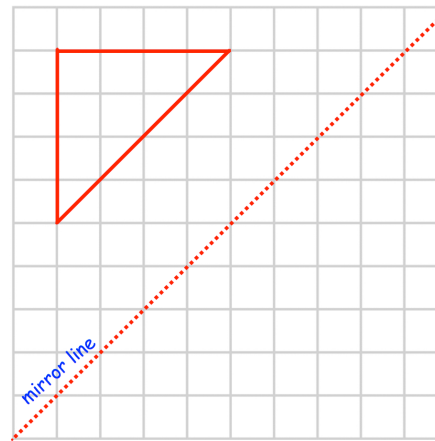
Question 1(g)



Question 1(i)

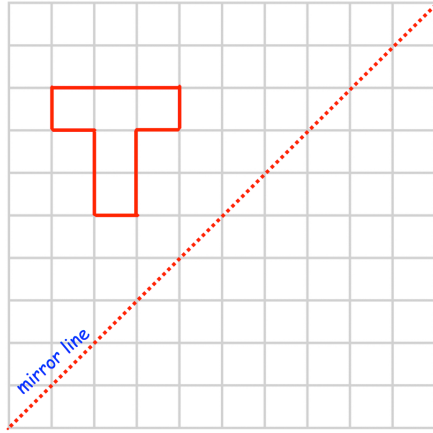


Question 2(b)

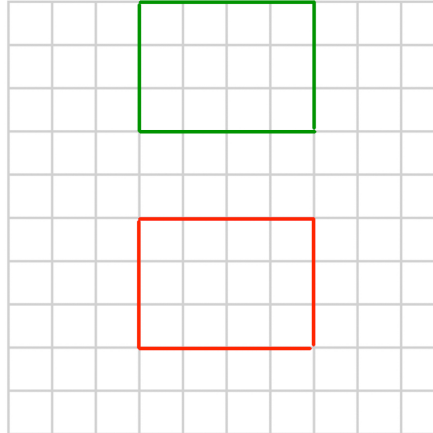


# Templates

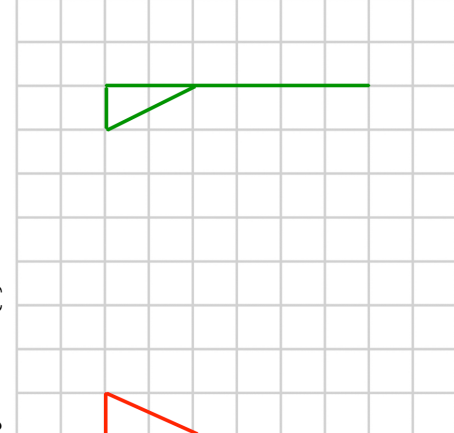
Question 2(e)



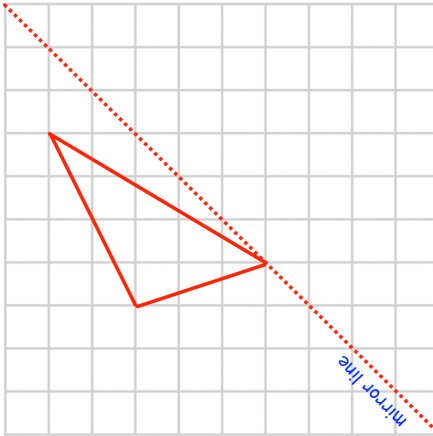
Question 3(a)



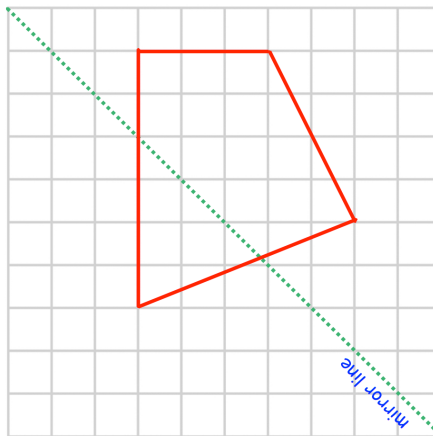
Question 3(c)



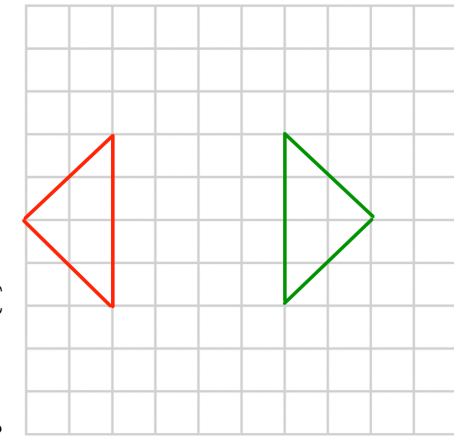
Question 2(d)



Question 2(f)

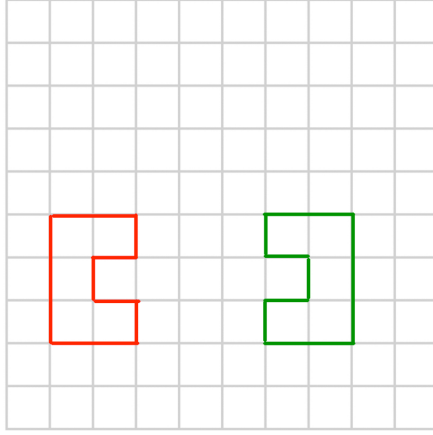


Question 3(b)

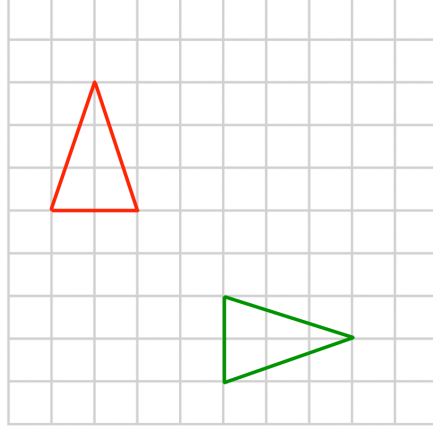


# Templates

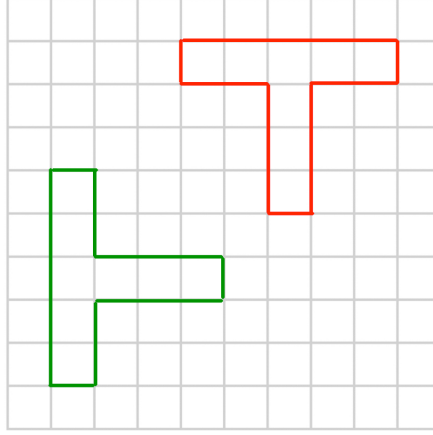
Question 3(d)



Question 3(e)

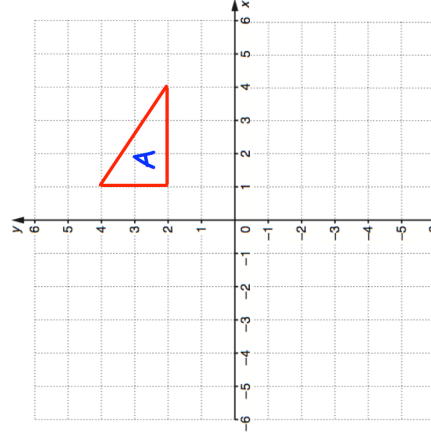


Question 3(f)



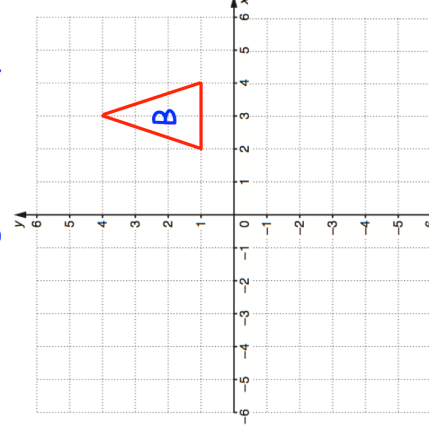
Question 4(a)

Reflect triangle A in the x-axis



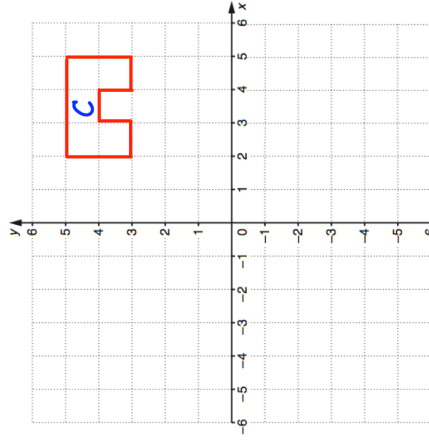
Question 4(b)

Reflect triangle B in the y-axis



Question 4(c)

Reflect shape C in the x-axis

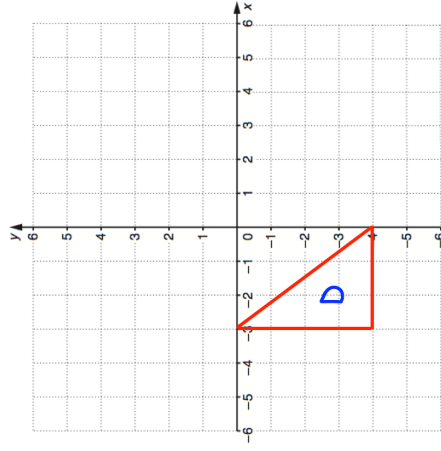




# Templates

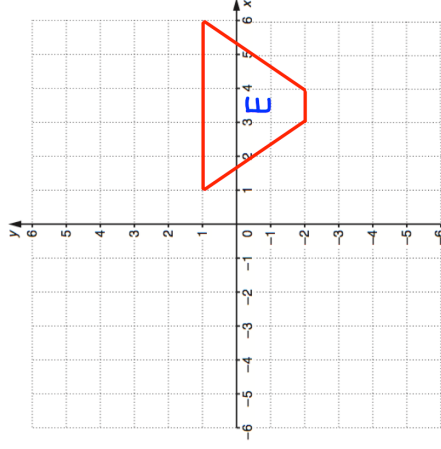
Question 4(d)

Reflect shape D in the y-axis



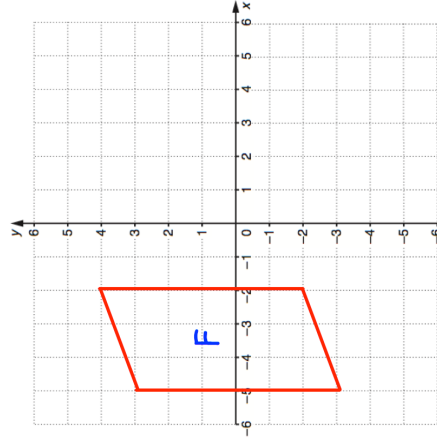
Question 4(e)

Reflect shape E in the y-axis



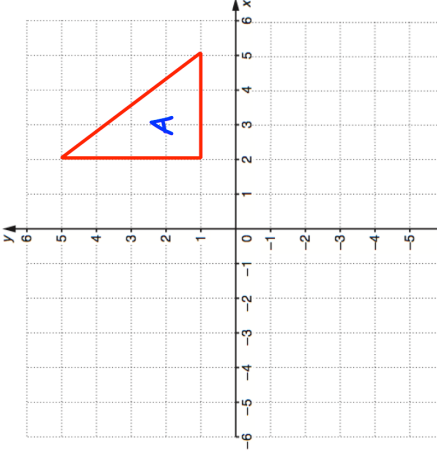
Question 4(f)

Reflect shape F in the x-axis



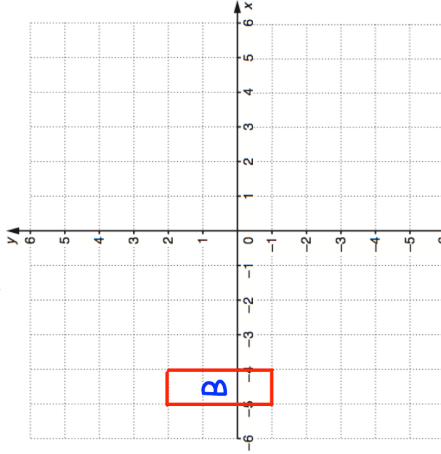
Question 5(a)

Reflect shape A in the line  $x = 1$



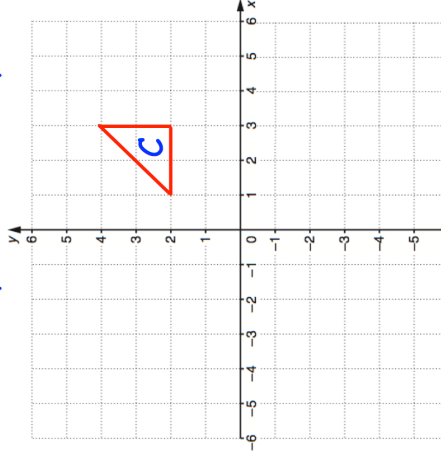
Question 5(b)

Reflect shape B in the line  $x = -2$



Question 5(c)

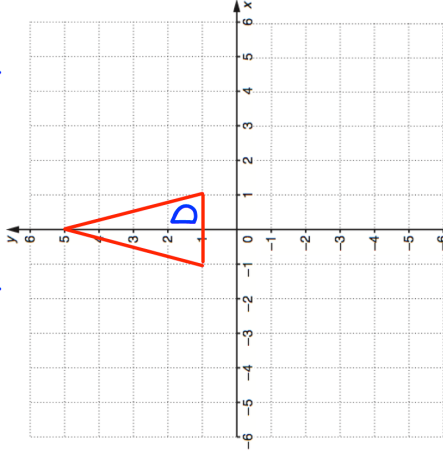
Reflect shape C in the line  $y = -1$



# Templates

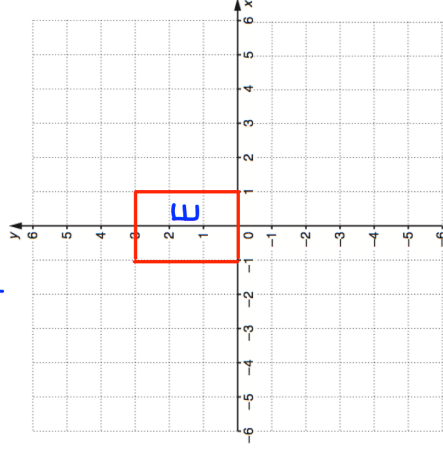
Question 5(d)

Reflect shape D in the line  $y = 2$



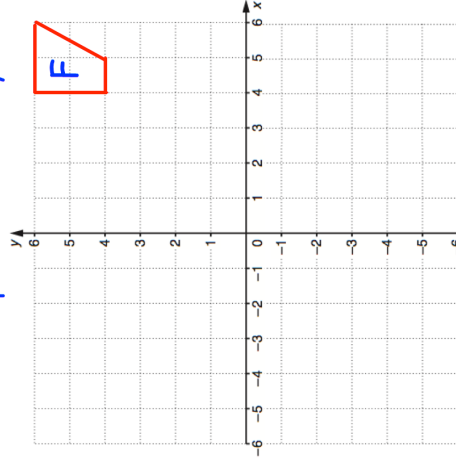
Question 5(e)

Reflect shape E in the line  $x = -1$



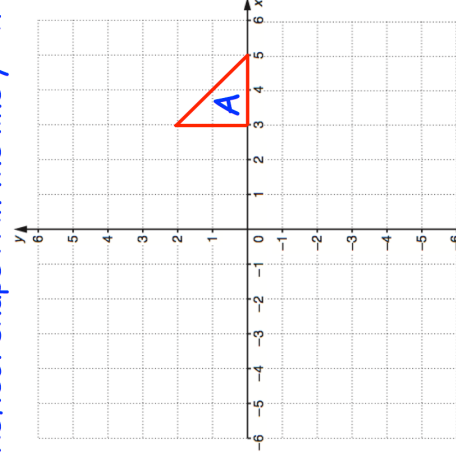
Question 5(f)

Reflect shape F in the line  $y = 3$



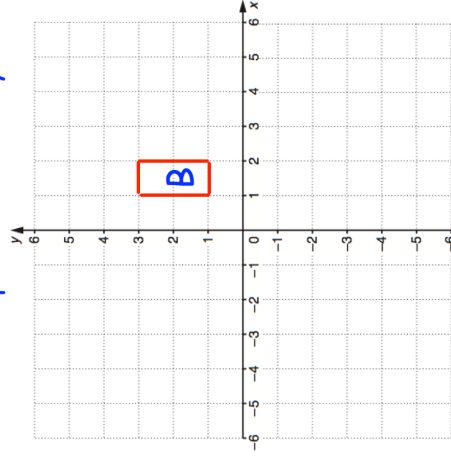
Question 6(a)

Reflect shape A in the line  $y = x$



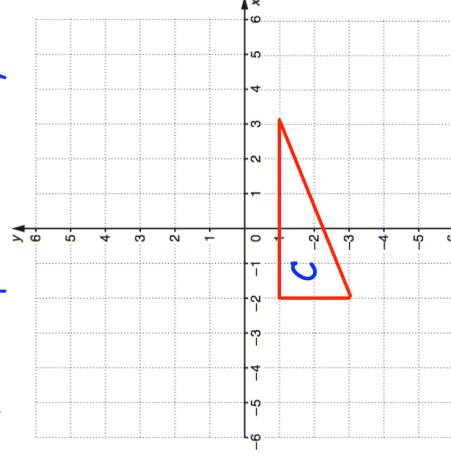
Question 6(b)

Reflect shape B in the line  $y = -x$



Question 6(c)

Reflect shape C in the line  $y = x$



### Worked Example

- a) A point  $(-3, 7)$  is reflected in the  $y$ -axis. What is the image of the point after the transformation?
- b) A point  $(-3, 7)$  is reflected in the  $x$ -axis. What is the image of the point after the transformation?
- c) A point  $(-3, 7)$  is reflected in the line  $y = x$ . What is the image of the point after the transformation?
- d) A point  $(-3, 7)$  is reflected in the line  $y = -x$ . What is the image of the point after the transformation?

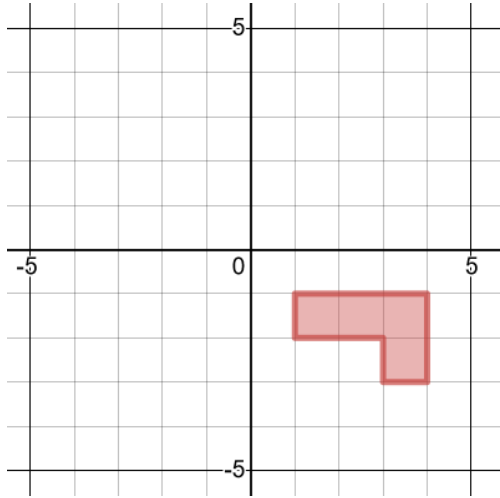
### Your Turn

- a) A point  $(-5, 4)$  is reflected in the  $y$ -axis. What is the image of the point after the transformation?
- b) A point  $(-5, 4)$  is reflected in the  $x$ -axis. What is the image of the point after the transformation?
- c) A point  $(-5, 4)$  is reflected in the line  $y = x$ . What is the image of the point after the transformation?
- d) A point  $(-5, 4)$  is reflected in the line  $y = -x$ . What is the image of the point after the transformation?

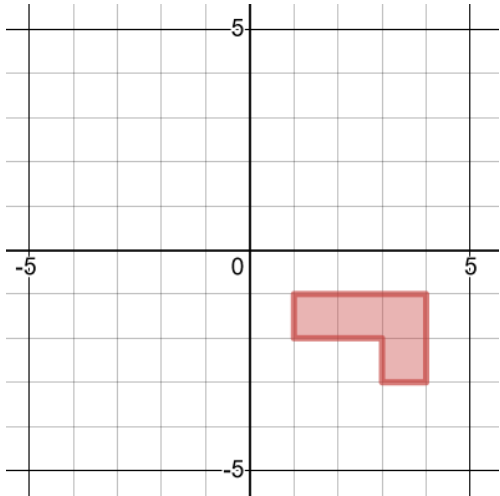
# Rotations

## Worked Example

Rotate  $90^\circ$  clockwise about the origin

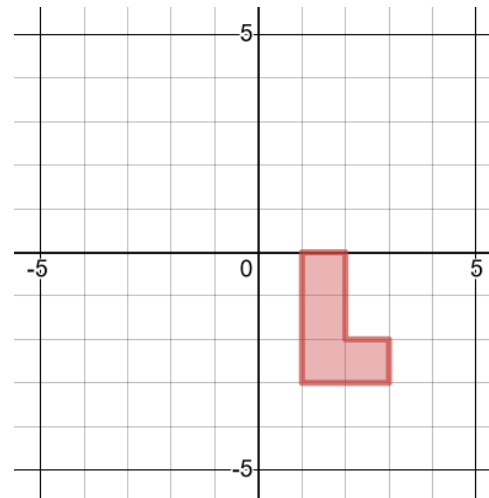


Rotate  $90^\circ$  anticlockwise about the origin

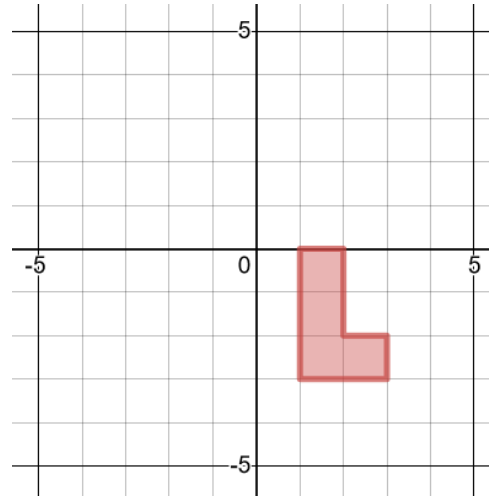


## Your Turn

Rotate  $90^\circ$  clockwise about the origin

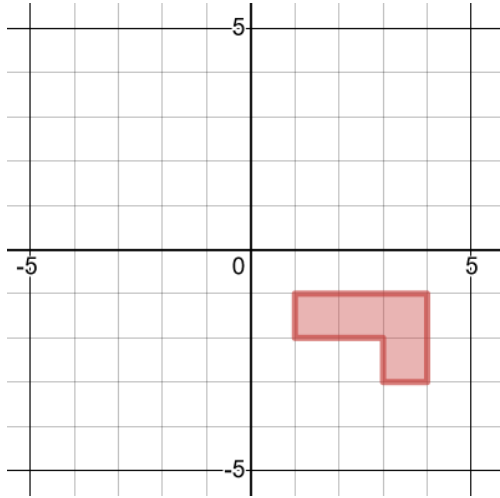


Rotate  $90^\circ$  anticlockwise about the origin

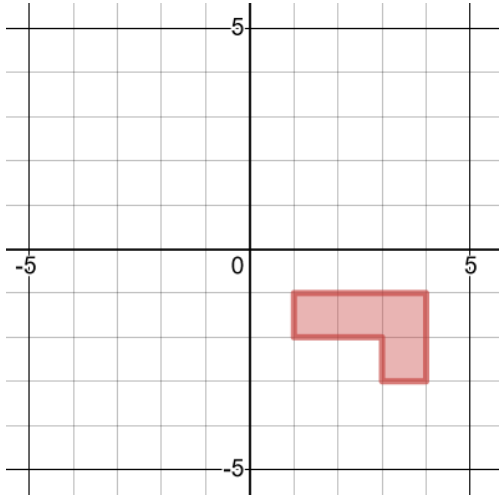


## Worked Example

Rotate  $90^\circ$  clockwise about  $(1, -1)$

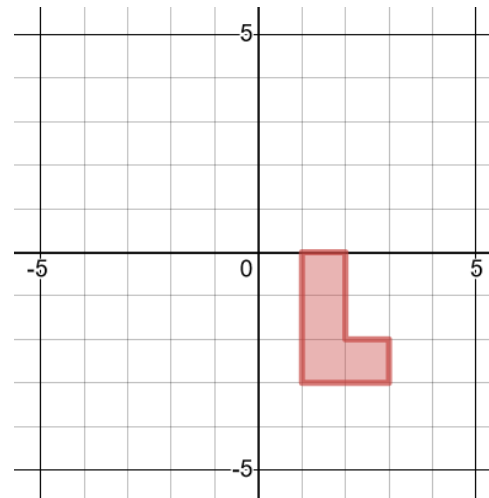


Rotate  $90^\circ$  anticlockwise about  $(1, -1)$

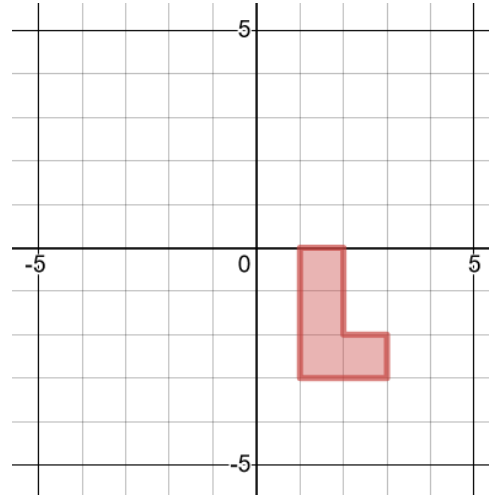


## Your Turn

Rotate  $90^\circ$  clockwise about  $(1, -1)$

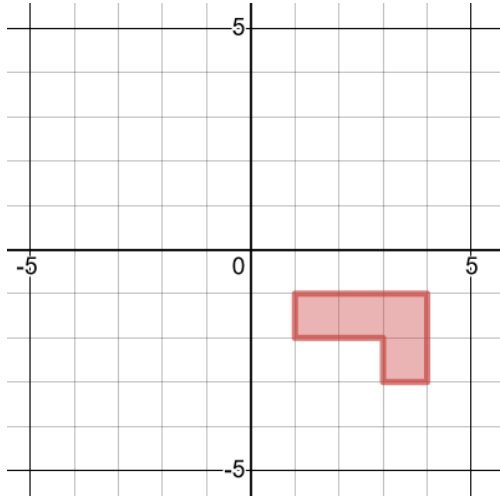


Rotate  $90^\circ$  anticlockwise about  $(1, -1)$

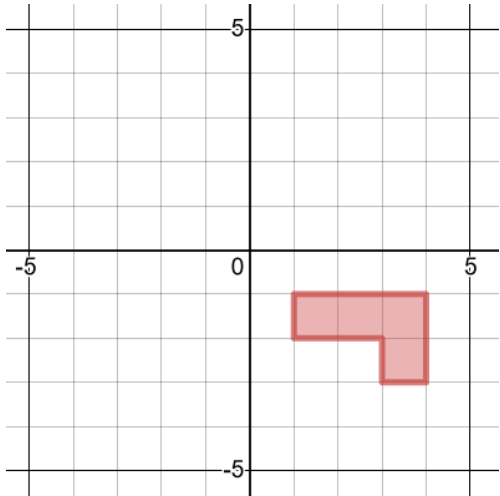


## Worked Example

Rotate  $180^\circ$  about the origin

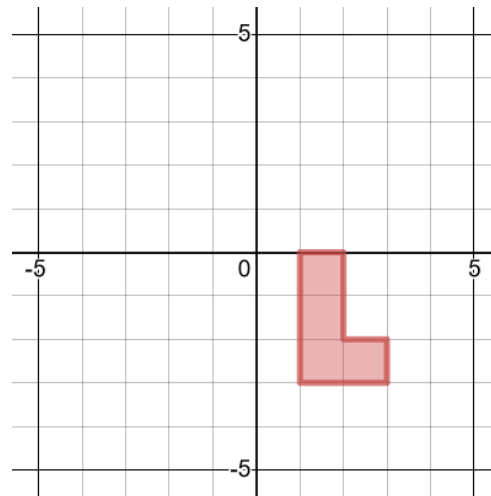


Rotate  $180^\circ$  about  $(1, -1)$

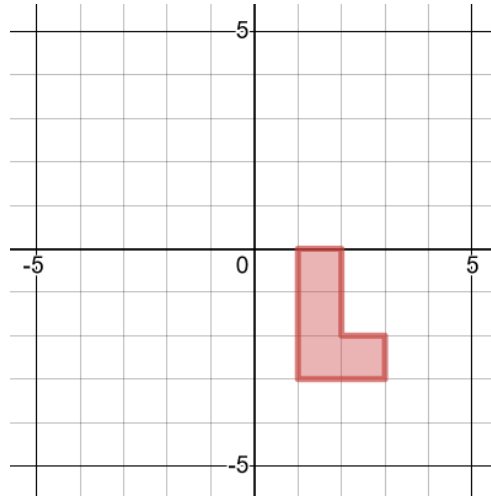


## Your Turn

Rotate  $180^\circ$  about the origin

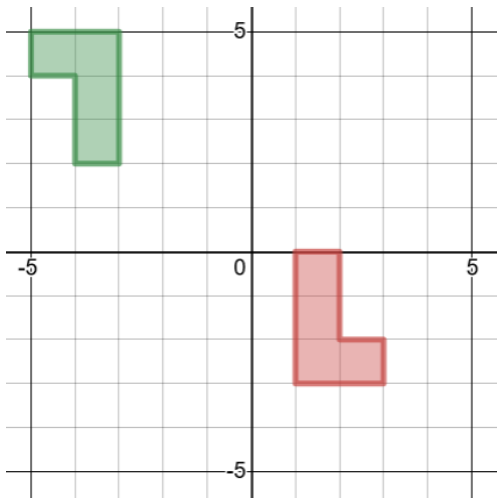
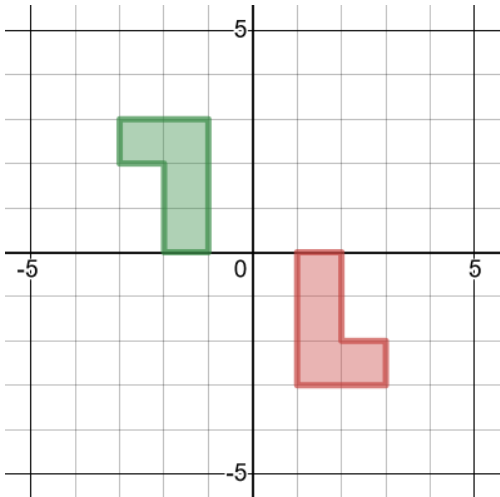


Rotate  $180^\circ$  about  $(1, -1)$



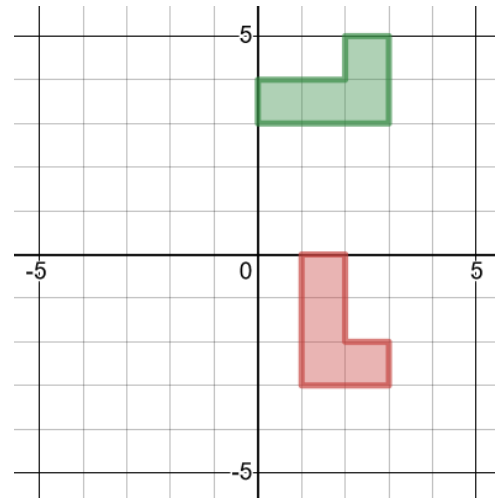
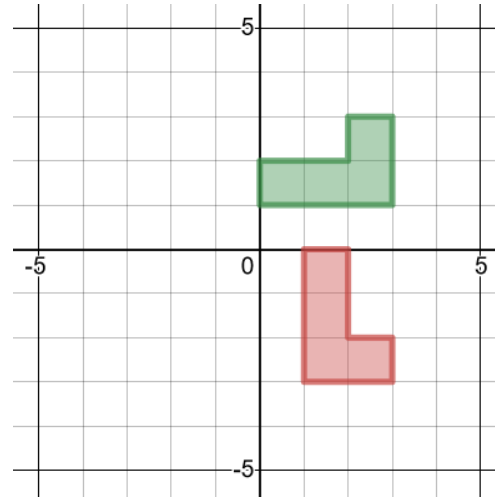
## Worked Example

Describe the single transformation of the red object onto the green image.



## Your Turn

Describe the single transformation of the red object onto the green image.

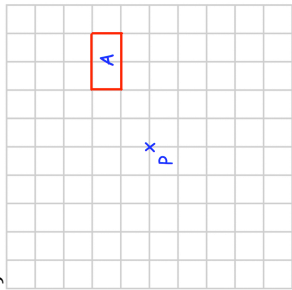




# Fluency Practice

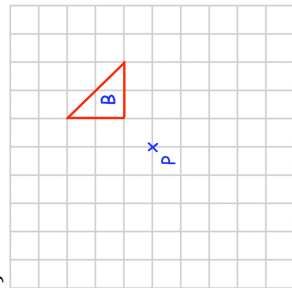
Question 1: Rotate each of the shapes below as instructed, using P as the centre of rotation.

(a)



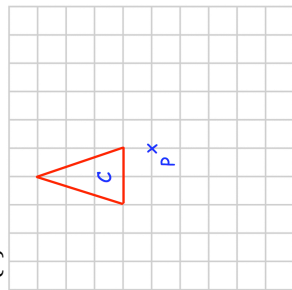
rotate  $90^\circ$  clockwise about P

(b)



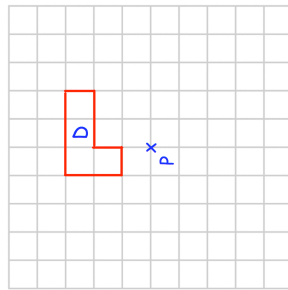
rotate  $90^\circ$  anticlockwise about P

(c)



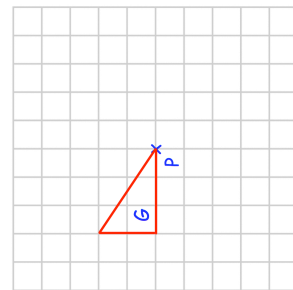
rotate  $90^\circ$  clockwise about P

(d)



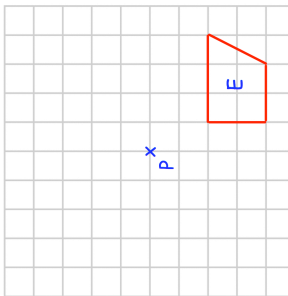
rotate  $180^\circ$  about P

(g)



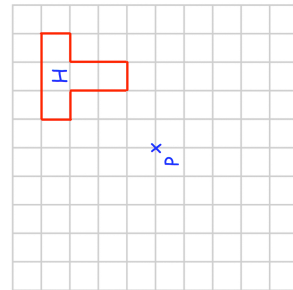
rotate  $90^\circ$  clockwise about P

(e)



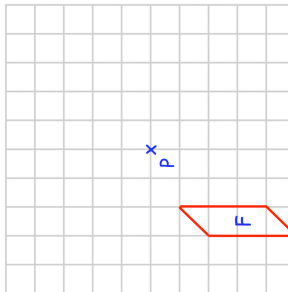
rotate  $90^\circ$  anticlockwise about P

(h)



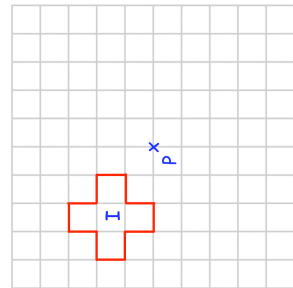
rotate  $270^\circ$  clockwise about P

(f)



rotate  $180^\circ$  about P

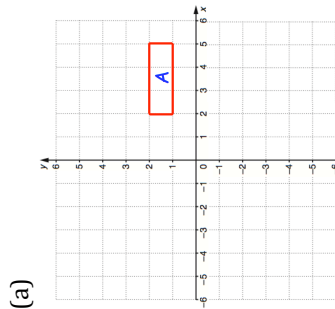
(i)



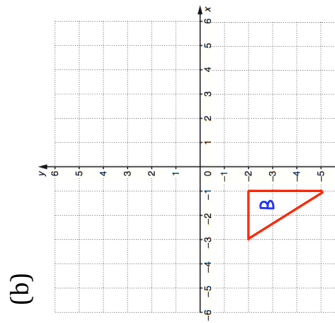
rotate  $270^\circ$  anticlockwise about P

# Fluency Practice

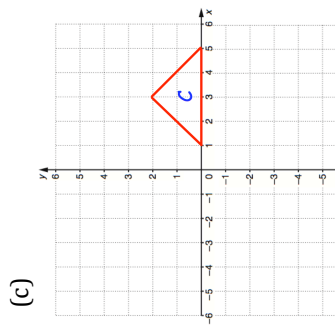
Question 2: Rotate each of the shapes below as instructed, using the origin, (0,0), as the centre of rotation.



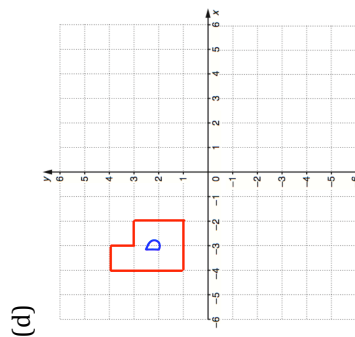
rotate  $180^\circ$  about (0, 0)



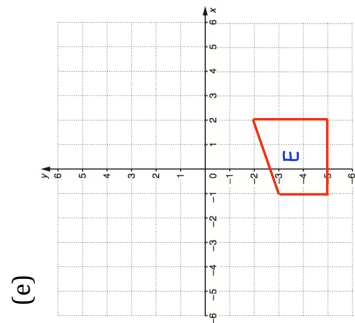
rotate  $90^\circ$  clockwise about (0, 0)



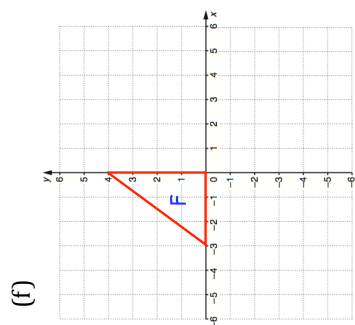
rotate  $90^\circ$  anticlockwise about (0, 0)



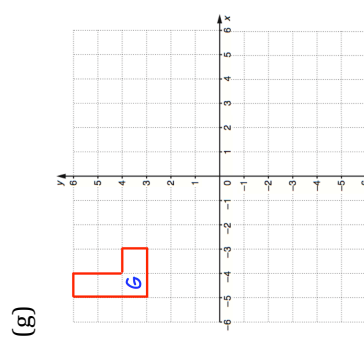
rotate  $90^\circ$  clockwise about (0, 0)



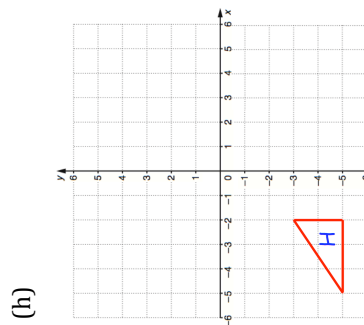
rotate  $90^\circ$  anticlockwise about (0, 0)



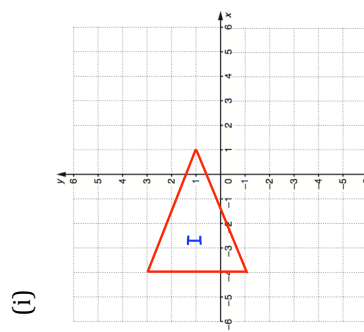
rotate  $180^\circ$  about (0, 0)



rotate  $90^\circ$  anticlockwise about (0, 0)



rotate  $180^\circ$  about (0, 0)

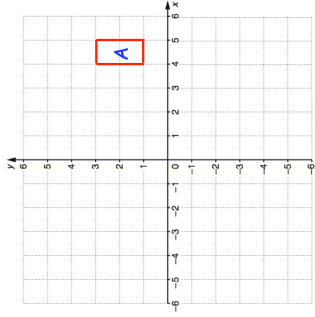


rotate  $90^\circ$  clockwise about (0, 0)

# Fluency Practice

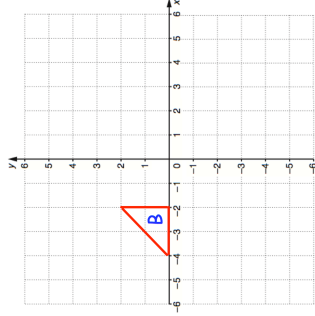
Question 3: Rotate each of the shapes below as instructed.

(a)



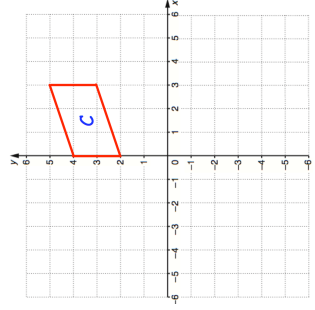
rotate  $90^\circ$  anticlockwise about  $(0, 1)$

(b)



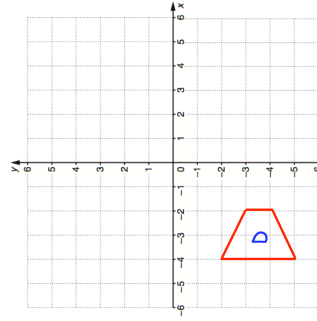
rotate  $90^\circ$  clockwise about  $(-1, -2)$

(c)



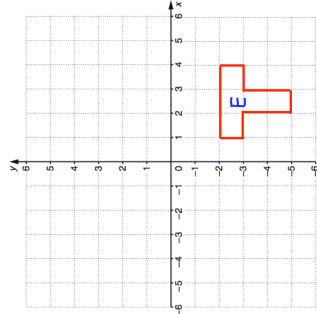
rotate  $180^\circ$  about  $(1, 1)$

(d)



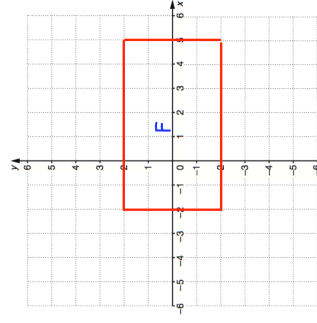
rotate  $90^\circ$  anticlockwise about  $(-4, 0)$

(e)



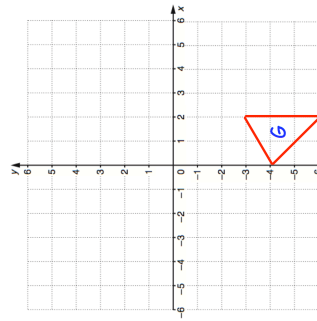
rotate  $180^\circ$  about  $(-1, 0)$

(f)



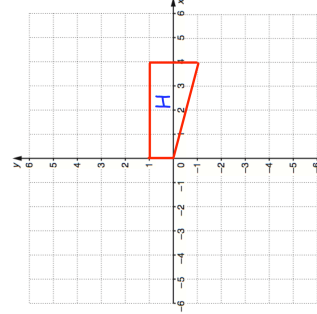
rotate  $90^\circ$  clockwise about  $(-1, 2)$

(g)



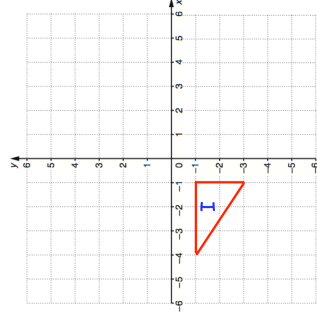
rotate  $90^\circ$  clockwise about  $(5, 0)$

(h)



rotate  $90^\circ$  anticlockwise about  $(3, 0)$

(i)

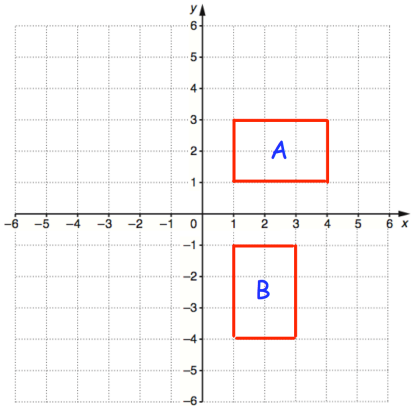


rotate  $180^\circ$  about  $(1, 1)$

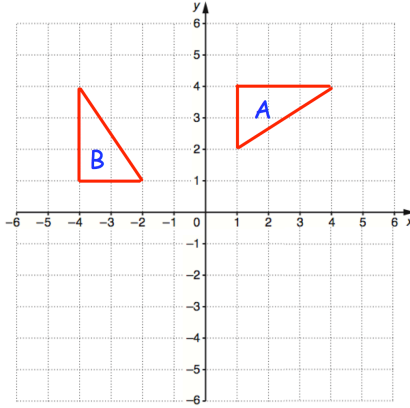
# Fluency Practice

Question 4: Describe fully the single transformation that takes shape A to shape B.

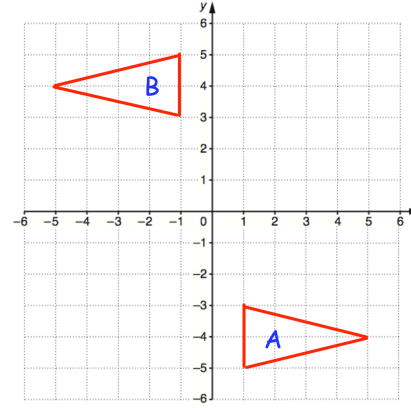
(a)



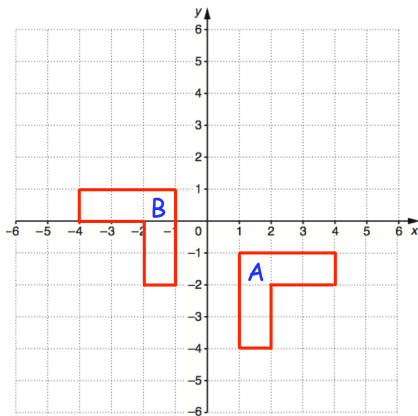
(b)



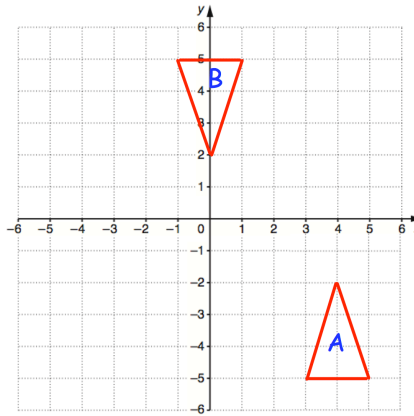
(c)



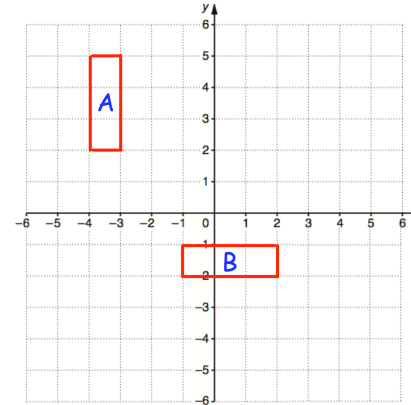
(d)



(e)

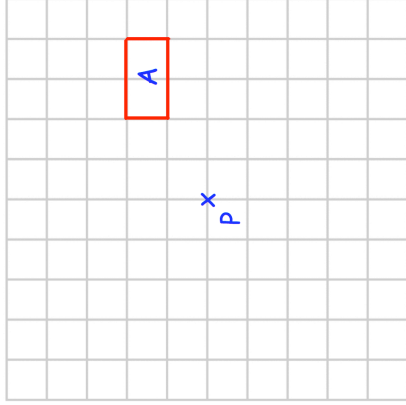


(f)



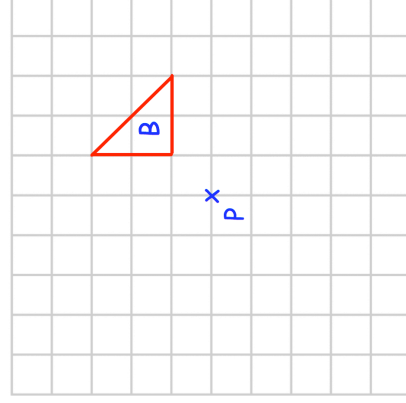
# Templates

Q1(a)



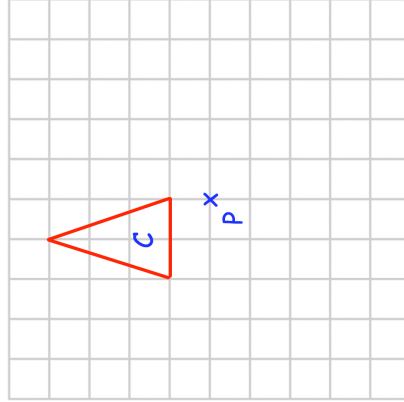
rotate 90° clockwise about P

Q1(b)



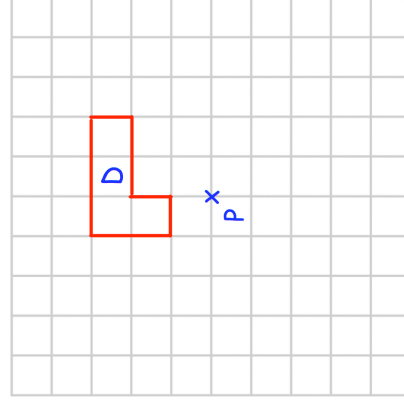
rotate 90° anticlockwise about P

Q1(c)



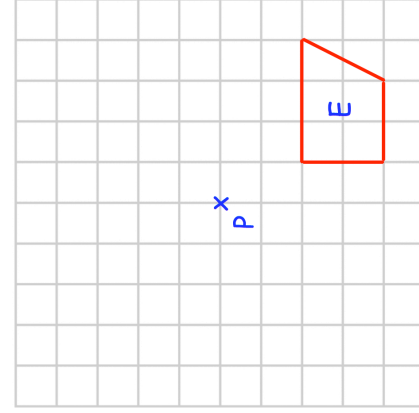
rotate 90° clockwise about P

Q1(d)



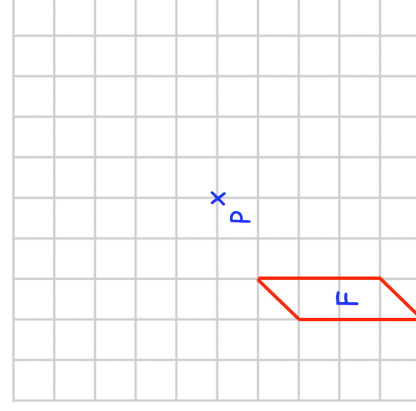
rotate 180° about P

Q1(e)



rotate 90° anticlockwise about P

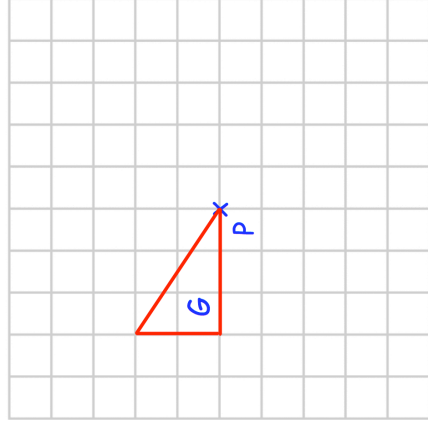
Q1(f)



rotate 180° about P

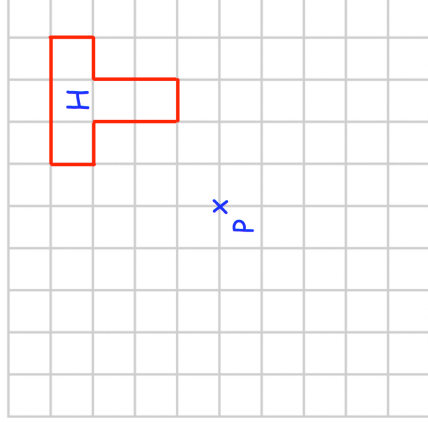
# Templates

Q1(g)



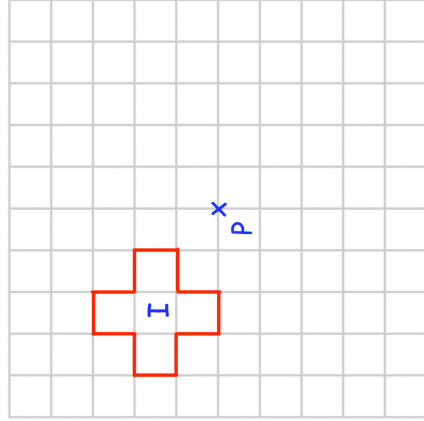
rotate  $90^\circ$  clockwise about P

Q1(h)



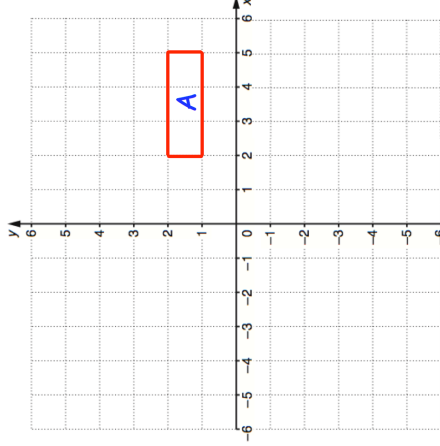
rotate  $270^\circ$  clockwise about P

Q1(i)



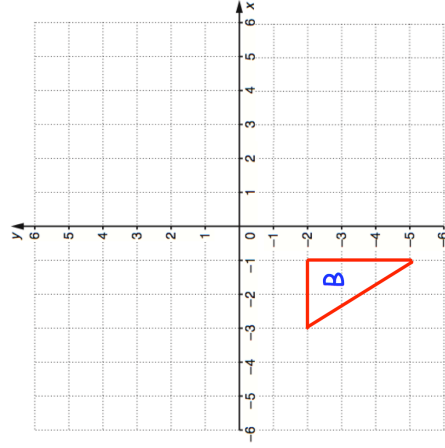
rotate  $270^\circ$  anticlockwise about P

Q2(a)



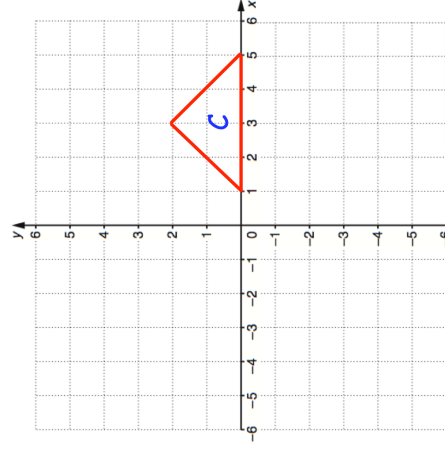
rotate  $180^\circ$  about (0, 0)

Q2(b)



rotate  $90^\circ$  clockwise about (0, 0)

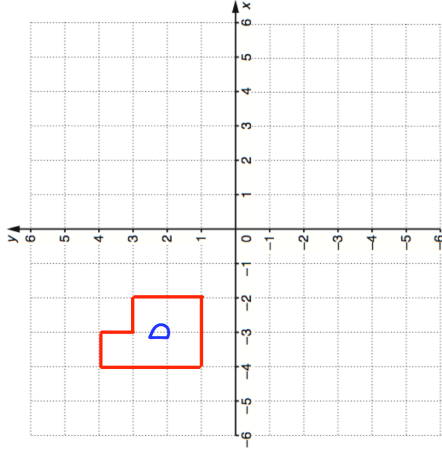
Q2(c)



rotate  $90^\circ$  anticlockwise about (0, 0)

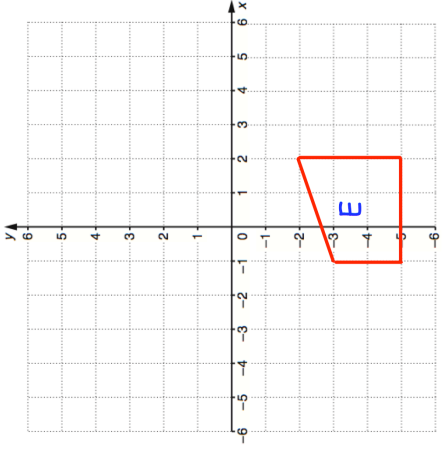
# Templates

Q2(d)



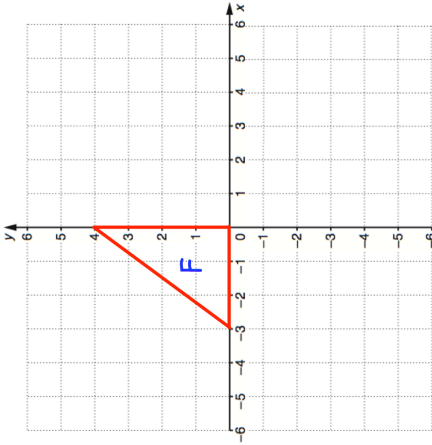
rotate  $90^\circ$  clockwise about  $(0, 0)$

Q2(e)



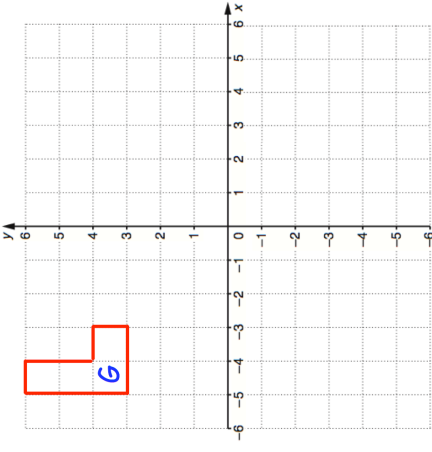
rotate  $90^\circ$  anticlockwise about  $(0, 0)$

Q2(f)



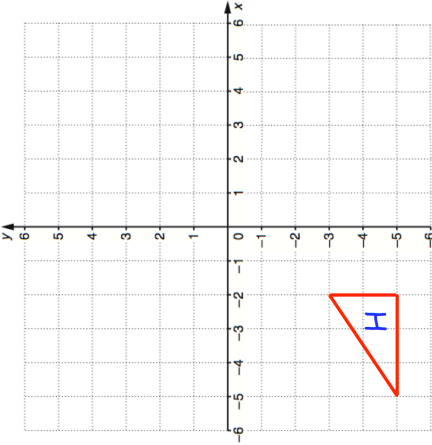
rotate  $180^\circ$  about  $(0, 0)$

Q2(g)



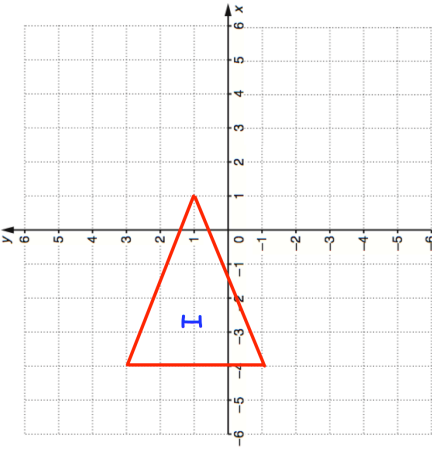
rotate  $90^\circ$  anticlockwise about  $(0, 0)$

Q2(h)



rotate  $180^\circ$  about  $(0, 0)$

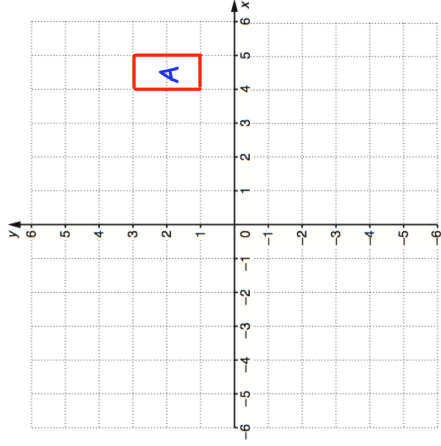
Q2(i)



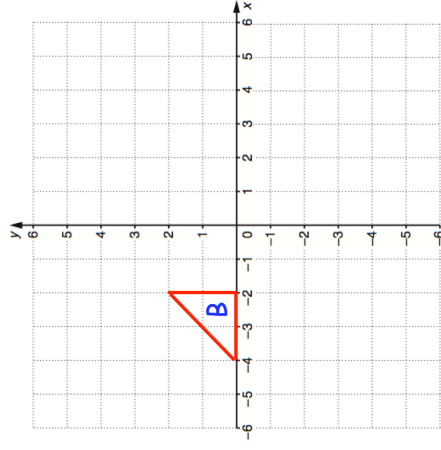
rotate  $90^\circ$  clockwise about  $(0, 0)$

# Templates

Q3(a)



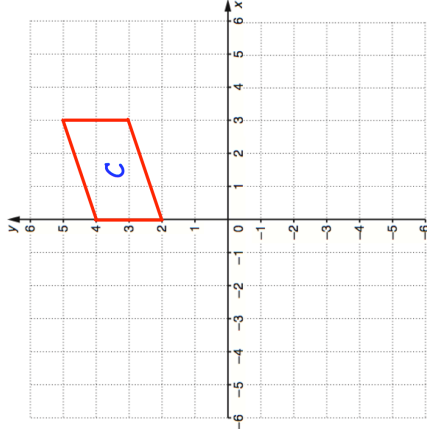
Q3(b)



rotate  $90^\circ$  anticlockwise about  $(0, 1)$

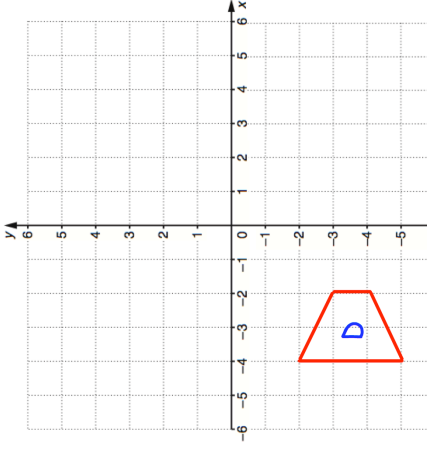
rotate  $90^\circ$  clockwise about  $(-1, -2)$

Q3(c)



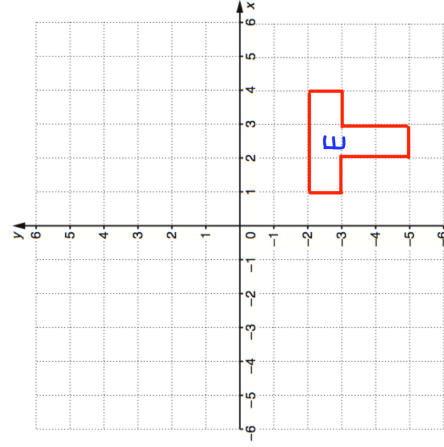
rotate  $180^\circ$  about  $(1, 1)$

Q3(d)



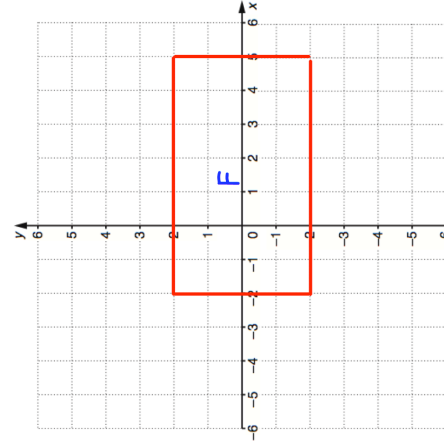
rotate  $90^\circ$  anticlockwise about  $(-4, 0)$

Q3(e)



rotate  $180^\circ$  about  $(-1, 0)$

Q3(f)

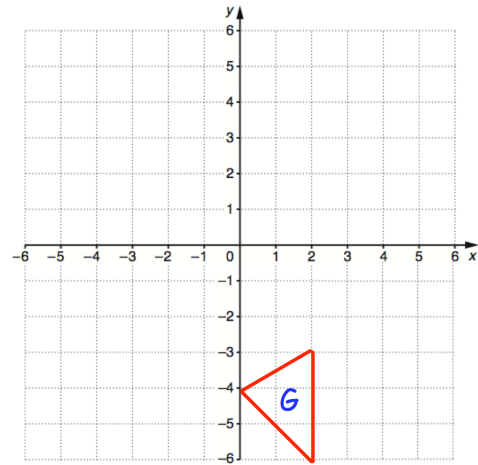


rotate  $90^\circ$  clockwise about  $(-1, 2)$



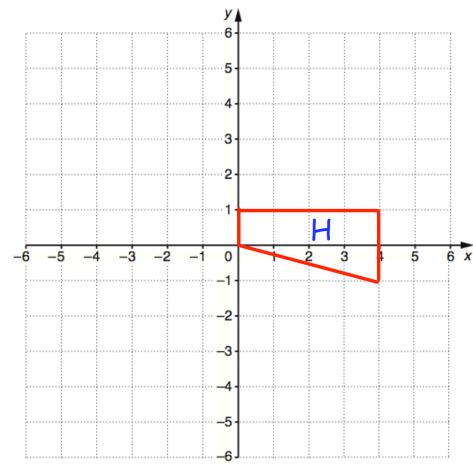
# Templates

Q3(g)



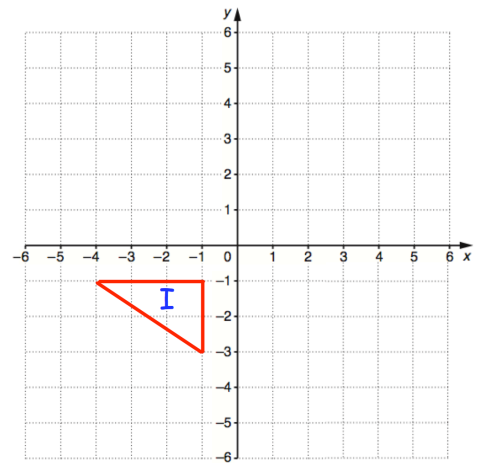
rotate  $90^\circ$  clockwise about  $(5, 0)$

Q3(h)



rotate  $90^\circ$  anticlockwise about  $(3, 0)$

Q3(i)

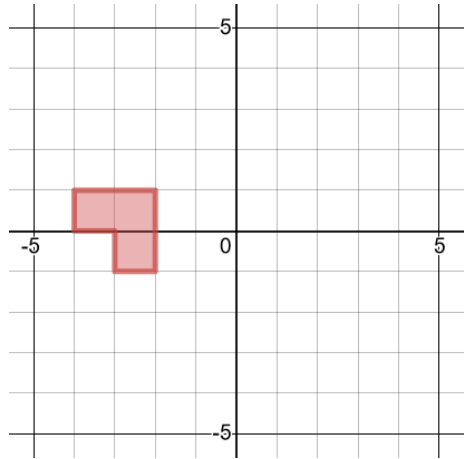


rotate  $180^\circ$  about  $(1, 1)$

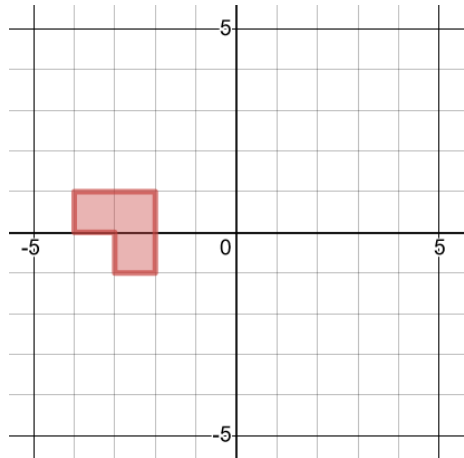
## Translations

## Worked Example

Translate by vector  $\begin{pmatrix} 3 \\ 2 \end{pmatrix}$

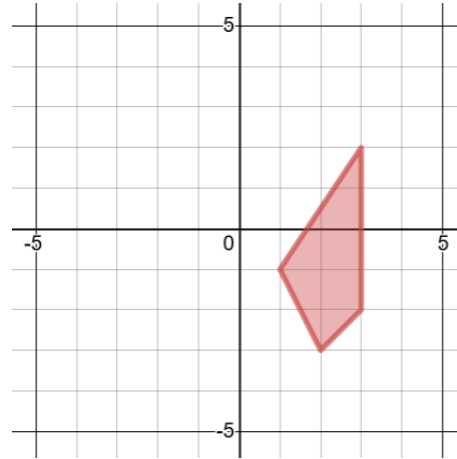


Translate by vector  $\begin{pmatrix} 2 \\ -3 \end{pmatrix}$

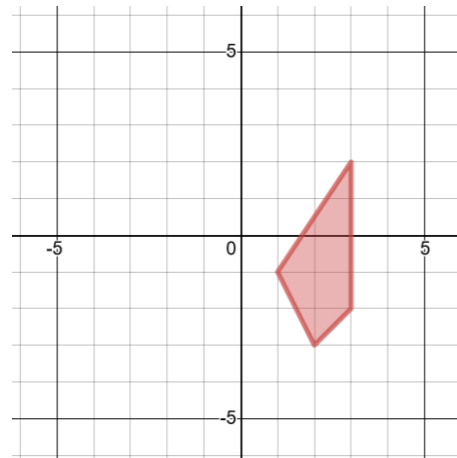


## Your Turn

Translate by vector  $\begin{pmatrix} 2 \\ 3 \end{pmatrix}$

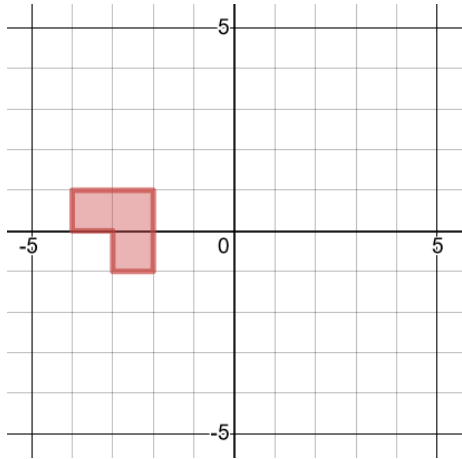


Translate by vector  $\begin{pmatrix} 3 \\ -2 \end{pmatrix}$

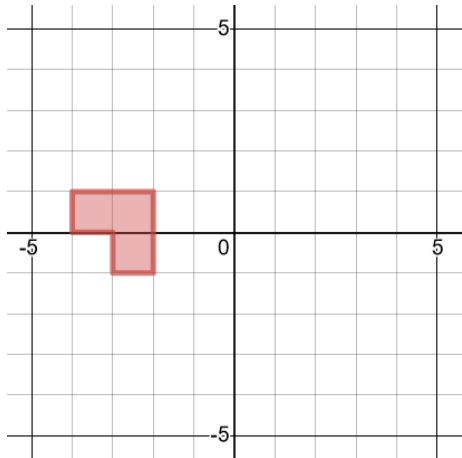


## Worked Example

Translate by vector  $\begin{pmatrix} -2 \\ -3 \end{pmatrix}$

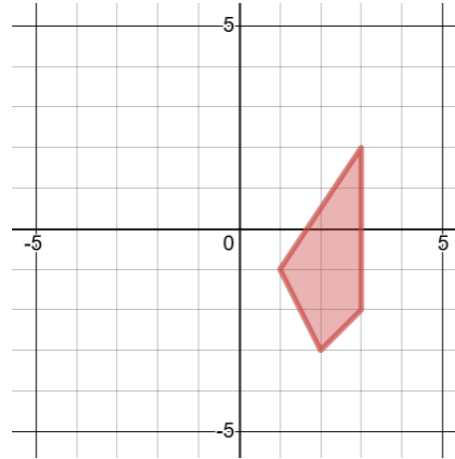


Translate by vector  $\begin{pmatrix} 3 \\ -2 \end{pmatrix}$  and then by vector  $\begin{pmatrix} -4 \\ 5 \end{pmatrix}$

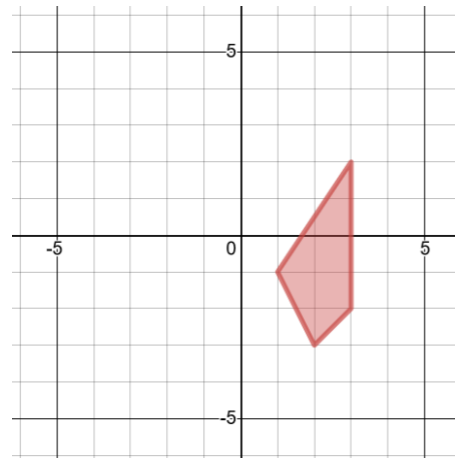


## Your Turn

Translate by vector  $\begin{pmatrix} -3 \\ -2 \end{pmatrix}$

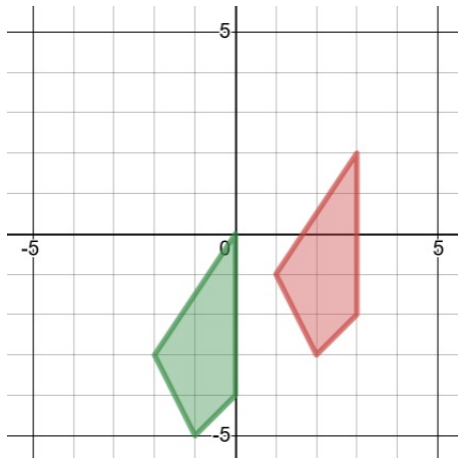
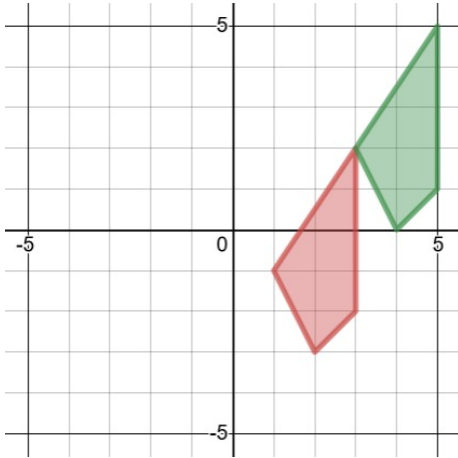


Translate by vector  $\begin{pmatrix} 2 \\ -3 \end{pmatrix}$  and then by vector  $\begin{pmatrix} -5 \\ 4 \end{pmatrix}$



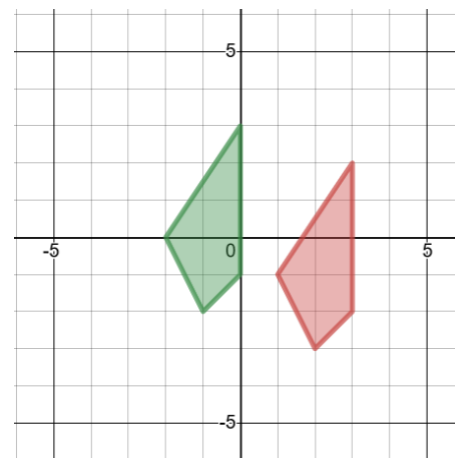
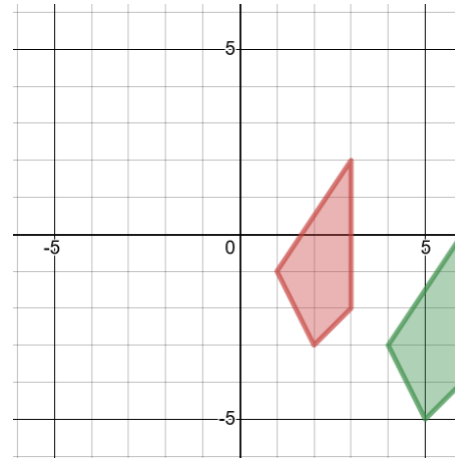
## Worked Example

Describe the single transformation of the red object onto the green image.



## Your Turn

Describe the single transformation of the red object onto the green image.



### Worked Example

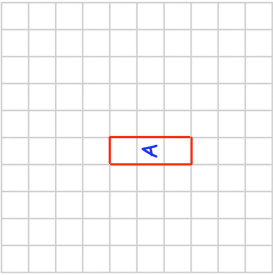
A point  $(11, -13)$  is translated by the vector  $(0, -5)$ . What is the image of the point after the transformation?

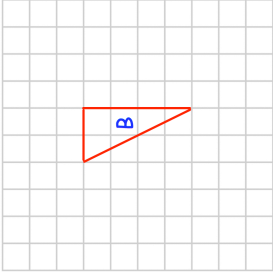
### Your Turn

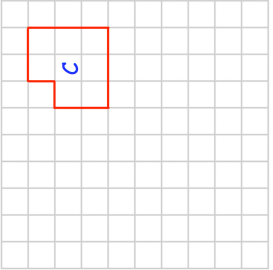
A point  $(-2, 5)$  is translated by the vector  $(7, -3)$ . What is the image of the point after the transformation?

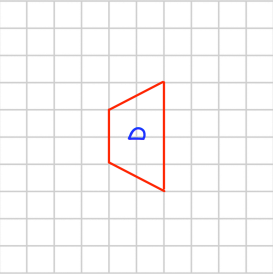
# Fluency Practice

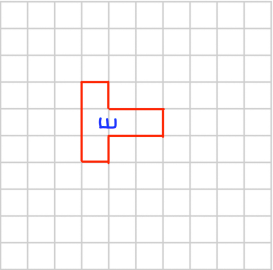
Question 1: Translate each of the shapes below as instructed.

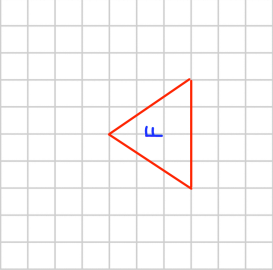
(a)  Translate A by  $\begin{pmatrix} 3 \\ 1 \end{pmatrix}$

(b)  Translate B by  $\begin{pmatrix} 2 \\ -2 \end{pmatrix}$


(c)  Translate C by  $\begin{pmatrix} 0 \\ -5 \end{pmatrix}$


(d)  Translate D by  $\begin{pmatrix} -3 \\ 3 \end{pmatrix}$


(e)  Translate E by  $\begin{pmatrix} -2 \\ -4 \end{pmatrix}$

(f)  Translate F by  $\begin{pmatrix} 1.5 \\ 0 \end{pmatrix}$

Question 2: Describe fully each translation that takes shape A to shape B

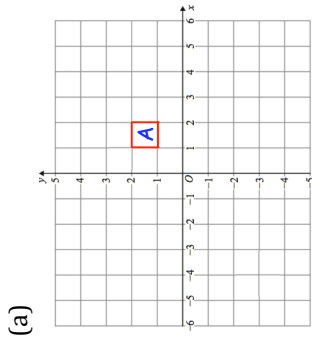
(a)  Translate A to shape B:  $\begin{pmatrix} 3 \\ -3 \end{pmatrix}$

(b)  Translate A to shape B:  $\begin{pmatrix} -4 \\ -2 \end{pmatrix}$

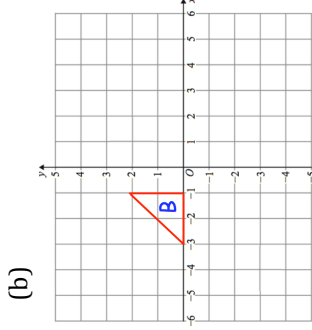
(c)  Translate B to shape A:  $\begin{pmatrix} 1.5 \\ 0 \end{pmatrix}$

# Fluency Practice

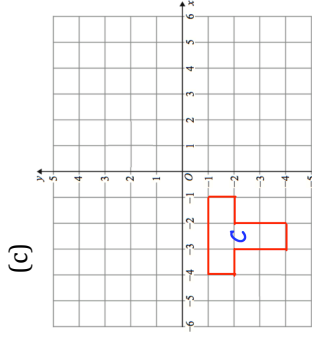
Question 3: Translate each of the shapes below as instructed.



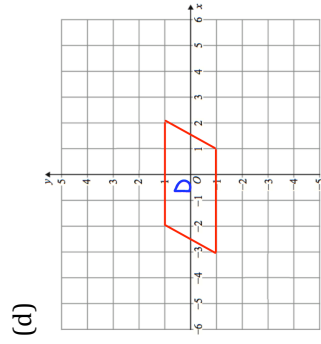
Translate A by  $\begin{pmatrix} 2 \\ -3 \end{pmatrix}$



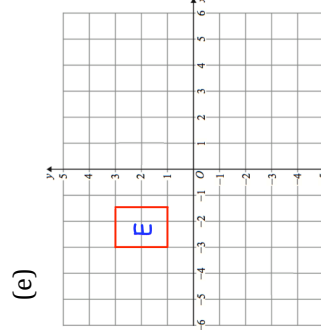
Translate B by  $\begin{pmatrix} 6 \\ 1 \end{pmatrix}$



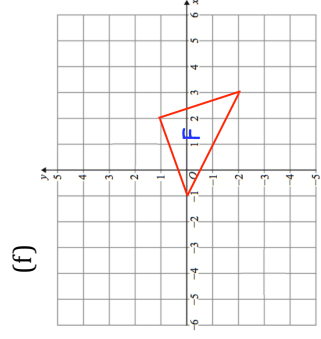
Translate C by  $\begin{pmatrix} -1 \\ 5 \end{pmatrix}$



Translate D by  $\begin{pmatrix} -3 \\ -2 \end{pmatrix}$

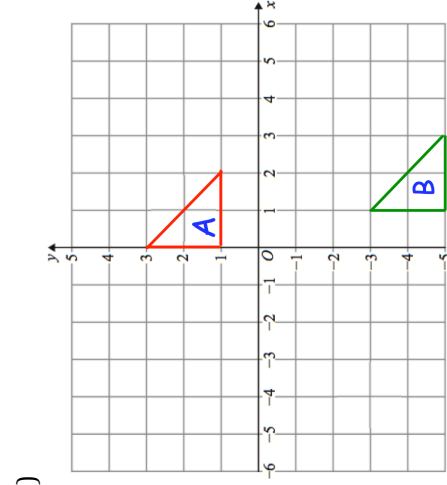
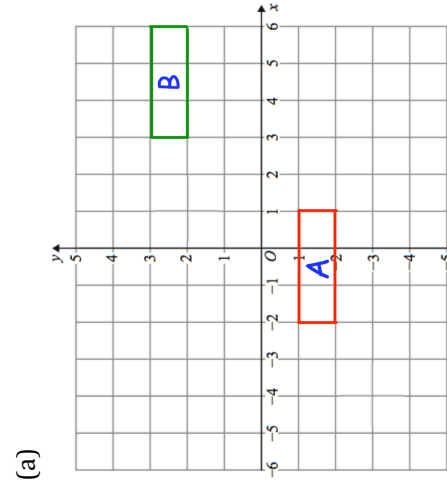


Translate E by  $\begin{pmatrix} 4.5 \\ -4 \end{pmatrix}$



Translate F by  $\begin{pmatrix} -1 \\ 1 \end{pmatrix}$

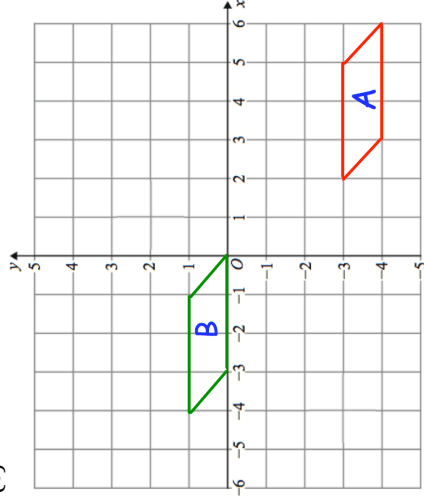
Question 4: Describe fully the single transformation that takes shape A to shape B



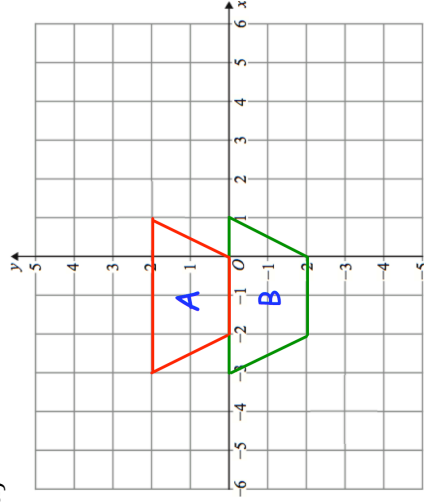


# Fluency Practice

(c)



(d)

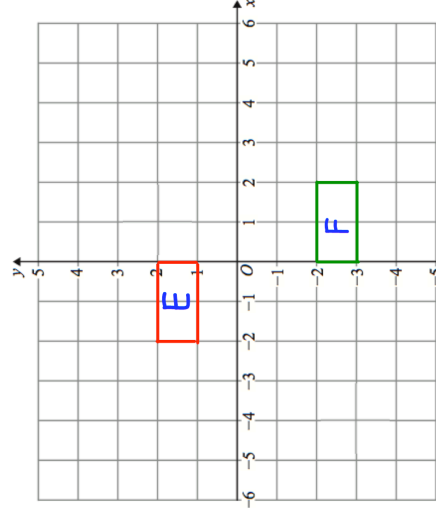


Question 5: The translation vector to take shape C to shape D is  $\begin{pmatrix} 2 \\ -5 \end{pmatrix}$

What translation vector takes shape D to shape C?

Question 6: Edward has been asked to translate shape E by  $\begin{pmatrix} -4 \\ 2 \end{pmatrix}$

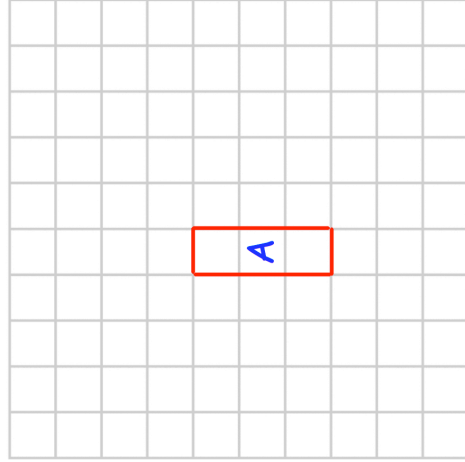
He has labelled his answer shape F  
Can you spot any mistakes?



# Templates

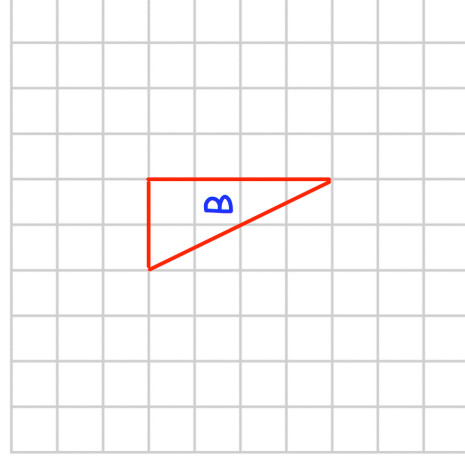
## Question 1

(a)



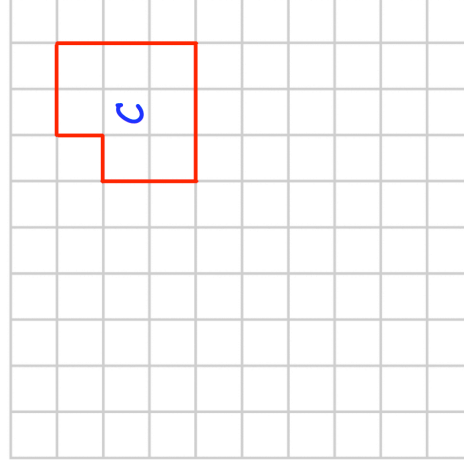
Translate A by  $\begin{pmatrix} 3 \\ 1 \end{pmatrix}$

(b)



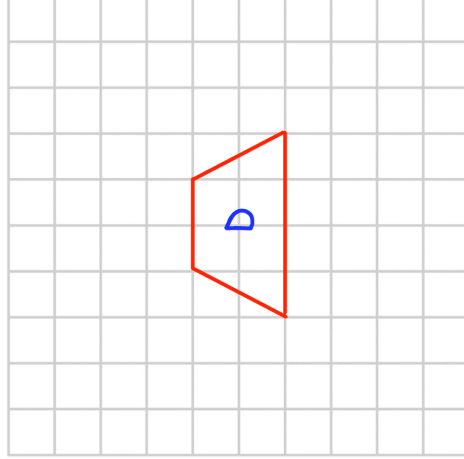
Translate B by  $\begin{pmatrix} 2 \\ -2 \end{pmatrix}$

(c)



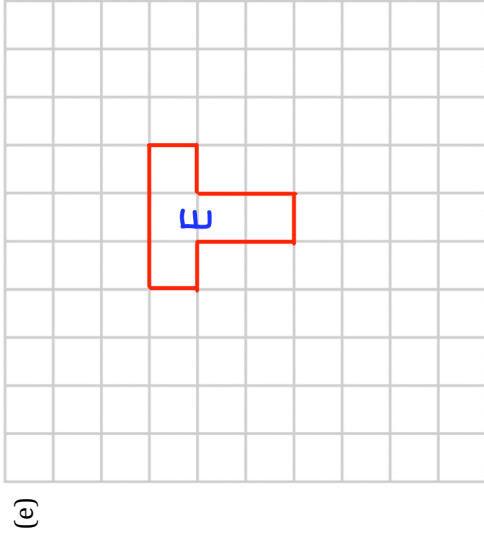
Translate C by  $\begin{pmatrix} 0 \\ -5 \end{pmatrix}$

(d)

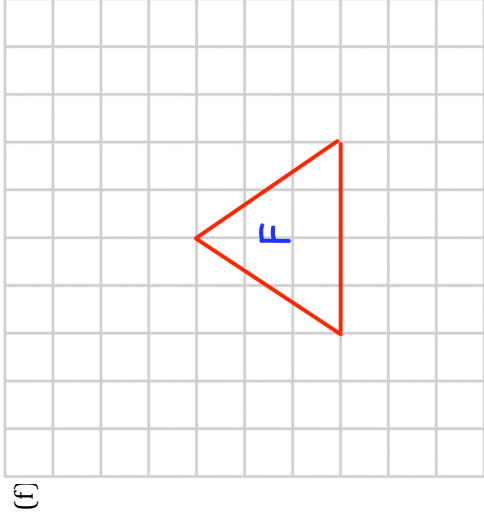


Translate D by  $\begin{pmatrix} -3 \\ 3 \end{pmatrix}$

# Templates

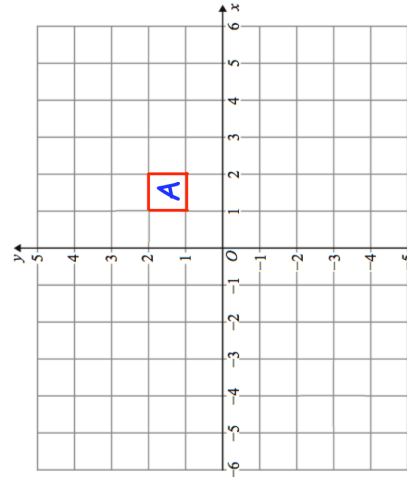


Translate E by  $\begin{pmatrix} -2 \\ -4 \end{pmatrix}$



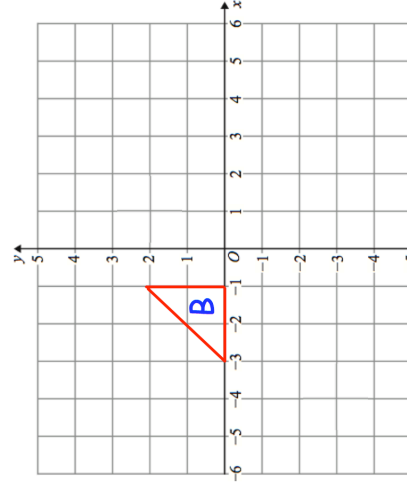
Translate F by  $\begin{pmatrix} 1.5 \\ 0 \end{pmatrix}$

Question 3  
(a)



Translate A by  $\begin{pmatrix} 2 \\ -3 \end{pmatrix}$

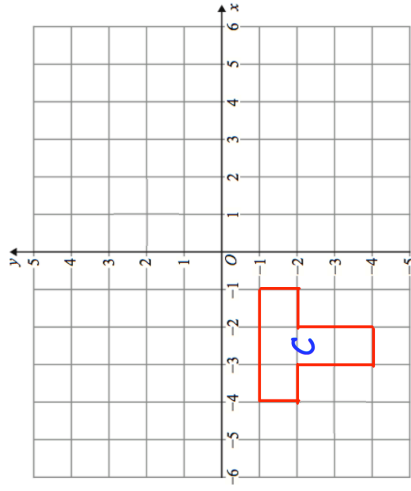
(b)



Translate B by  $\begin{pmatrix} 6 \\ 1 \end{pmatrix}$

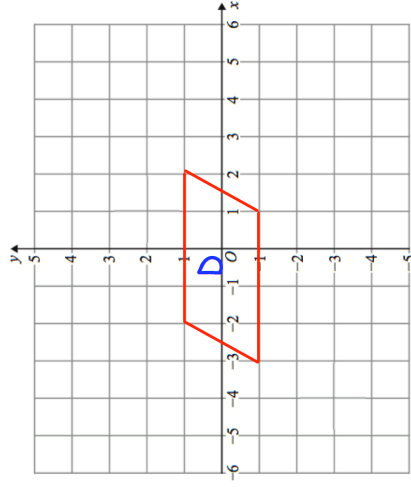
# Templates

(c)



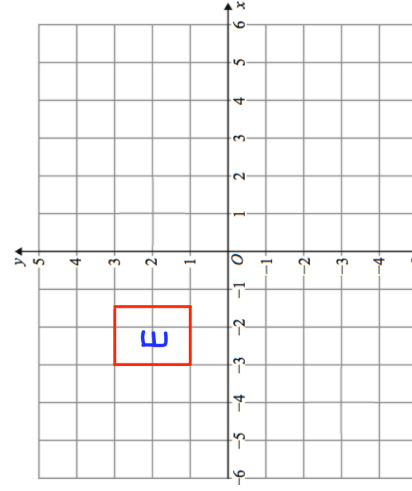
Translate C by  $\begin{pmatrix} -1 \\ 5 \end{pmatrix}$

(d)



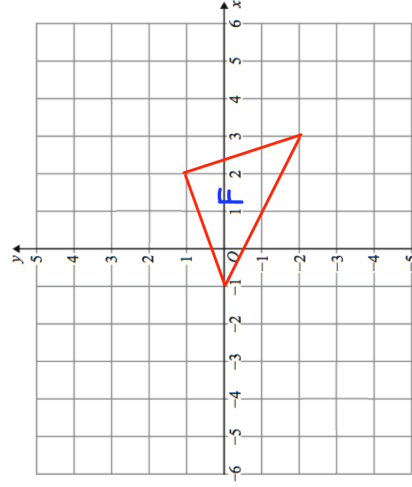
Translate D by  $\begin{pmatrix} -3 \\ -2 \end{pmatrix}$

(e)



Translate E by  $\begin{pmatrix} 4.5 \\ -4 \end{pmatrix}$

(f)

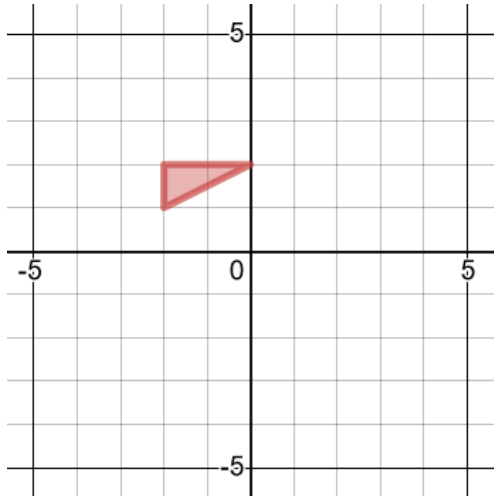


Translate F by  $\begin{pmatrix} -1 \\ 1 \end{pmatrix}$

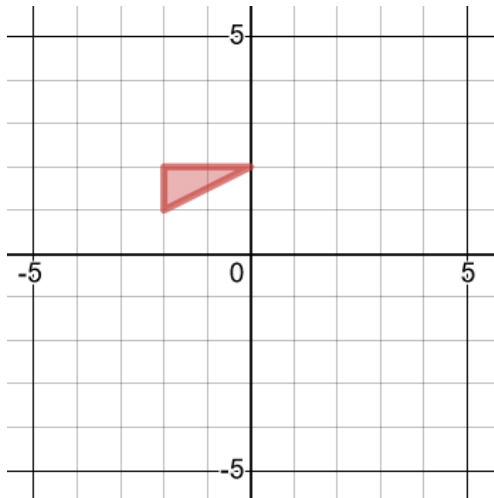
## Enlargements

## Worked Example

Enlarge about  $(-4, 3)$ , scale factor 2

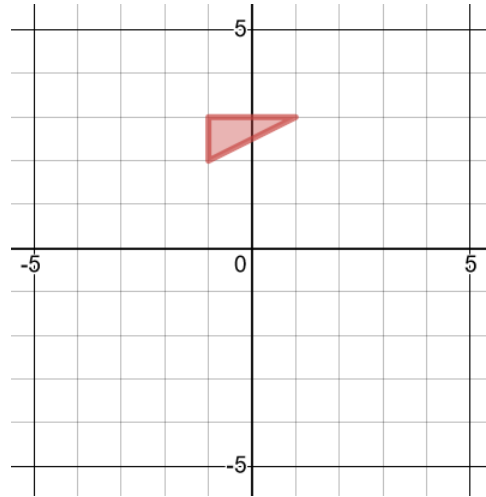


Enlarge about  $(-2, 4)$ , scale factor 3

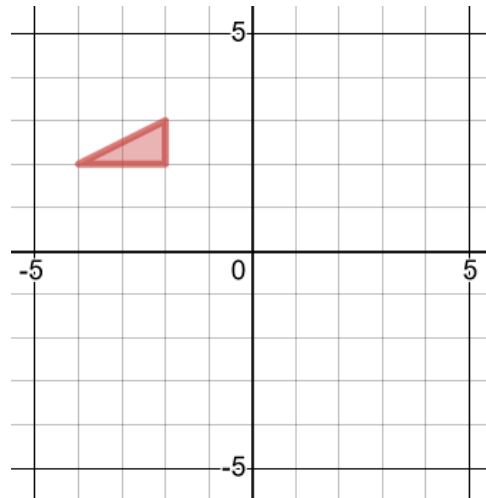


## Your Turn

Enlarge about  $(-3, 3)$ , scale factor 2

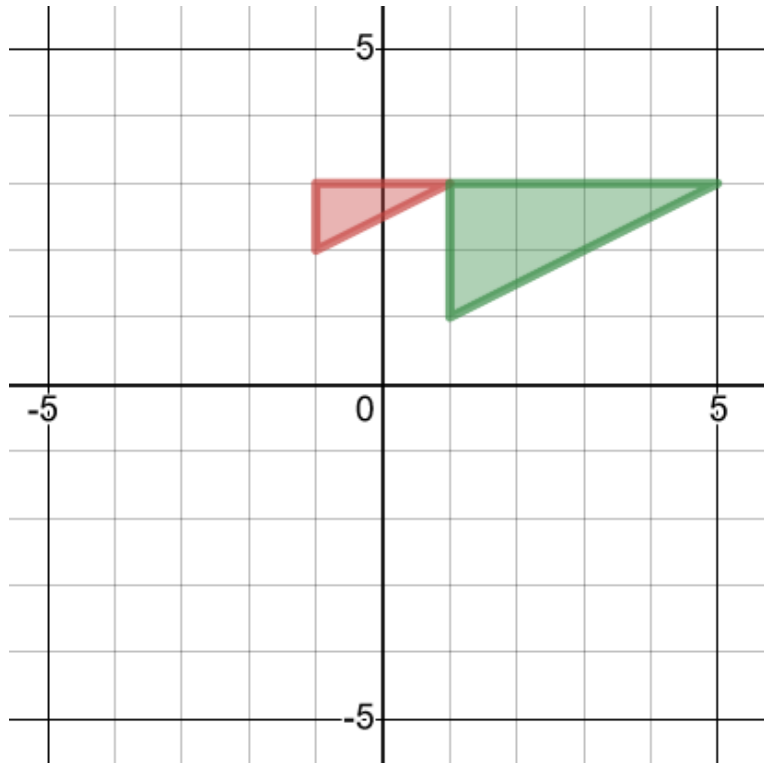


Enlarge about  $(-4, 4)$ , scale factor 3



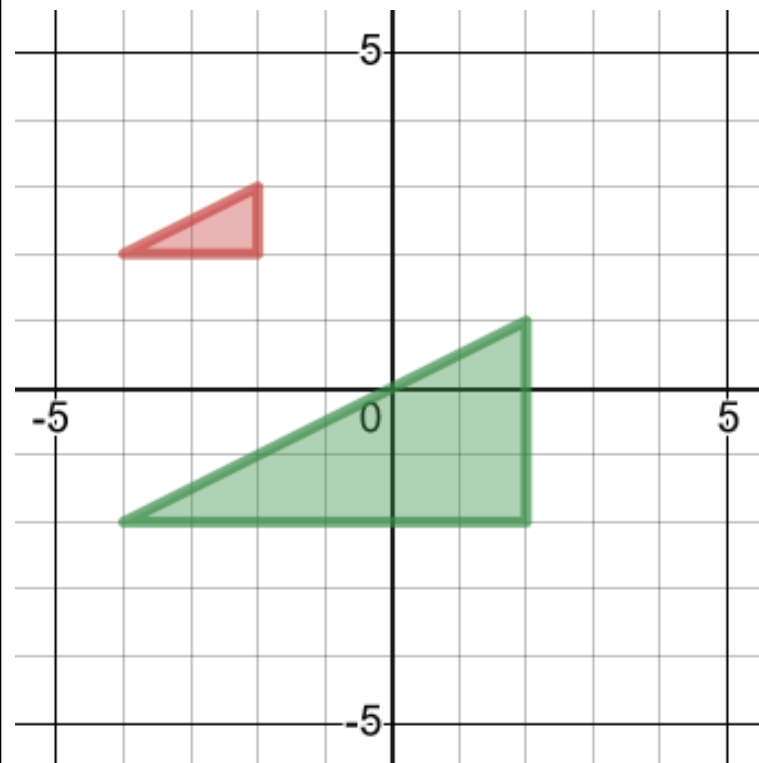
## Worked Example

Describe the single transformation of the red object onto the green image



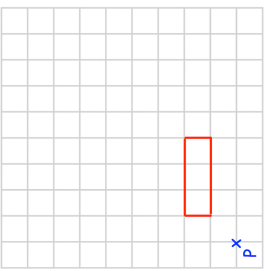
## Your Turn

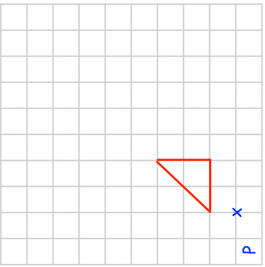
Describe the single transformation of the red object onto the green image

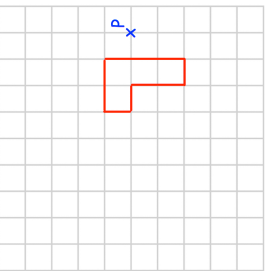


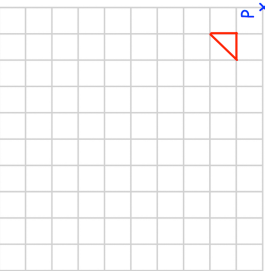
# Fluency Practice

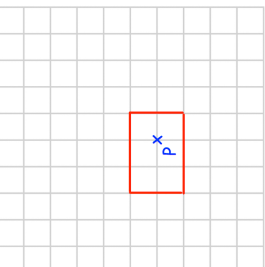
Question 1: Enlarge each shape by the scale factor given  
Use P as the centre of enlargement.

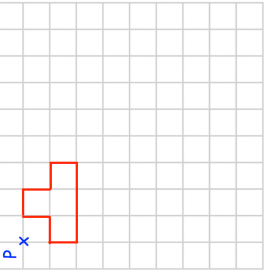
(a)  Enlarge by scale factor 2

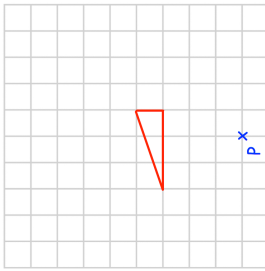
(b)  Enlarge by scale factor 3

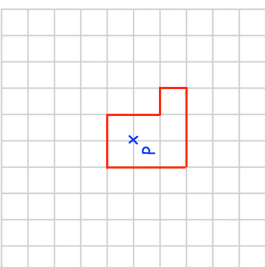
(c)  Enlarge by scale factor 2

(d)  Enlarge by scale factor 4

(e)  Enlarge by scale factor 2

(f)  Enlarge by scale factor 3

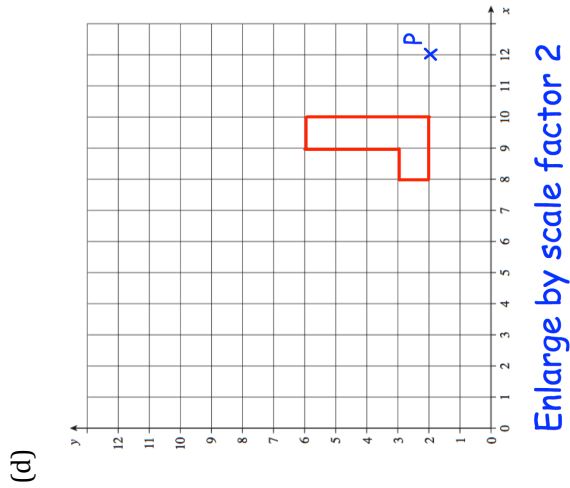
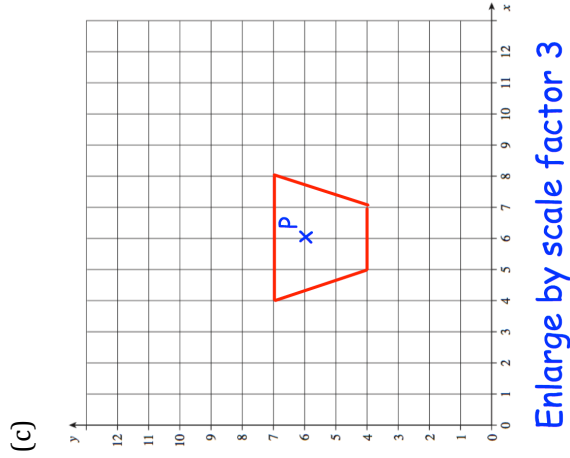
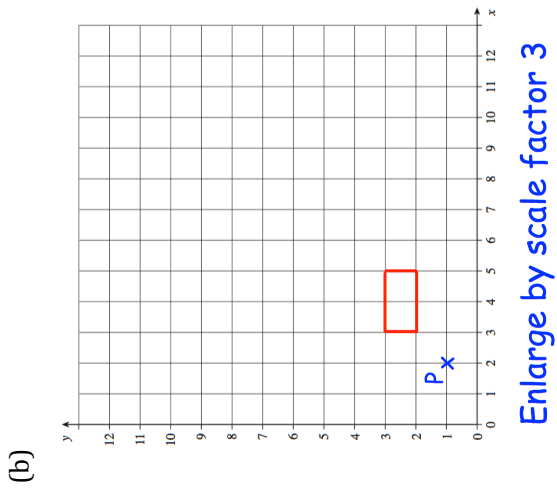
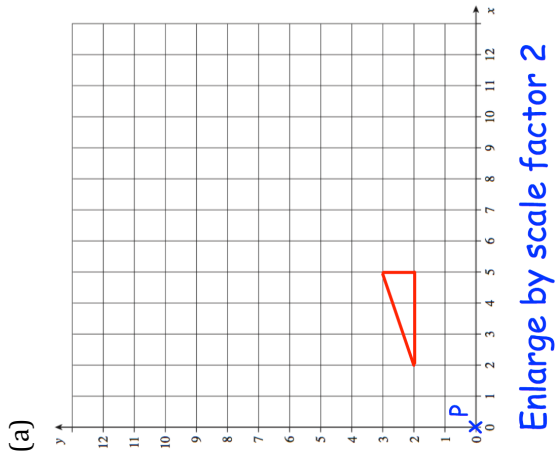
(g)  Enlarge by scale factor 2

(h)  Enlarge by scale factor 2



# Fluency Practice

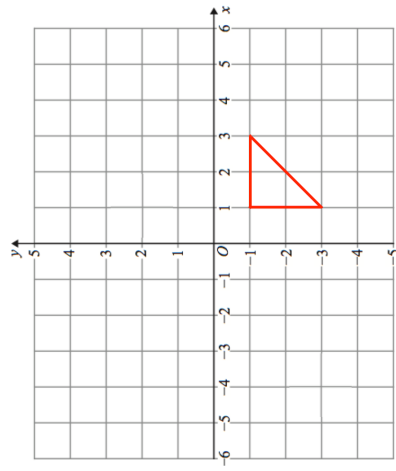
Question 2: Enlarge each shape by the scale factor given  
Use P as the centre of enlargement.



# Fluency Practice

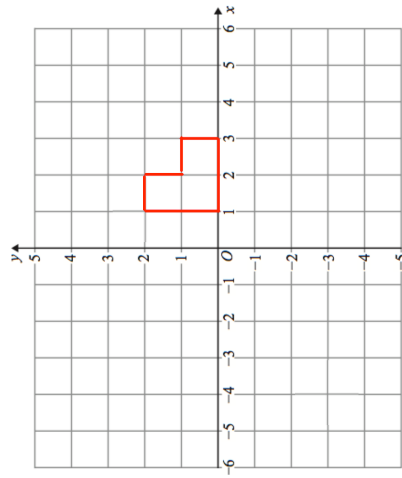
Question 3: Enlarge each shape by the scale factor given  
The coordinates for each centre of enlargement are given.

(a)



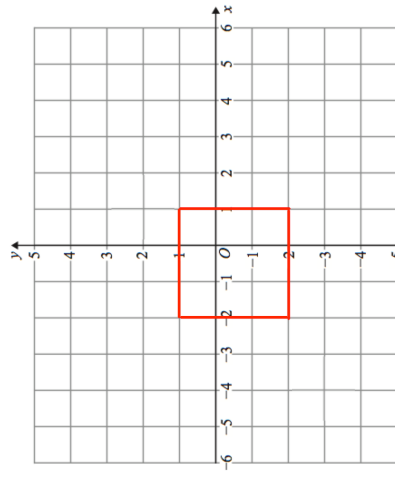
Enlarge by scale factor 2 using  
(4, -3) as the centre of enlargement

(b)



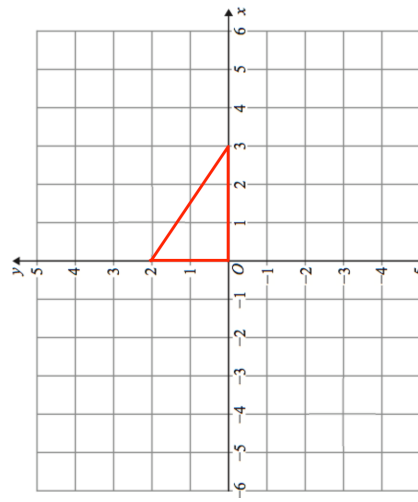
Enlarge by scale factor 3 using  
(3, 2) as the centre of enlargement

(c)



Enlarge by scale factor 2 using  
(0, -1) as the centre of enlargement

(d)

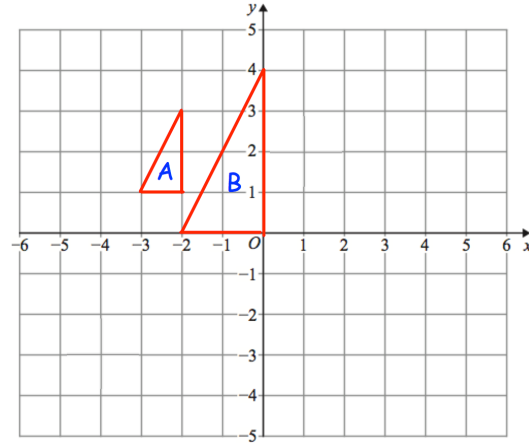


Enlarge by scale factor 2 using  
the origin as the centre of enlargement

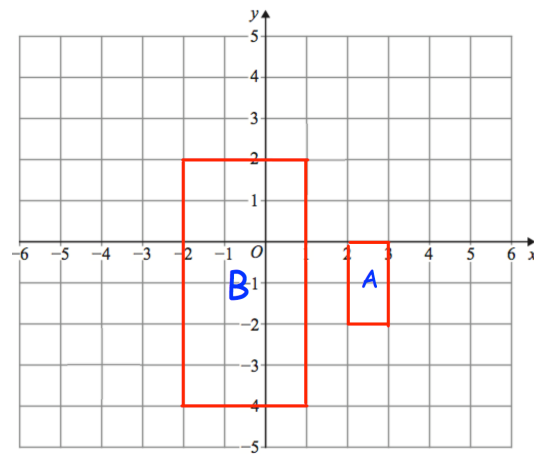
# Fluency Practice

Question 4: Describe fully the single transformation that takes shape A to shape B.

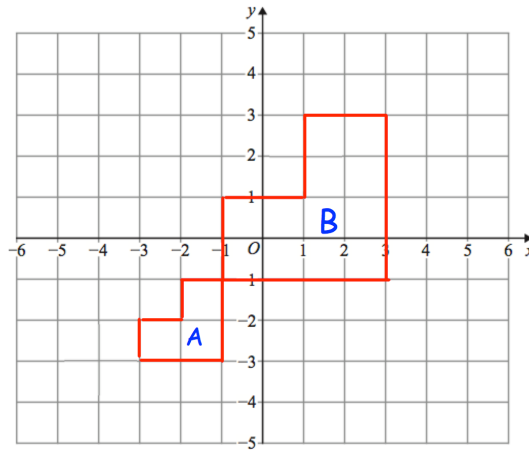
(a)



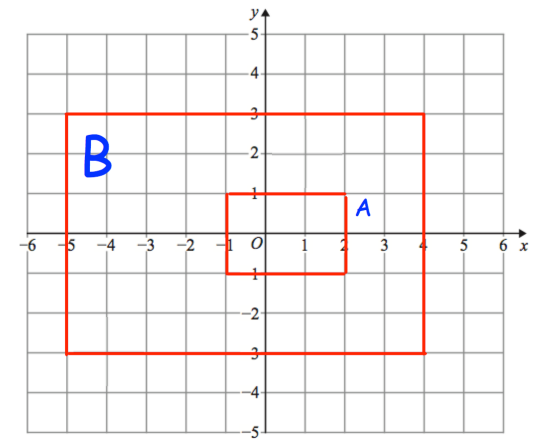
(b)



(c)



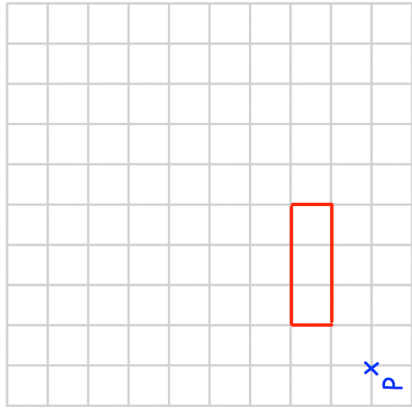
(d)



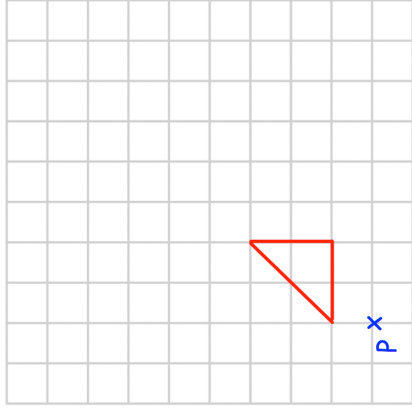
# Templates

Question 1:

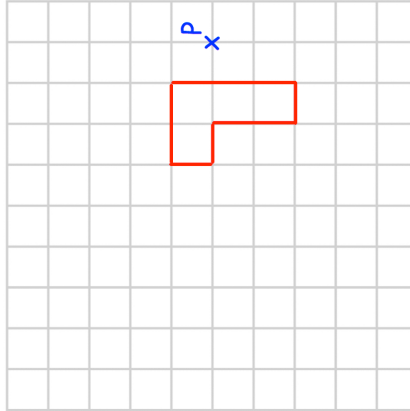
(a)



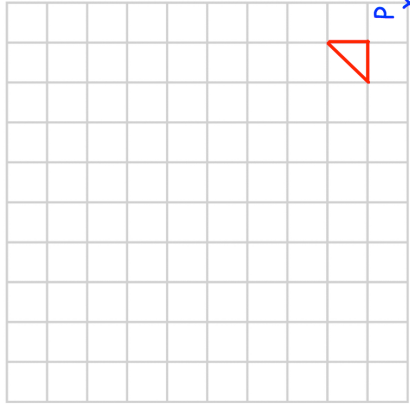
(b)



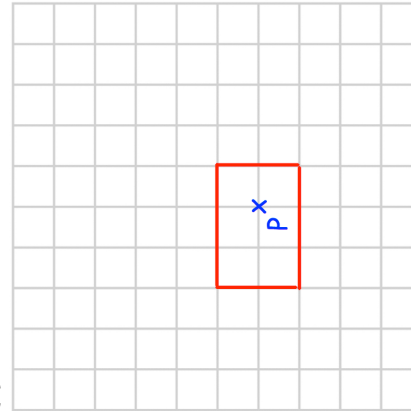
(c)



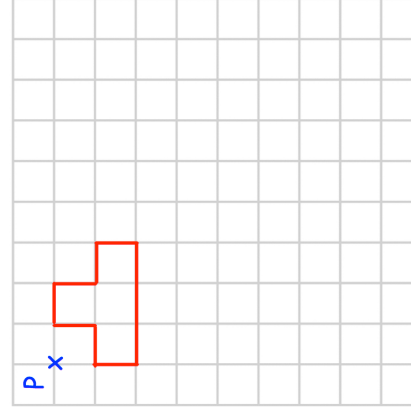
(d)



(e)

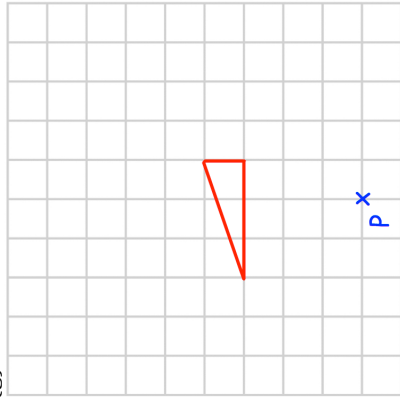


(f)

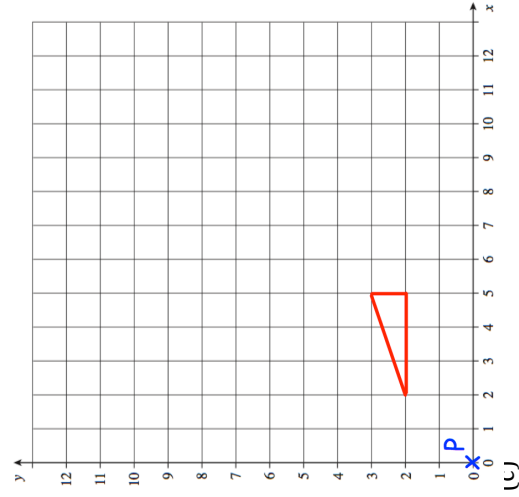


# Templates

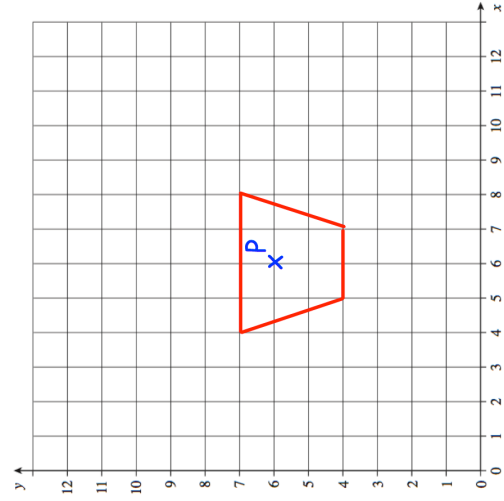
(g)



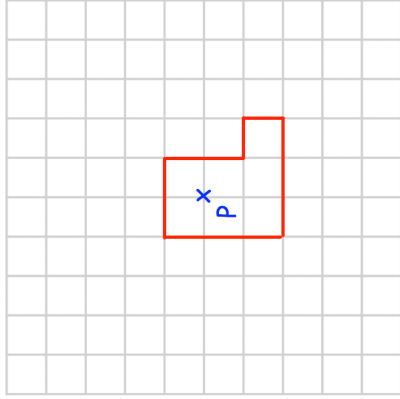
Question 2: (a)



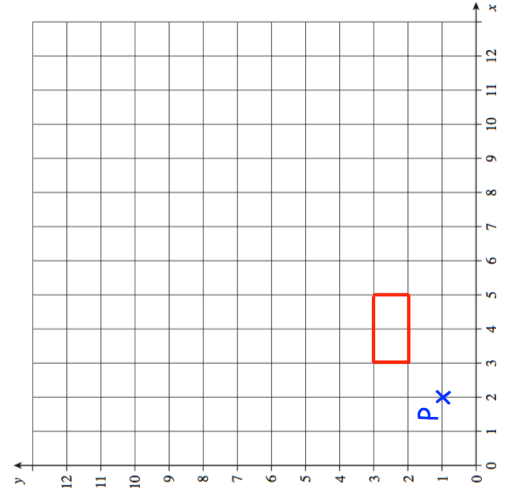
(c)



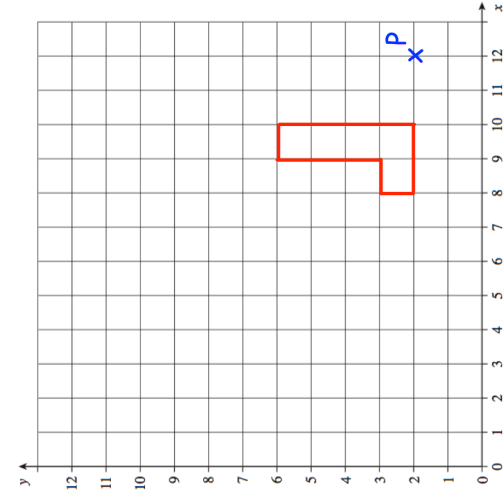
(h)



(b)

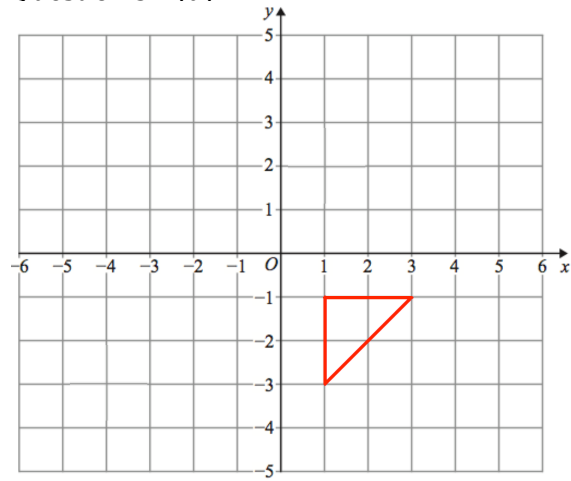


(d)

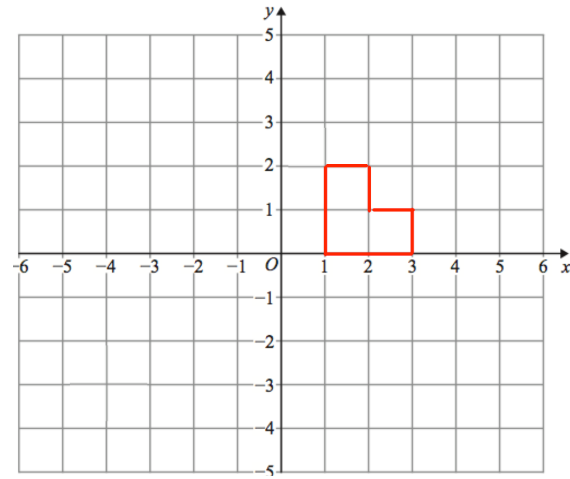


# Templates

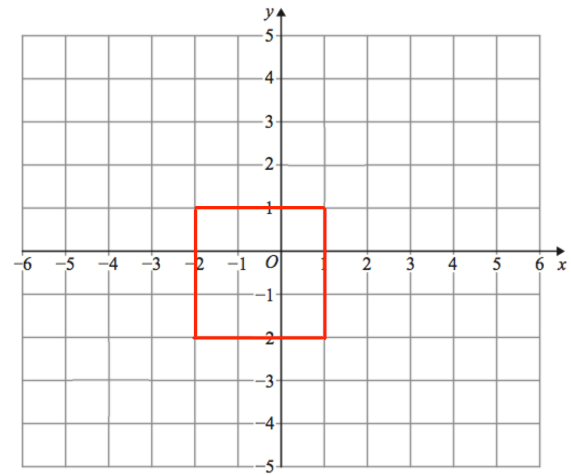
Question 3: (a)



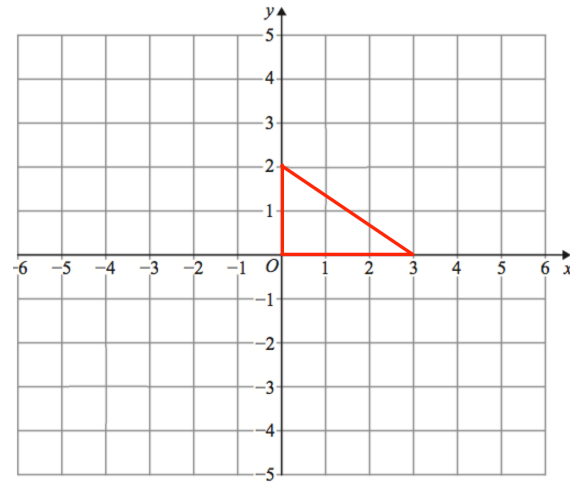
(b)



(c)

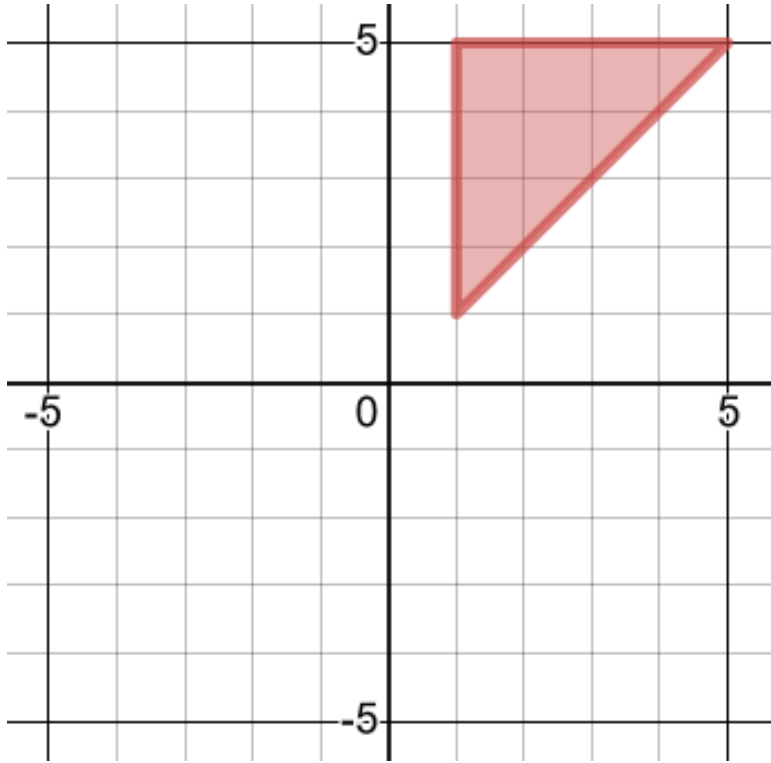


(d)



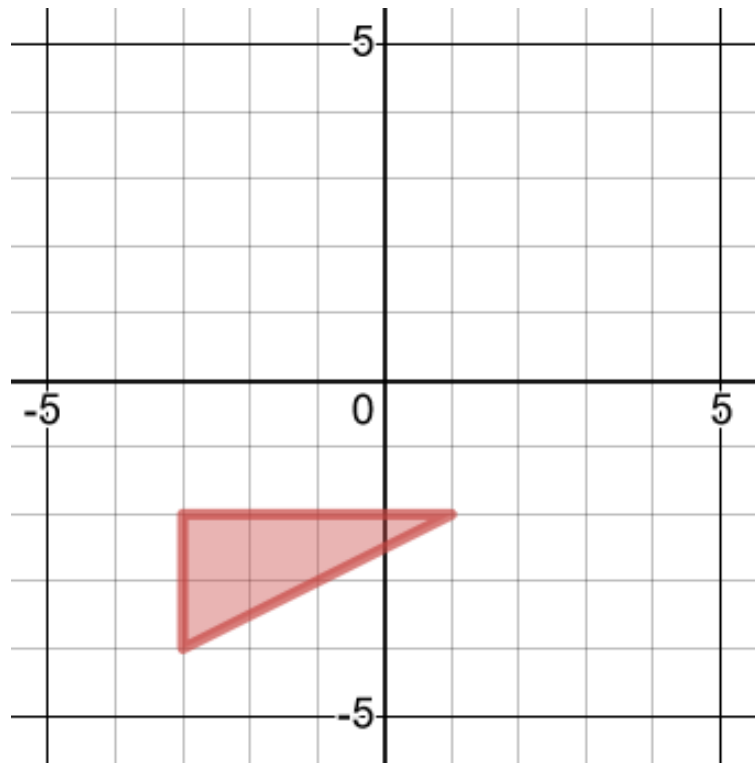
## Worked Example

Enlarge about  $(-3, -3)$ , scale factor  $\frac{1}{2}$



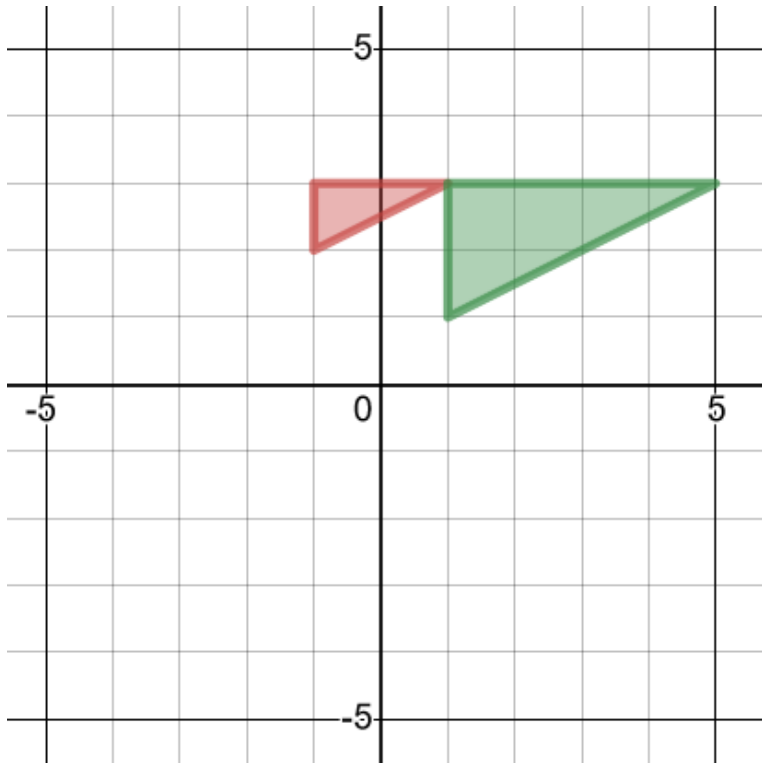
## Your Turn

Enlarge about  $(-1, 0)$ , scale factor  $\frac{1}{2}$



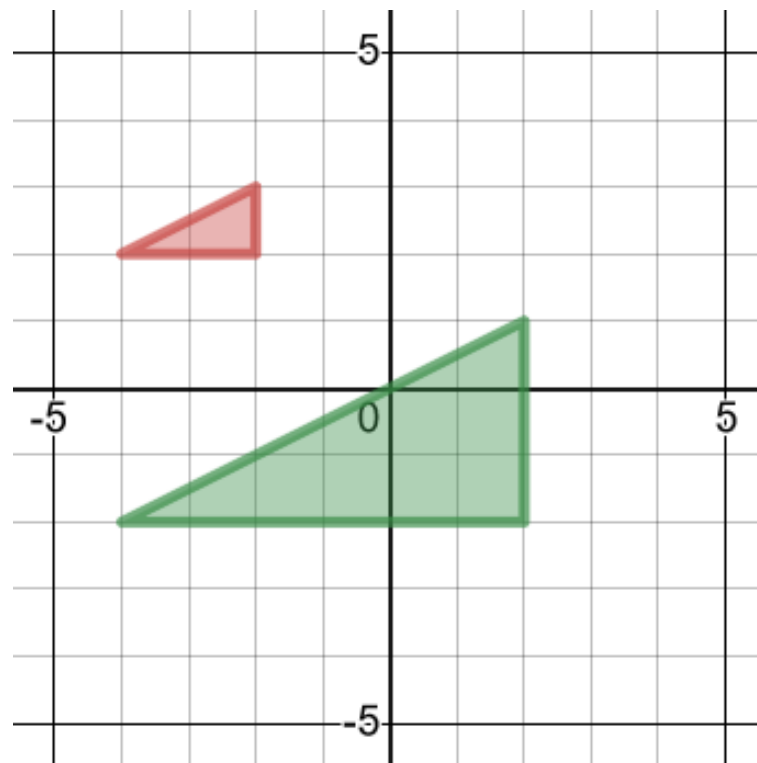
## Worked Example

Describe the single transformation of the green object onto the red image



## Your Turn

Describe the single transformation of the green object onto the red image






# Fluency Practice

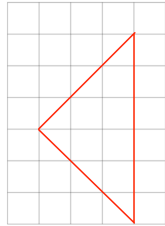
Question 1: Copy these shapes and then enlarge by the scale factor given.

(a)



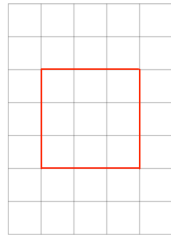
Enlarge by scale factor  $\frac{1}{2}$

(b)



Enlarge by scale factor  $\frac{1}{3}$

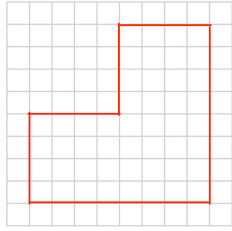
(c)



Enlarge by scale factor  $\frac{2}{3}$

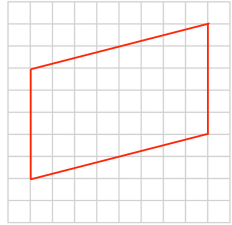
Question 2: Copy these shapes and then enlarge by the scale factor given.

(a)



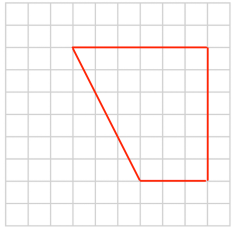
Enlarge by scale factor  $\frac{1}{4}$

(b)



Enlarge by scale factor  $\frac{1}{2}$

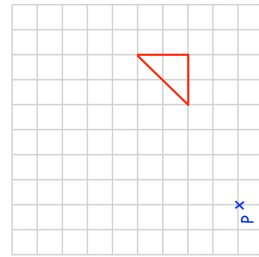
(c)



Enlarge by scale factor  $1\frac{1}{3}$

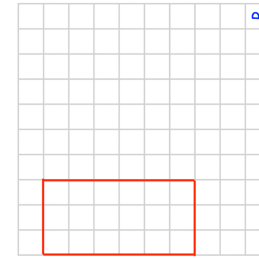
Question 3: Enlarge each shape by the scale factor given  
Use P as the centre of enlargement.

(a)



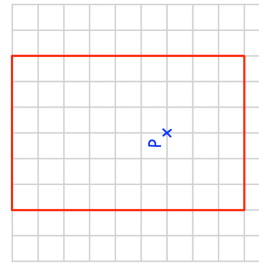
Enlarge by scale factor  $\frac{1}{2}$

(b)



Enlarge by scale factor  $\frac{1}{3}$

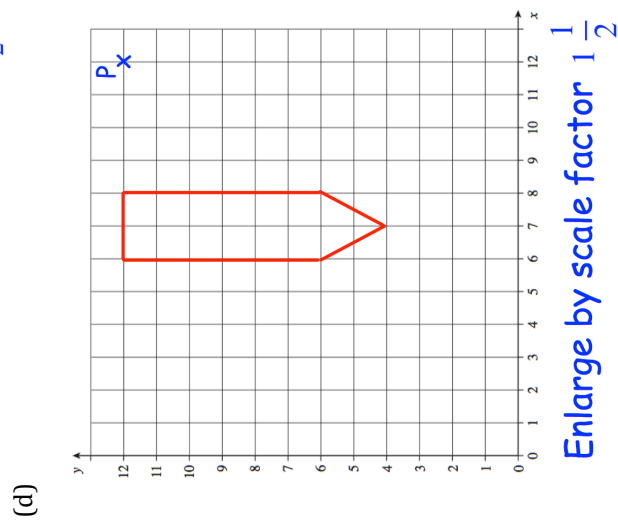
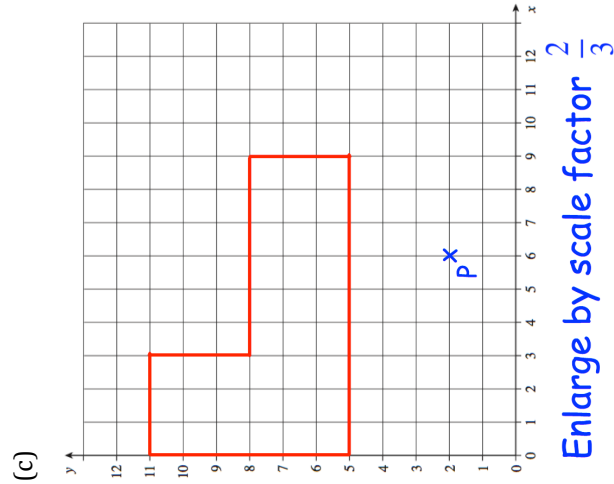
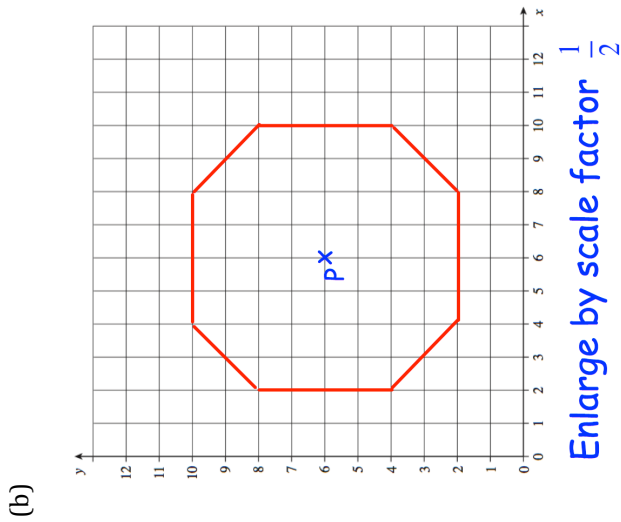
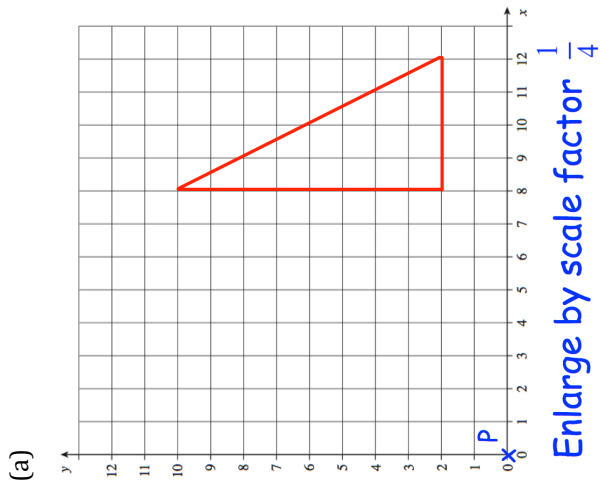
(c)



Enlarge by scale factor  $\frac{2}{3}$

# Fluency Practice

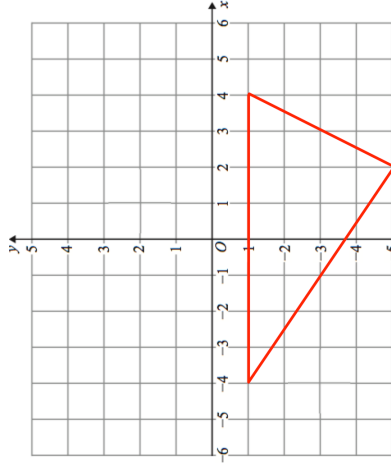
Question 4: Enlarge each shape by the scale factor given  
Use P as the centre of enlargement.



# Fluency Practice

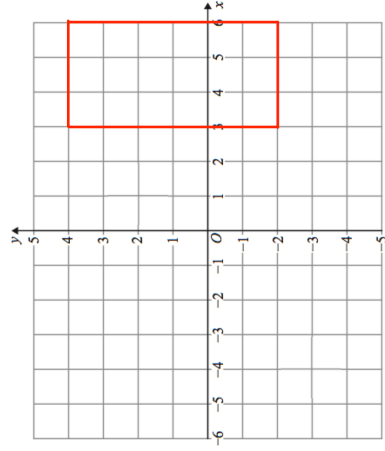
Question 5: Enlarge each shape by the scale factor given  
The coordinates for each centre of enlargement are given.

(a)



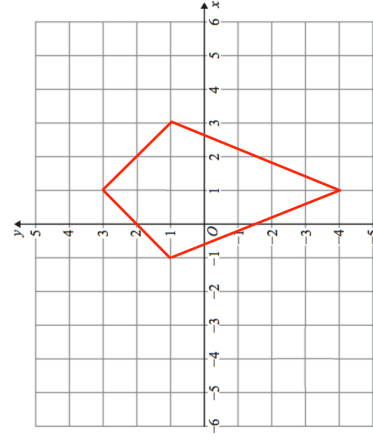
Enlarge by scale factor  $\frac{1}{2}$  using  
(0, 1) as the centre of enlargement

(b)



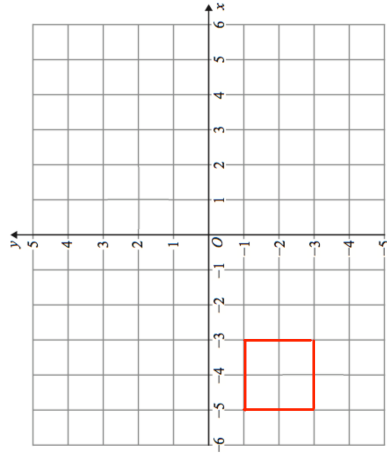
Enlarge by scale factor  $\frac{1}{3}$  using  
(-3, 1) as the centre of enlargement

(c)



Enlarge by scale factor  $\frac{1}{2}$  using  
(-5, -5) as the centre of enlargement

(d)

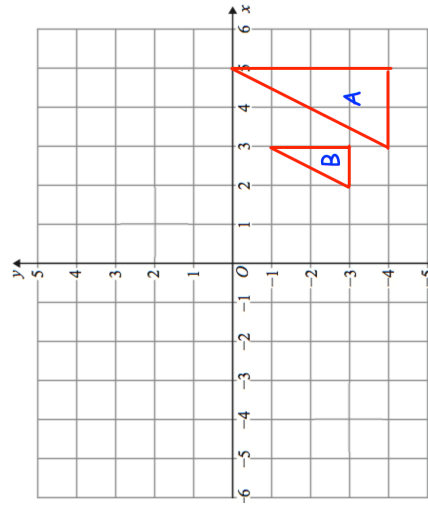


Enlarge by scale factor  $2\frac{1}{2}$  using  
(-5, -3) as the centre of enlargement

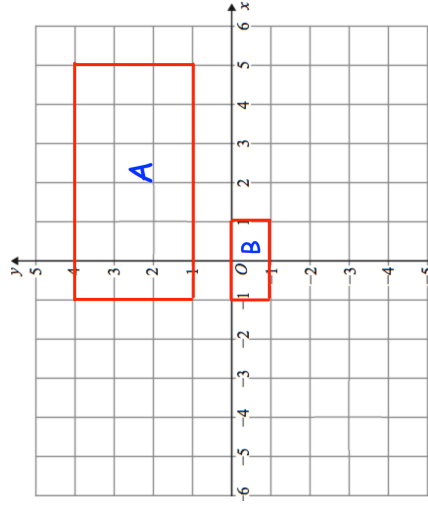
# Fluency Practice

Question 6: Describe fully the single transformation that takes shape A to shape B.

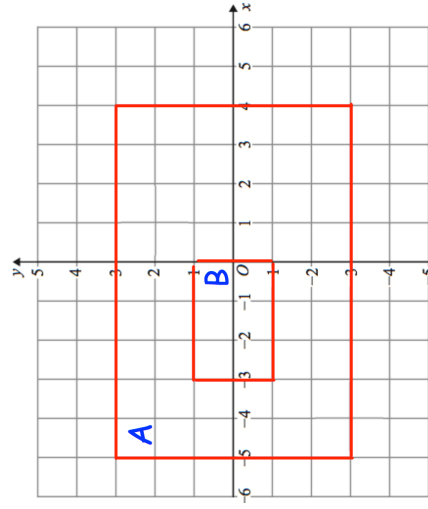
(a)



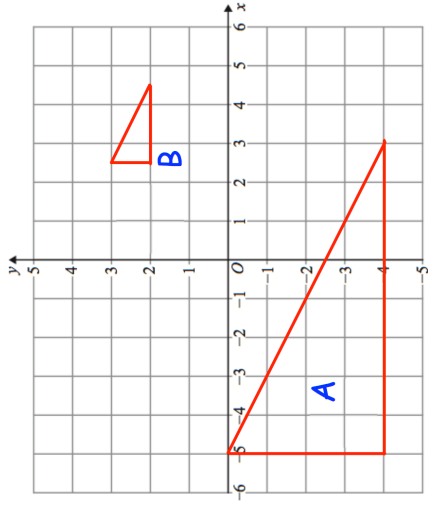
(b)



(c)

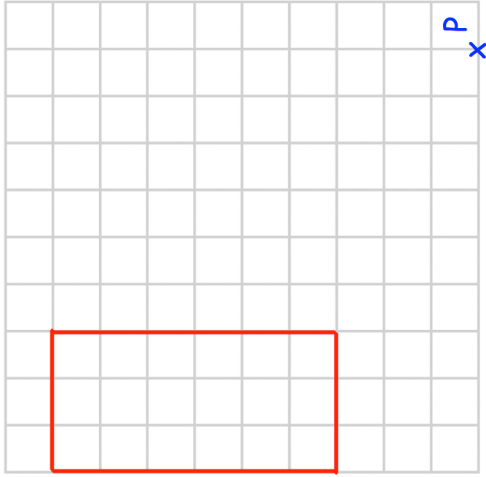


(d)

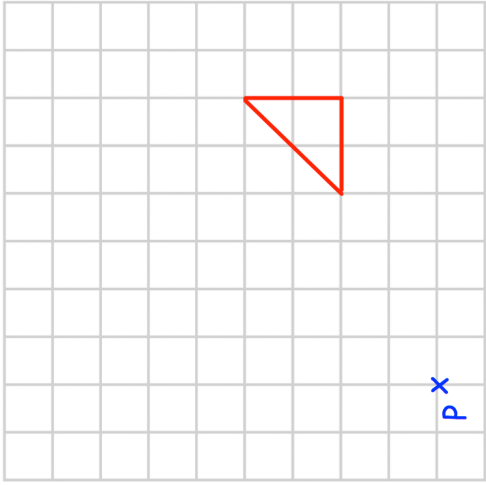


# Templates

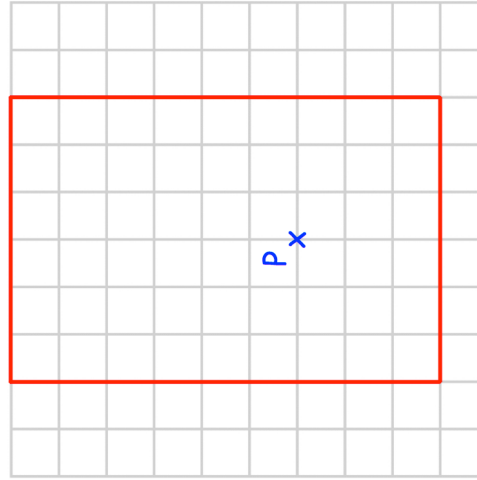
(b)



Question 3 (a)

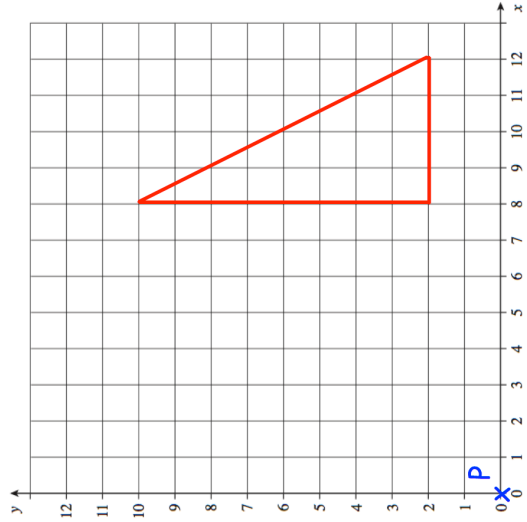


(c)

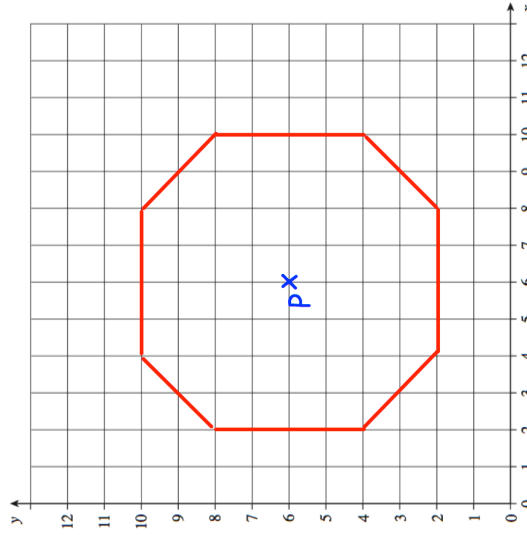


# Templates

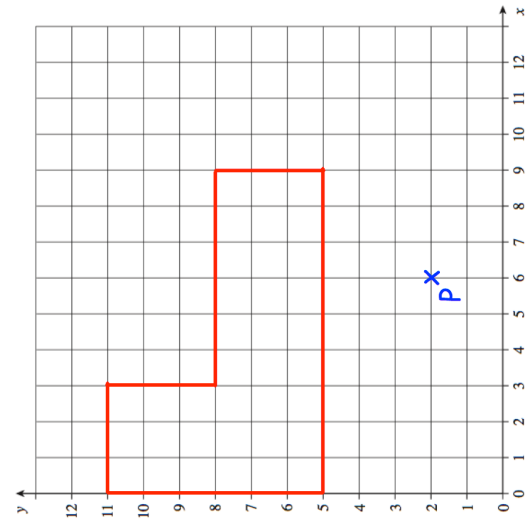
Question 4(a)



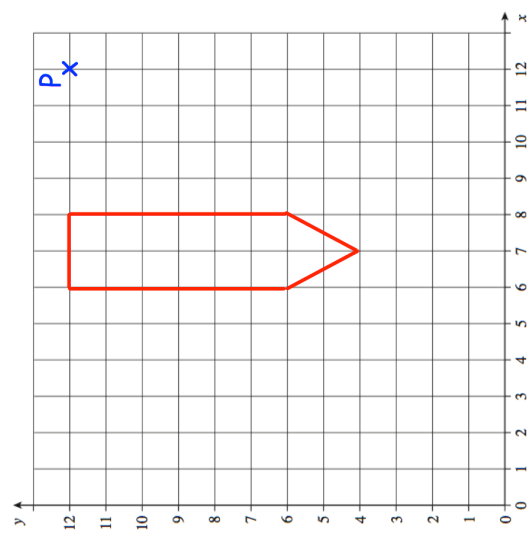
(b)



(c)

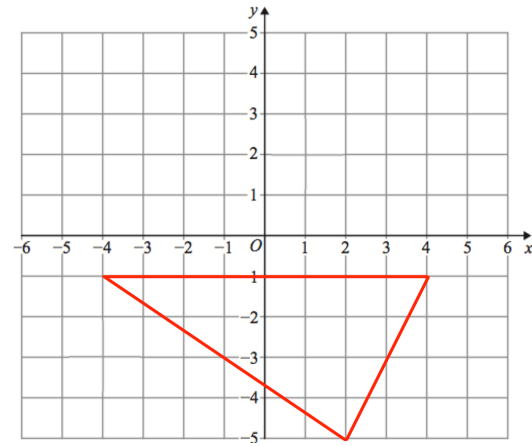


(d)

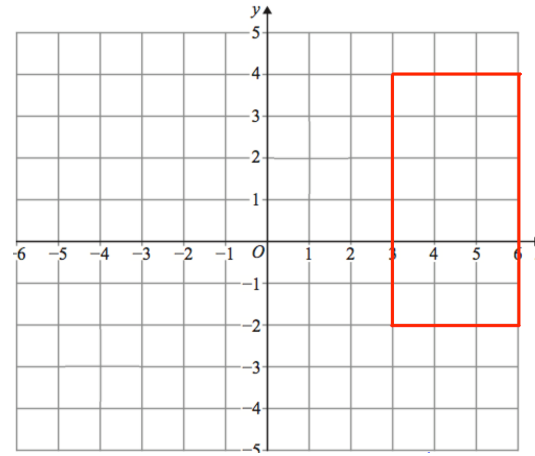


# Templates

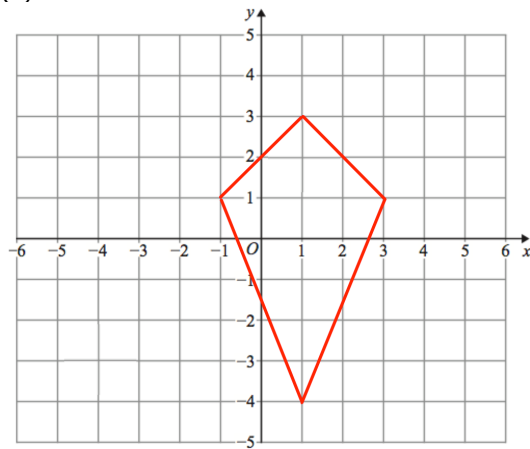
Question 5(a)



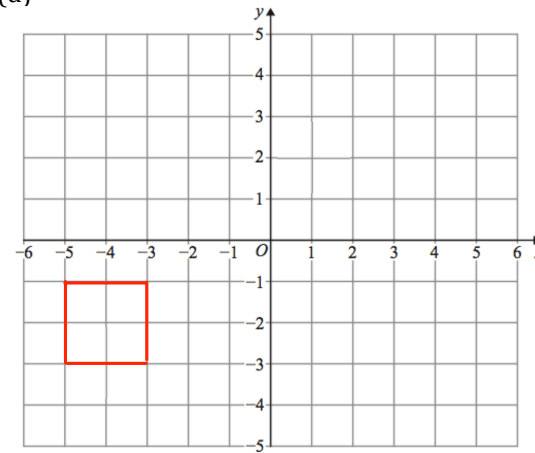
(b)



(c)

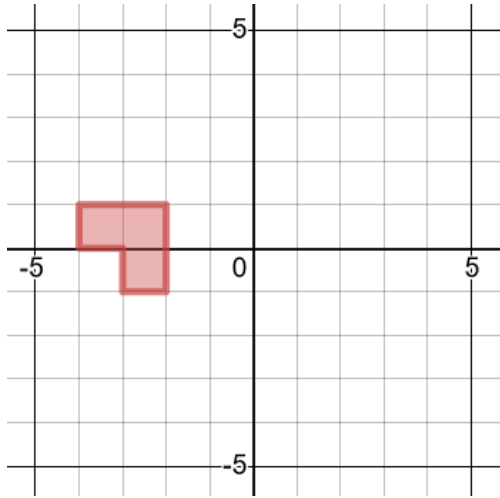


(d)

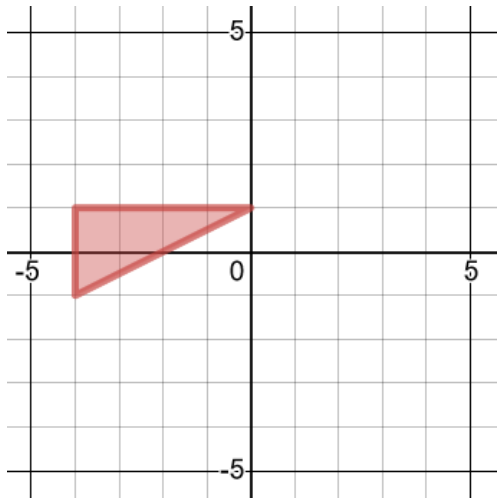


## Worked Example

Enlarge about  $(-2, 1)$ , scale factor  $-2$

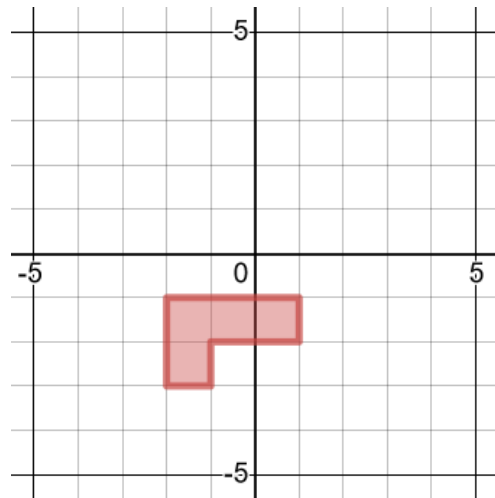


Enlarge about  $(-2, -3)$ , scale factor  $-\frac{1}{2}$

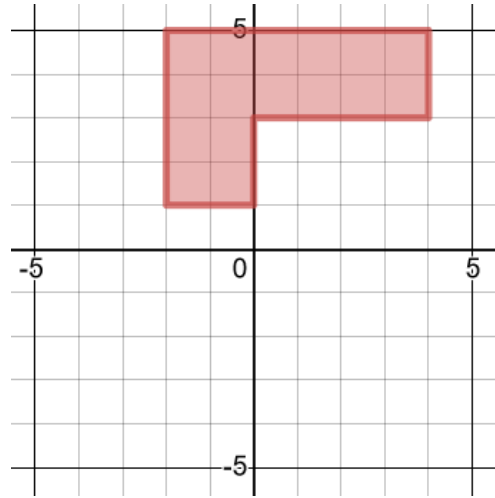


## Your Turn

Enlarge about  $(0, -1)$ , scale factor  $-2$



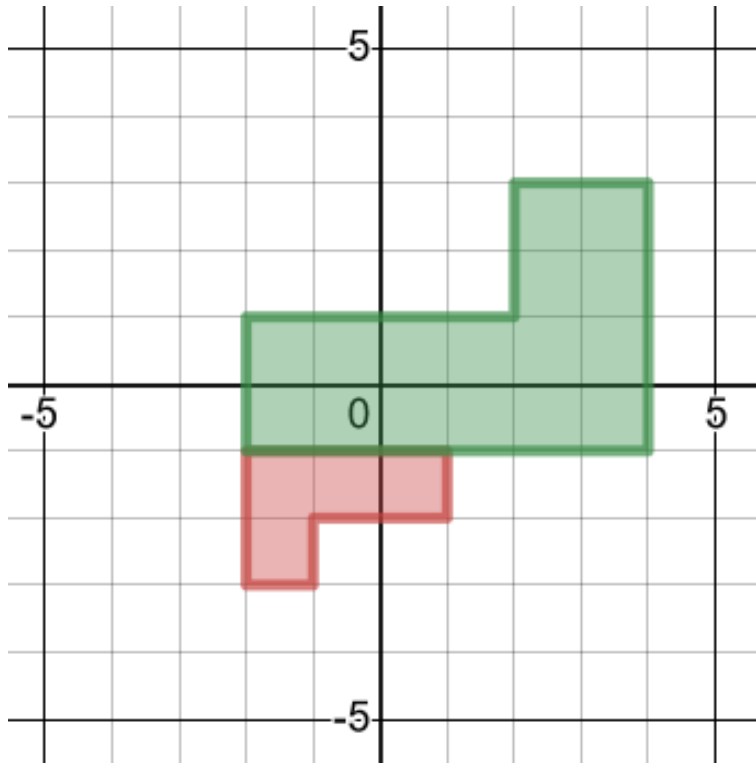
Enlarge about  $(2, -1)$ , scale factor  $-\frac{1}{2}$





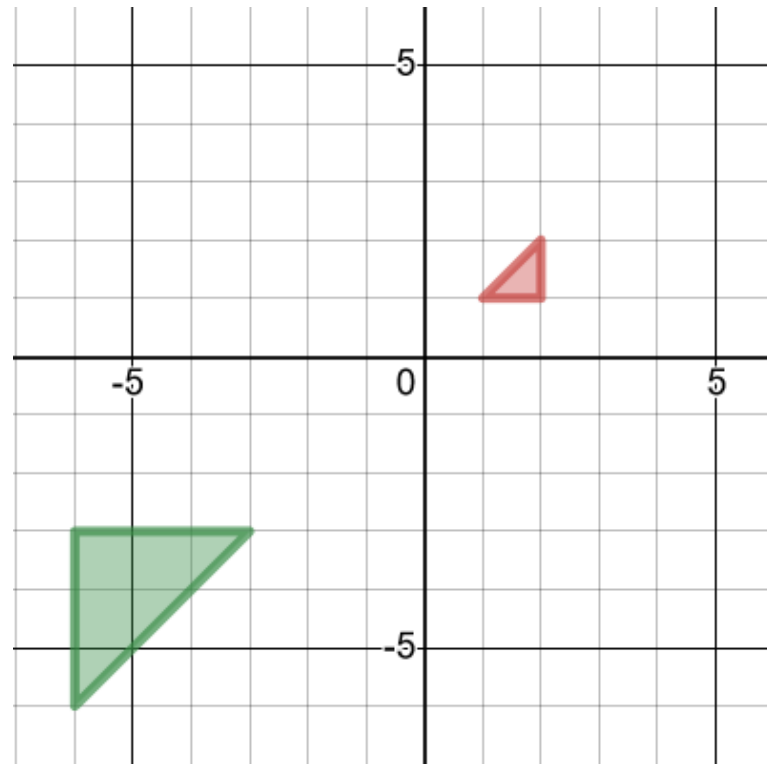
## Worked Example

Describe the single transformation of the red object onto the green image



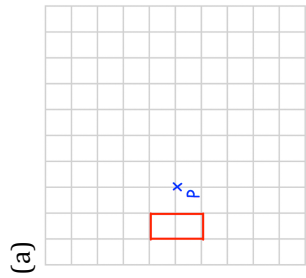
## Your Turn

Describe the single transformation of the red object onto the green image

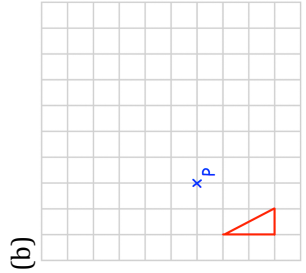


# Fluency Practice

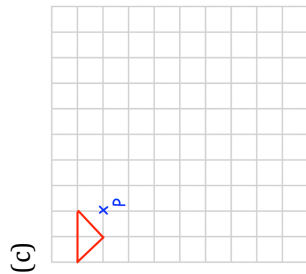
Question 1: Enlarge each shape by the scale factor given  
Use P as the centre of enlargement.



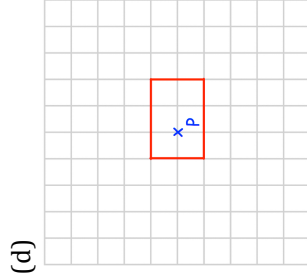
Enlarge by scale factor -3



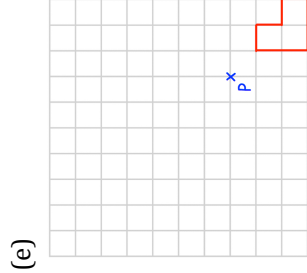
Enlarge by scale factor -2



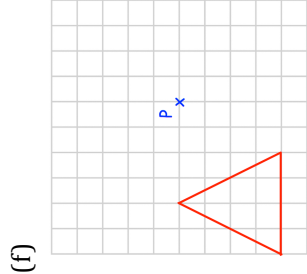
Enlarge by scale factor -4



Enlarge by scale factor -2

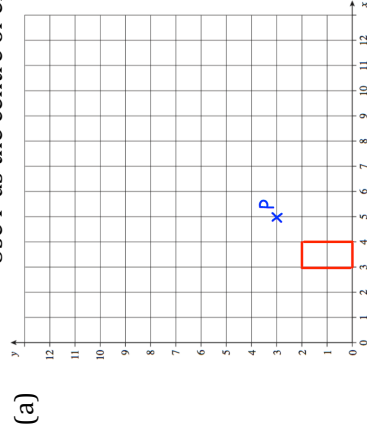


Enlarge by scale factor -2

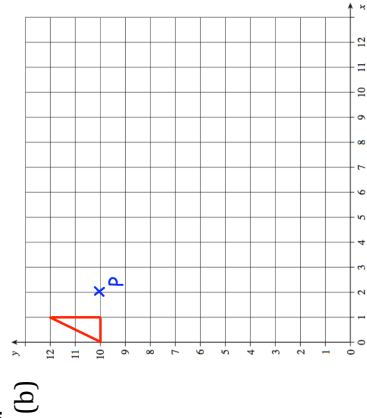


Enlarge by scale factor  $-\frac{1}{2}$

Question 2: Enlarge each shape by the scale factor given  
Use P as the centre of enlargement.

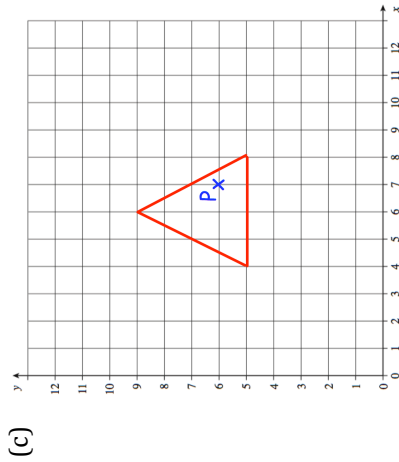


Enlarge by scale factor -3

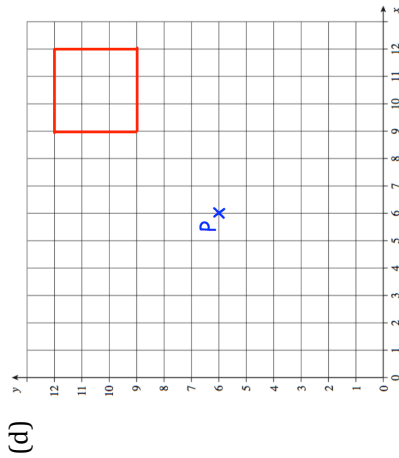


Enlarge by scale factor -4

# Fluency Practice

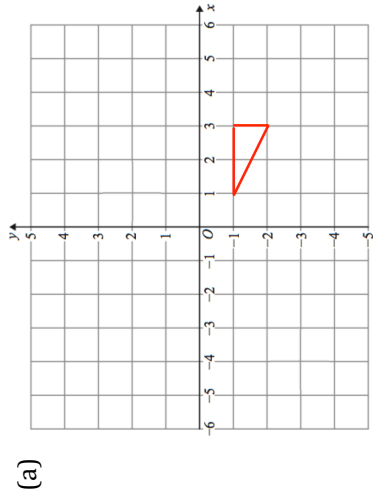


Enlarge by scale factor  $-2$



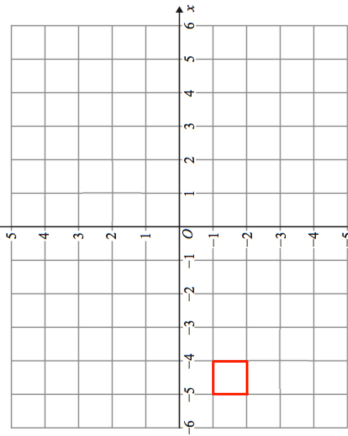
Enlarge by scale factor  $-\frac{1}{3}$

Question 3: Enlarge each shape by the scale factor given  
The coordinates for each centre of enlargement are given.

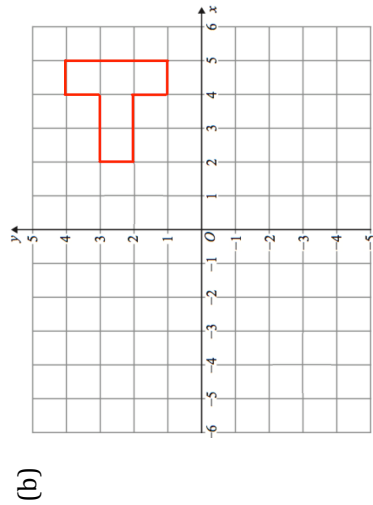


Enlarge by scale factor  $-2$  using  
(0, 0) as the centre of enlargement

(c)

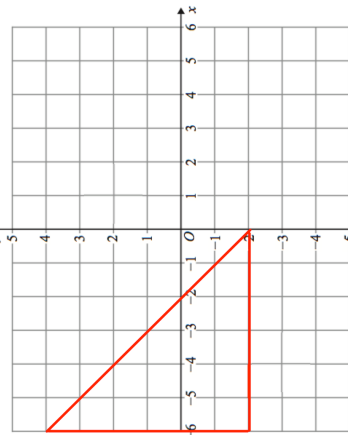


Enlarge by scale factor  $-4$  using  
(-3, -1) as the centre of enlargement



Enlarge by scale factor  $-2$  using  
(2, 2) as the centre of enlargement

(d)

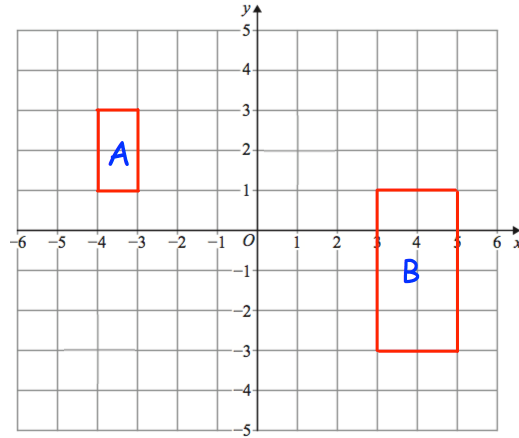


Enlarge by scale factor  $-\frac{1}{2}$  using  
(0, -2) as the centre of enlargement

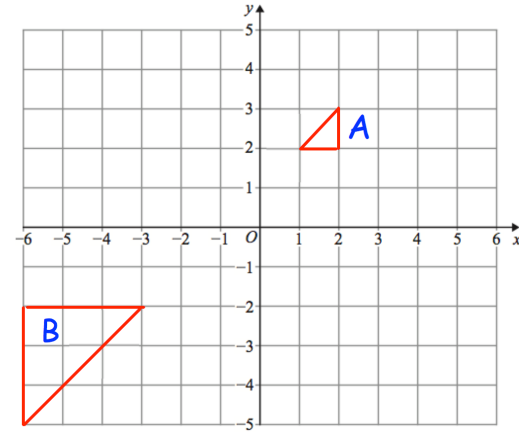
# Fluency Practice

Question 4: Describe fully the single transformation that takes shape A to shape B.

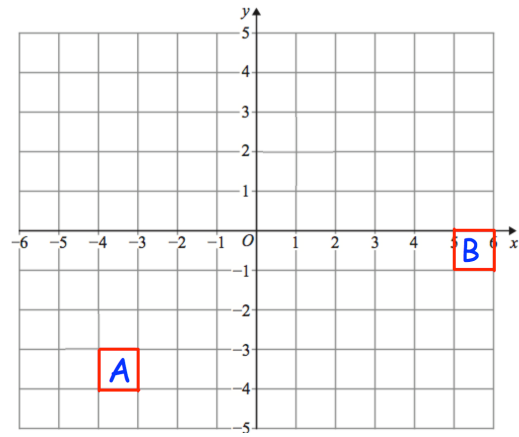
(a)



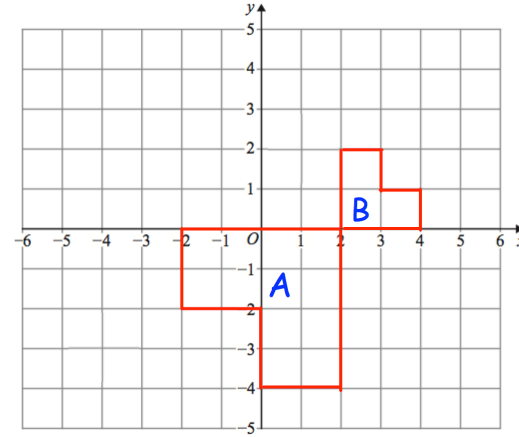
(b)



(c)

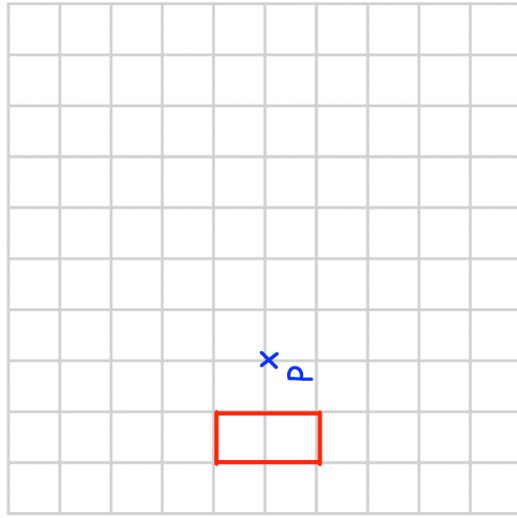


(d)

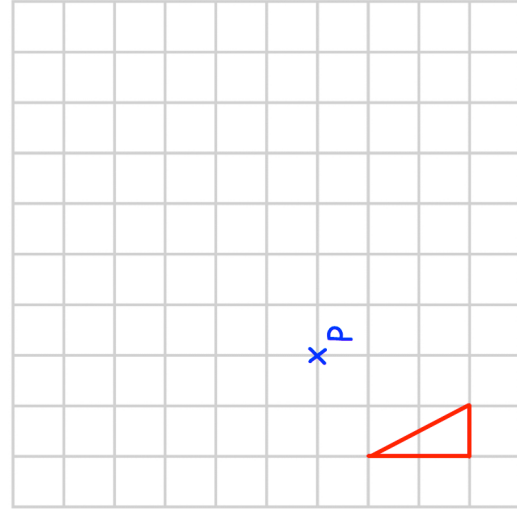


# Templates

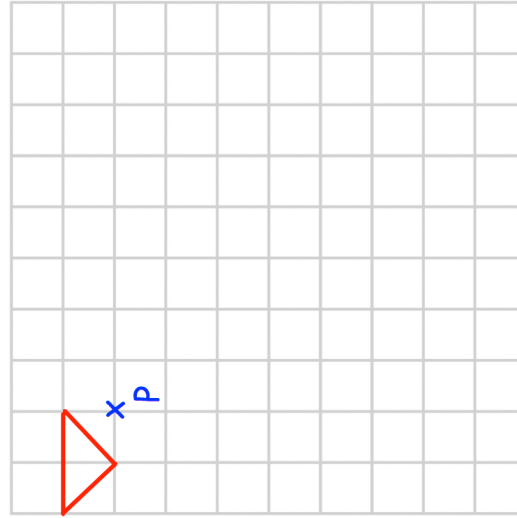
Question 1(a)



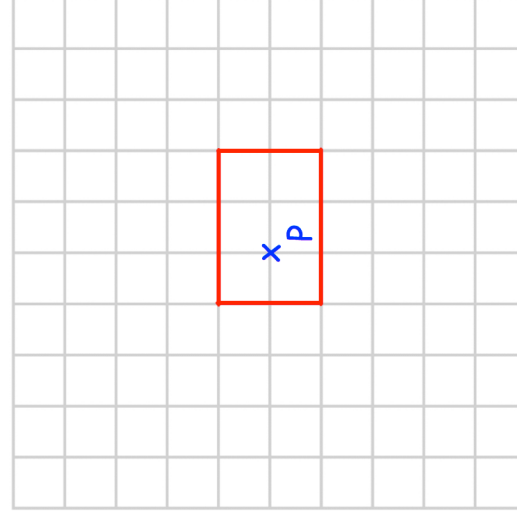
(b)



(c)

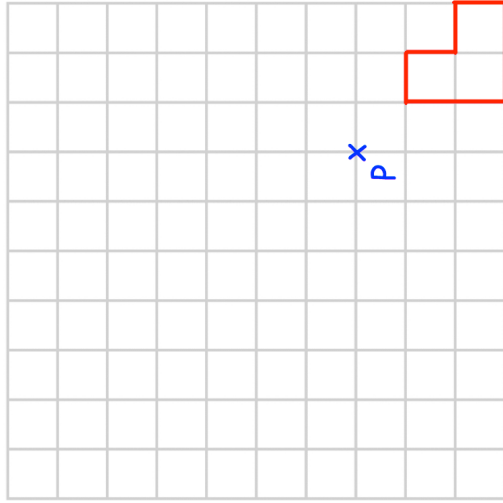


(d)

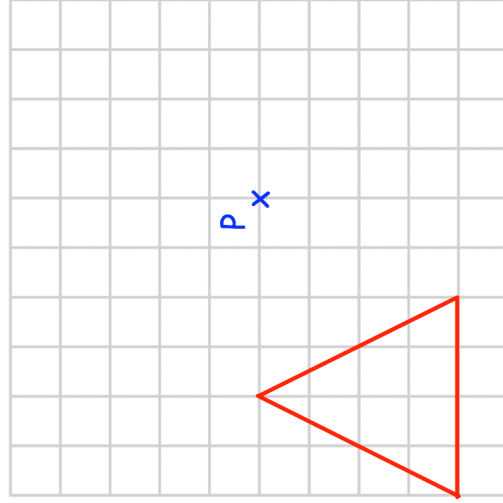


# Templates

(e)

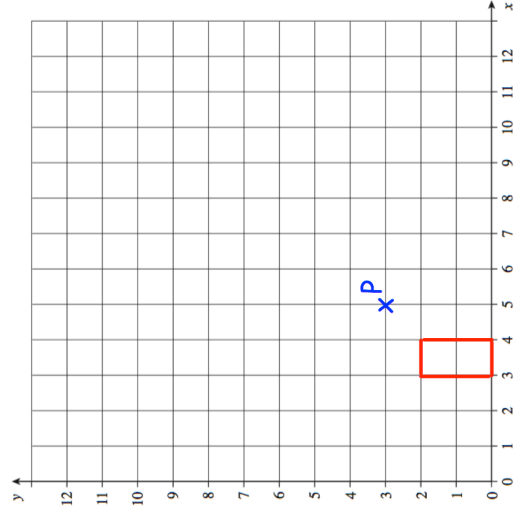


(f)

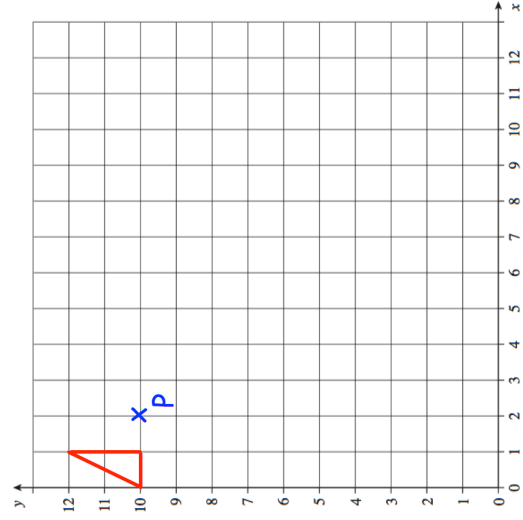


Question 2

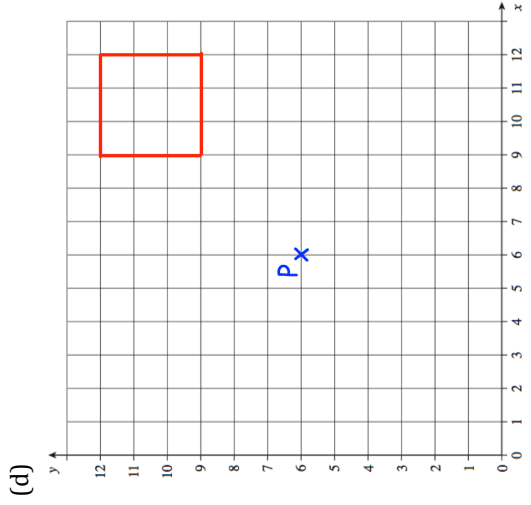
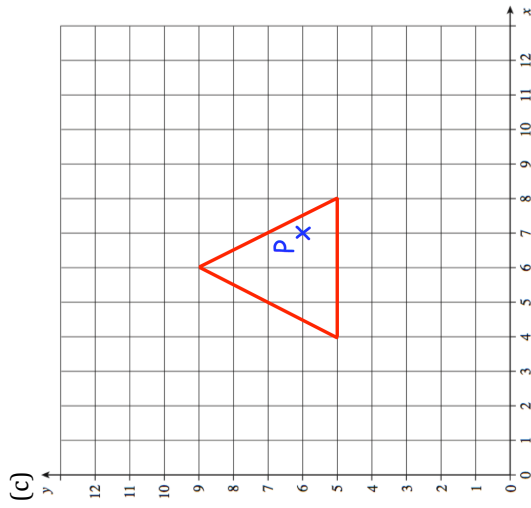
(a)



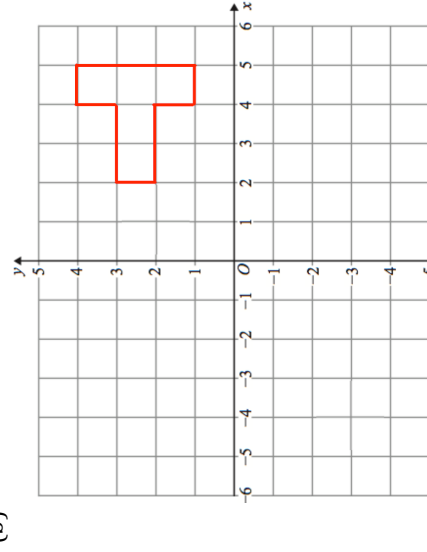
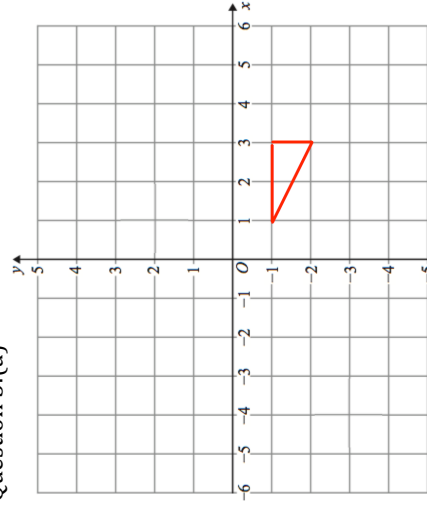
(b)



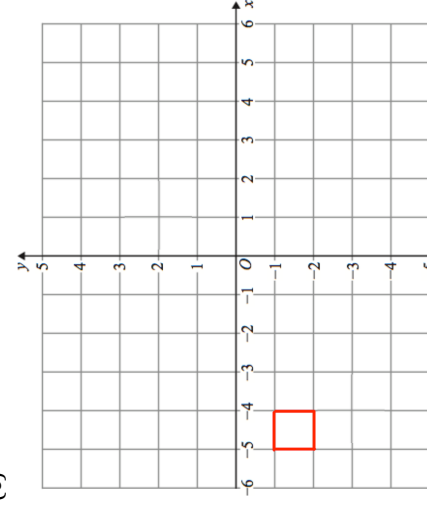
# Templates



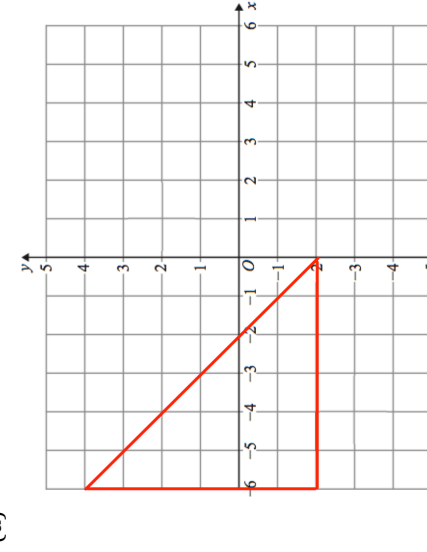
Question 3:(a)



(c)



(d)



## Mixed Transformations

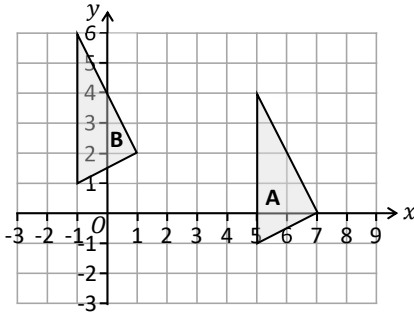


# Fluency Practice

1. Describe the single transformation that maps shape A onto shape B.

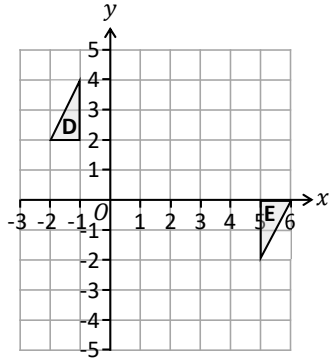
\_\_\_\_\_

Translate triangle B by the vector  $\begin{pmatrix} 3 \\ -4 \end{pmatrix}$   
Label the new triangle C.



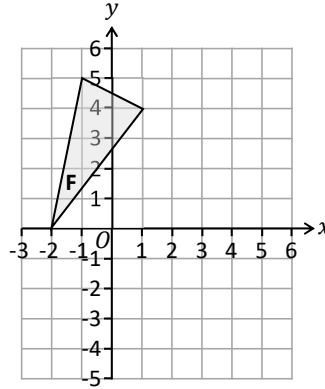
2. Describe the 2 reflections that map shape D onto shape E.

\_\_\_\_\_

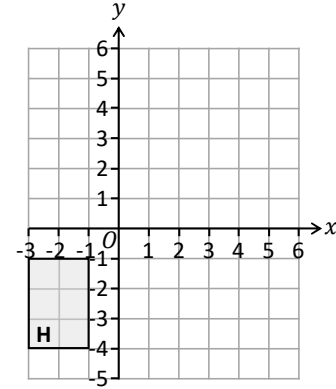


## Transformations

3. Reflect triangle F in the line  $y = x$   
Label the new triangle G.

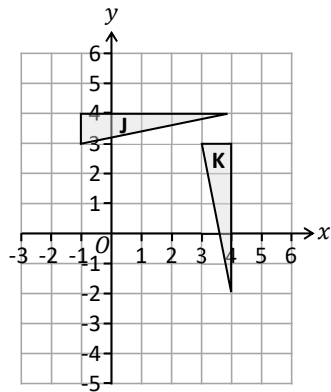


4. Rotate shape H 90° clockwise about (3, -3).  
Label the new shape I.

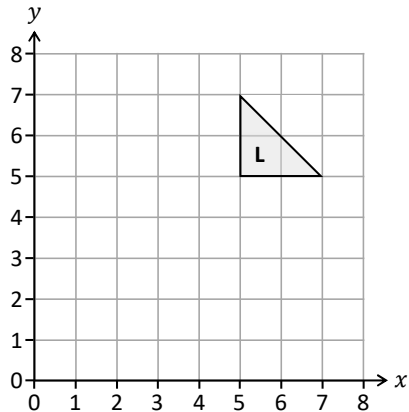


5. Describe the single transformation that maps shape J onto shape K.

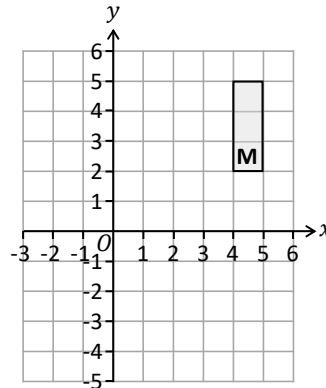
\_\_\_\_\_



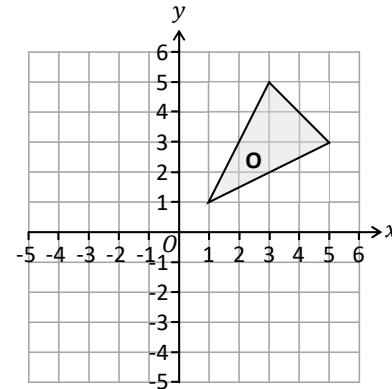
6. Use the centre of enlargement (7, 7) to enlarge shape L by a scale factor of 3.  
& then enlarge shape L by a scale factor of  $\frac{1}{2}$ .



7. Enlarge shape M by scale factor -2 with (3, 2) as the centre of enlargement.  
Label the new shape N.



8. Enlarge triangle O by scale factor  $-\frac{1}{2}$  with centre of enlargement (-1, 3).  
Label the triangle P.

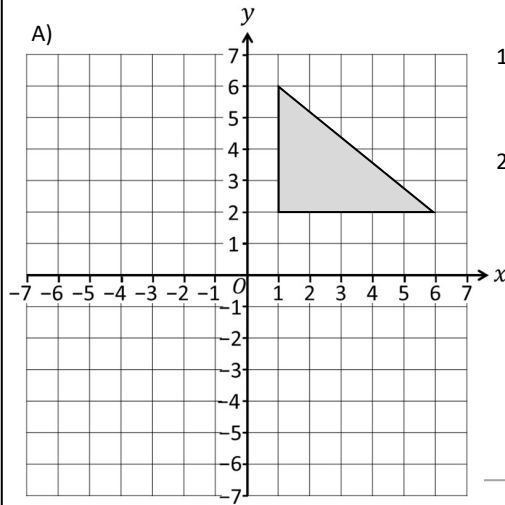


## Combined Transformations

# Fluency Practice

1

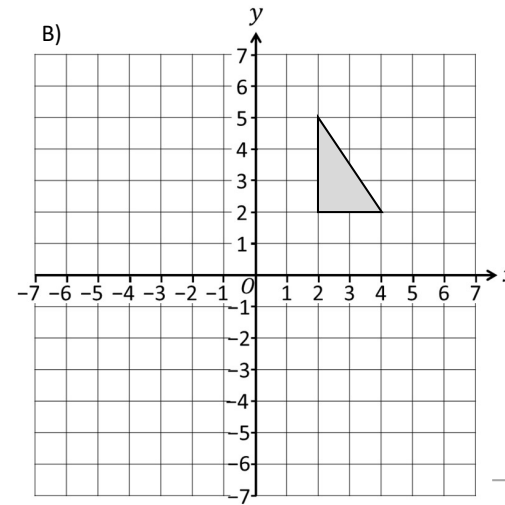
## Combining Transformations



- 1) Translate by the vector  $\begin{pmatrix} -7 \\ -4 \end{pmatrix}$
- 2) Translate by the vector  $\begin{pmatrix} 8 \\ -4 \end{pmatrix}$

Describe as a single transformation:

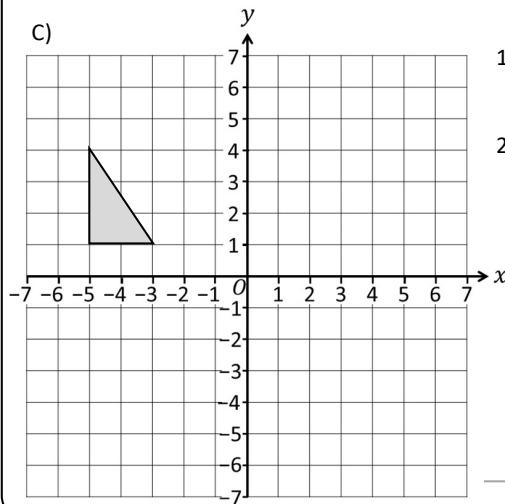
\_\_\_\_\_



- 1) Rotate  $90^\circ$  clockwise about the origin.
- 2) Translate by the vector  $\begin{pmatrix} 0 \\ 4 \end{pmatrix}$

Describe as a single transformation:

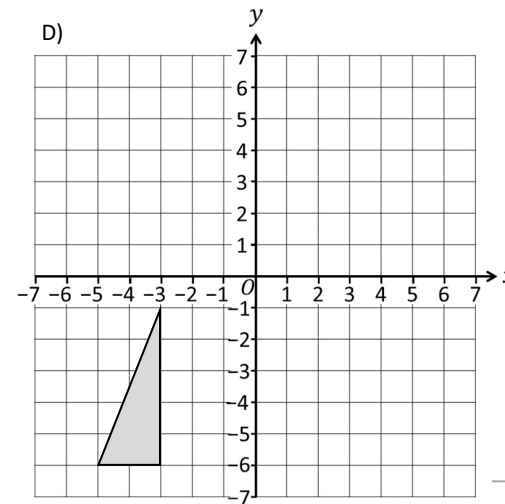
\_\_\_\_\_



- 1) Rotate  $180^\circ$  about the origin.
- 2) Reflect in the line  $y = 0$

Describe as a single transformation:

\_\_\_\_\_



- 1) Reflect in the line  $x = -1$
- 2) Reflect in the line  $y = -1$

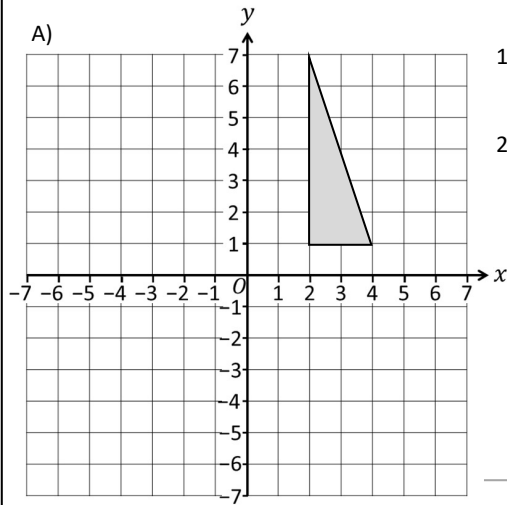
Describe as a single transformation:

\_\_\_\_\_

# Fluency Practice

2

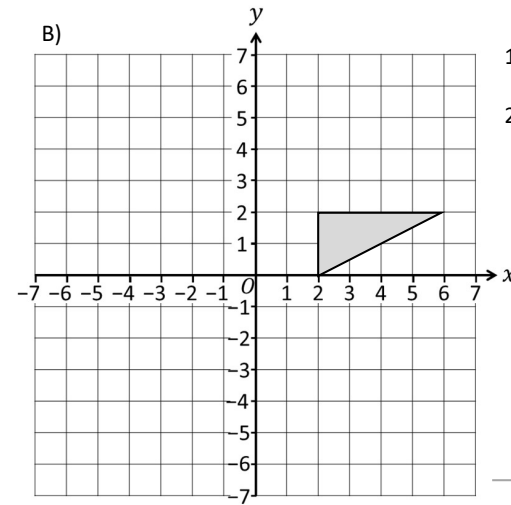
## Combining Transformations



- 1) Rotate  $180^\circ$  about  $(1, 0)$ .
- 2) Translate by the vector  $\begin{pmatrix} -2 \\ 4 \end{pmatrix}$

Describe as a single transformation:

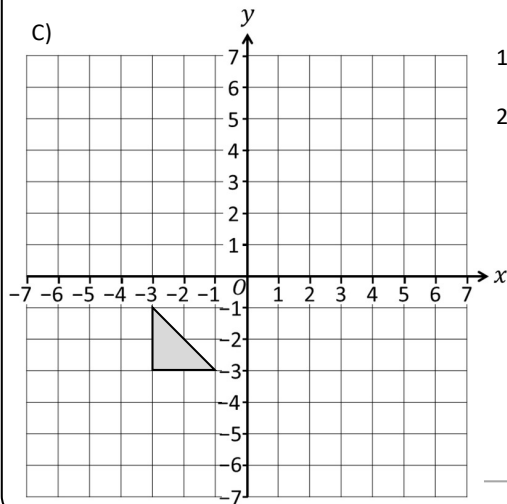
\_\_\_\_\_



- 1) Reflect in the line  $y = x$
- 2) Reflect in the line  $x = -1$

Describe as a single transformation:

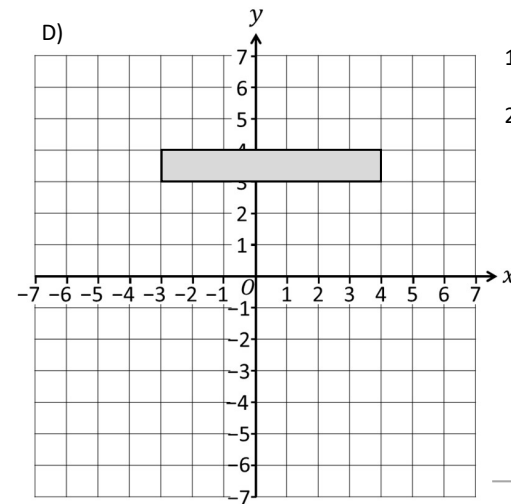
\_\_\_\_\_



- 1) Reflect in the line  $y = -x$
- 2) Reflect in the line  $x = -1$

Describe as a single transformation:

\_\_\_\_\_

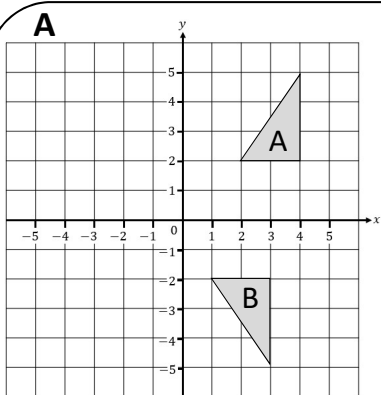


- 1) Reflect in the line  $y = x$
- 2) Rotate  $180^\circ$  about the origin.

Describe as a single transformation:

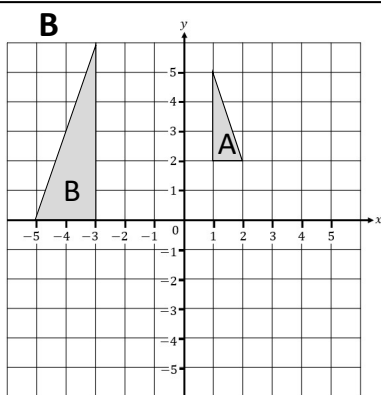
\_\_\_\_\_

# Fluency Practice



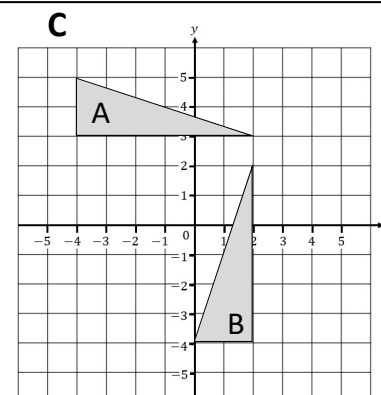
T1)

T2)



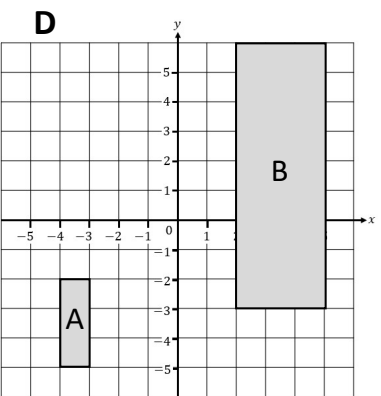
T1)

T2)



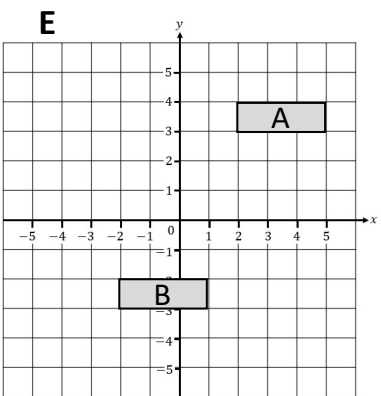
T1)

T2)



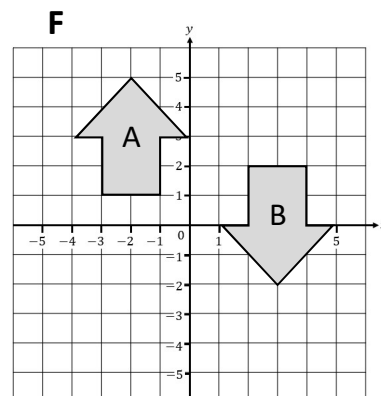
T1)

T2)



T1)

T2)



T1)

T2)

How is each shape transformed from A to B?

Pick **only** from those below.

Reflected in  $y = 0$

Translation  $\begin{pmatrix} 1 \\ 3 \end{pmatrix}$

Reflected in  $x = 0$

Enlarged, SF = 2, (1, 4)

Rotated 180° clockwise around (0,0)

Rotated 90° anticlockwise around (2,3)

Enlarged, SF = 3, (-5,-5)

Translation  $\begin{pmatrix} -1 \\ 0 \end{pmatrix}$

Translation  $\begin{pmatrix} 4 \\ 2 \end{pmatrix}$

Reflected in  $y = 1$

Translation  $\begin{pmatrix} -4 \\ -1 \end{pmatrix}$

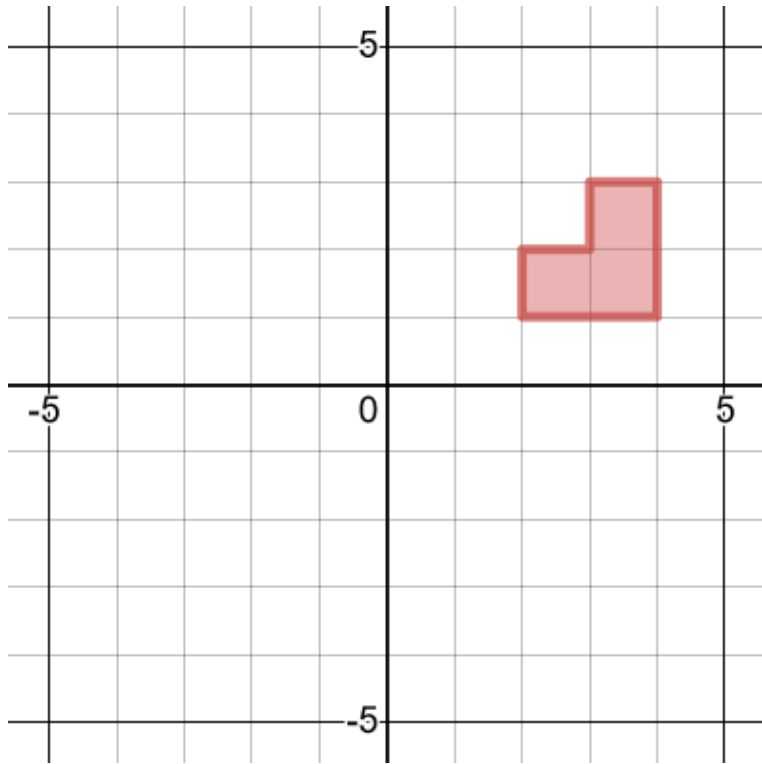
Translated  $\begin{pmatrix} 0 \\ -1 \end{pmatrix}$

## Extra Notes

## 5 Invariant Points

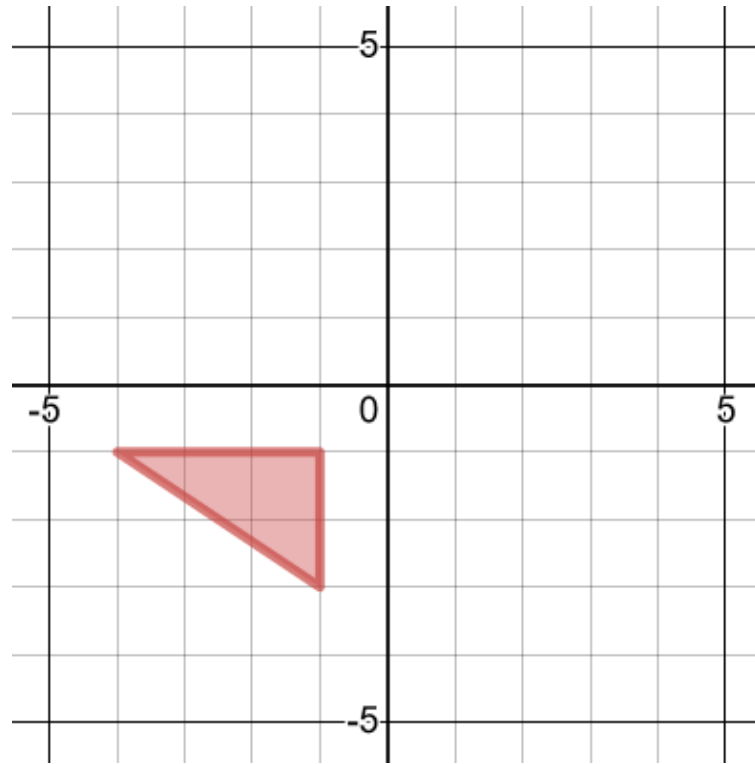
## Worked Example

Reflect in the line  $y = x$   
Are there any invariant points?



## Your Turn

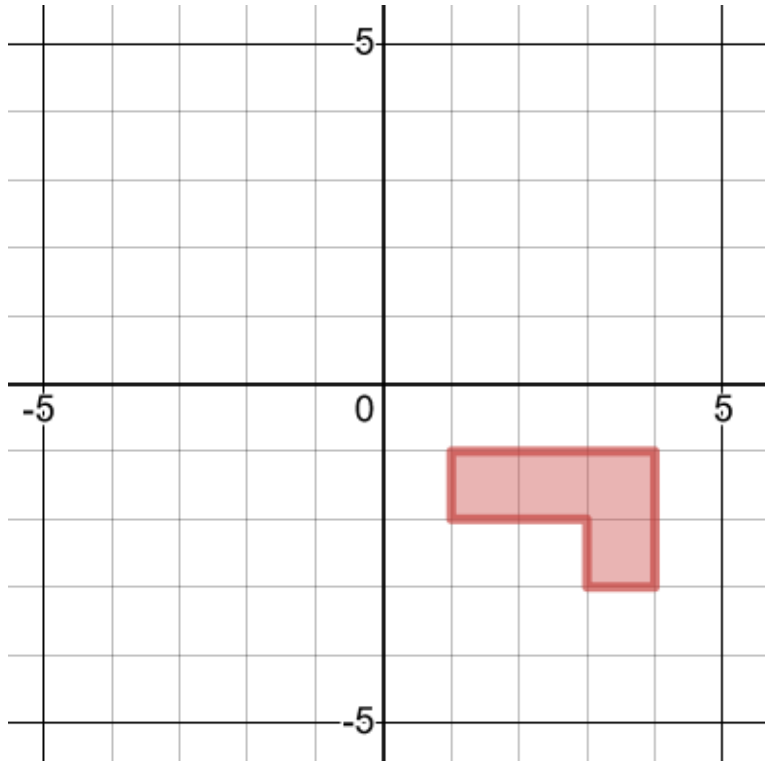
Reflect in the line  $y = -1$   
Are there any invariant points?





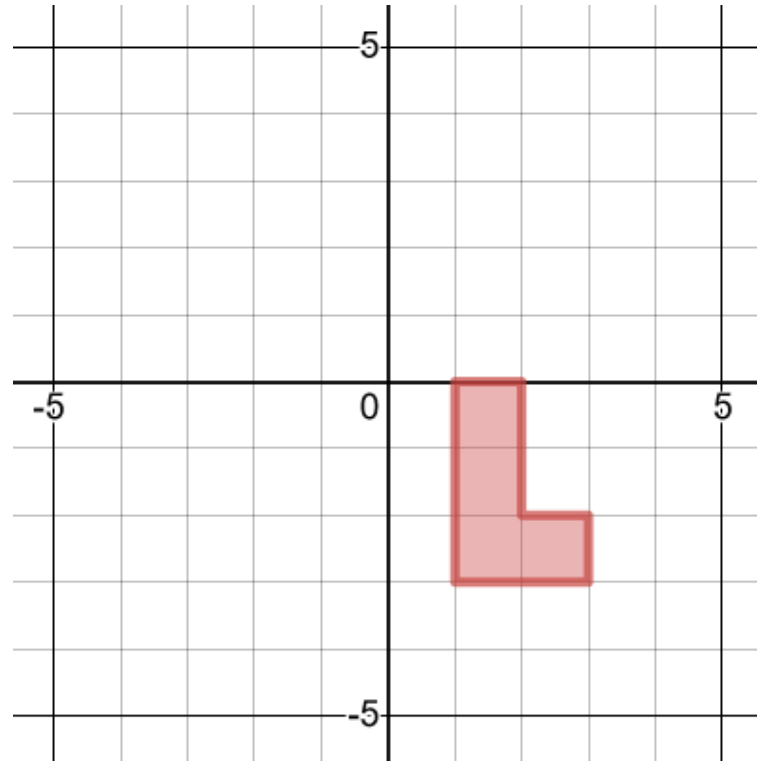
## Worked Example

Rotate  $180^\circ$  about  $(1, -1)$   
Are there any invariant points?



## Your Turn

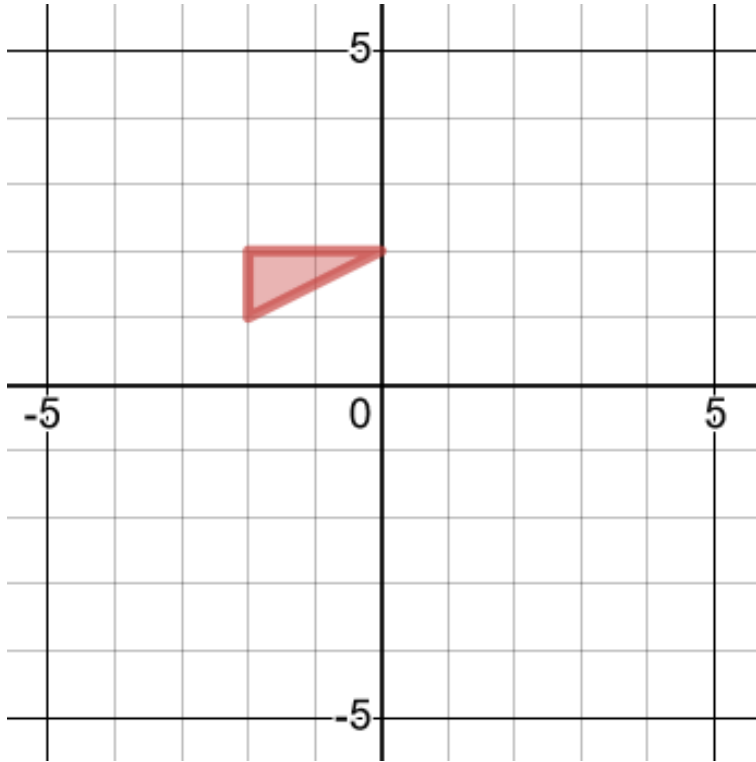
Rotate  $180^\circ$  about  $(1, 0)$   
Are there any invariant points?



## Worked Example

Are there any invariant points?

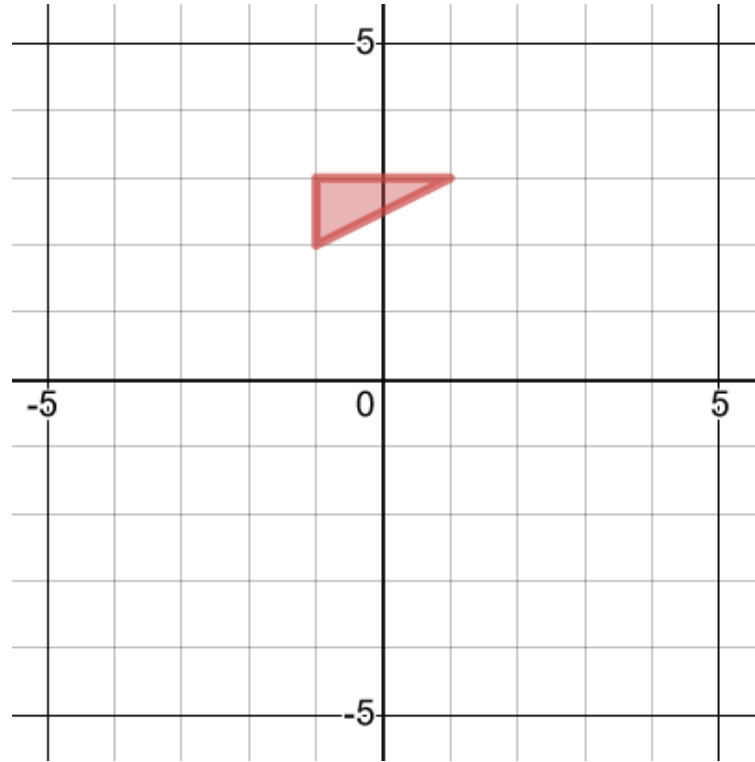
Enlarge about  $(-2, 2)$ , scale factor 2



## Your Turn

Are there any invariant points?

Enlarge about  $(-1, 2)$ , scale factor 3

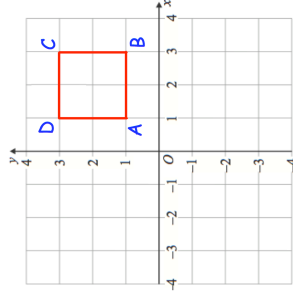


# Fluency Practice

Question 1: ABCD is a square.

(a) Translate ABCD using vector  $\begin{pmatrix} -3 \\ -1 \end{pmatrix}$

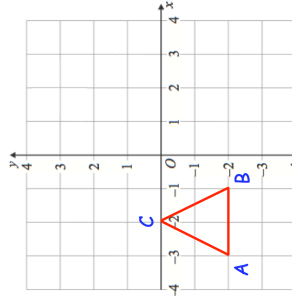
(b) Are there any invariant points?  
If so, which point(s) are invariant?



Question 2: ABC is an isosceles triangle.

(a) Reflect ABC in the x-axis

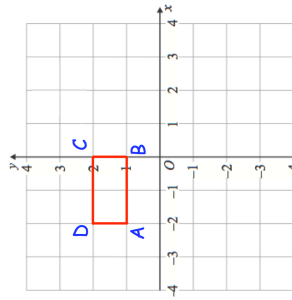
(b) Are there any invariant points?  
If so, which point(s) are invariant?



Question 3: ABCD is a rectangle.

(a) Enlarge ABCD by scale factor 2, with centre of enlargement  $(-2, 2)$

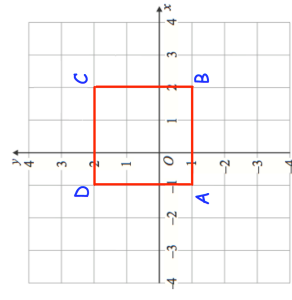
(b) Are there any invariant points?  
If so, which point(s) are invariant?



Question 4: ABCD is a square

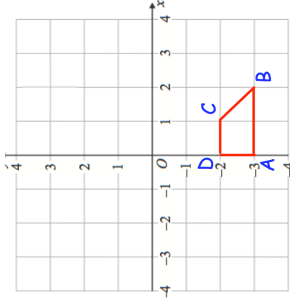
(a) Reflect ABCD in the line  $y = x$

(b) Are there any invariant points?  
If so, which point(s) are invariant?



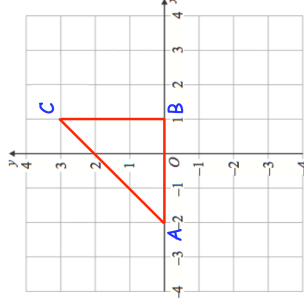
# Fluency Practice

Question 5: ABCD is a trapezium



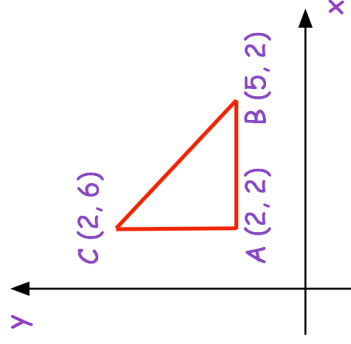
- (a) Enlarge ABCD by scale factor  $-2$ , with centre of enlargement  $(1, -2)$
- (b) Are there any invariant points?  
If so, which point(s) are invariant?

Question 6: ABC is a triangle.



- (a) Rotate ABC  $90^\circ$  clockwise about  $(1, 0)$
- (b) Are there any invariant points?  
If so, which point(s) are invariant?

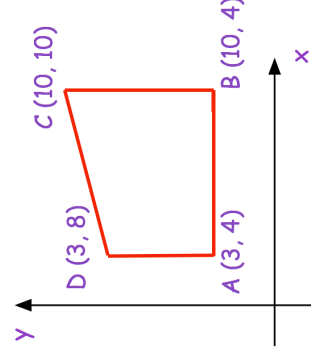
Question 7: A sketch of triangle ABC is shown



For each transformation below, write down the letter(s) of any vertices that are invariant.

- (a) Rotation  $180^\circ$  about the point A
- (b) Enlargement by scale factor  $\frac{1}{2}$  with centre  $(2, 6)$
- (c) Reflection in the line  $x = 5$
- (d) Reflection in the line  $y = x$
- (e) Reflection in the line  $y = 2$

Question 8: A sketch of quadrilateral ABCD is shown.



For each transformation below, write down the letter(s) of any vertices that are invariant.

- (a) Reflection in the line  $y = 8$
- (b) Enlargement by scale factor  $-4$  with centre A
- (c) Reflection in the line  $x = 3$
- (d) Reflection in the line  $y = x$

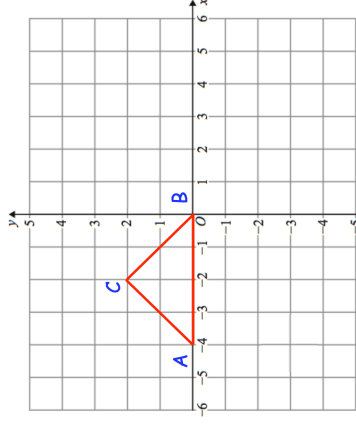
# Fluency Practice

## Apply

Question 1: ABC is a triangle.

Describe fully a **single** transformation of ABC so that:

- (a) None of the vertices are invariant.
- (b) Exactly one vertex is invariant.
- (c) Exactly two vertices are invariant.



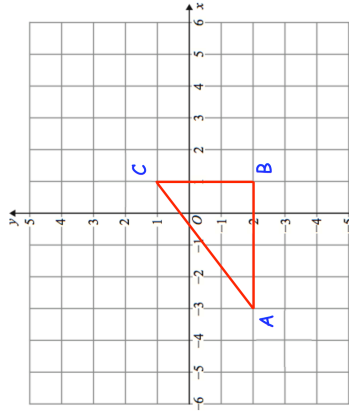
Question 2: Here is triangle ABC

Olivia says “if ABC is reflected in the line  $x = -3$  there is one invariant point.”

Amelia says “if ABC is reflected in the line  $y = -2$  there are two invariant points.”

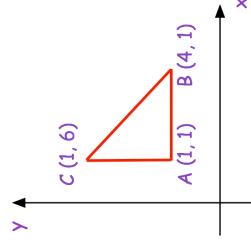
Isla says “if ABC is reflected in the line  $x = 1$  there are two vertices that are invariant.”

Which student is incorrect? Explain your answer.



Question 3: Here is a sketch of triangle ABC.

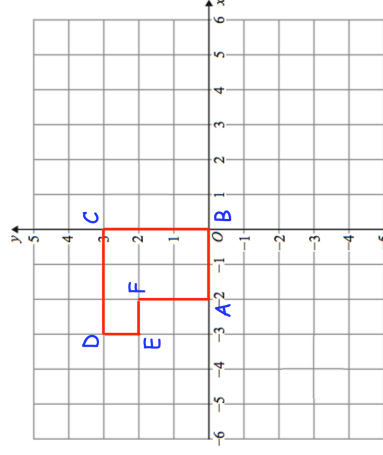
Describe fully a **single** transformation of ABC so that all the points on AC are invariant and the point B is not invariant.



Question 4: Here is shape ABCDEF

Describe fully **single** transformations so that from the six vertices:

- (a) only vertices B and C are invariant.
- (b) only vertex F is invariant.
- (c) only vertices B, D and F are invariant.

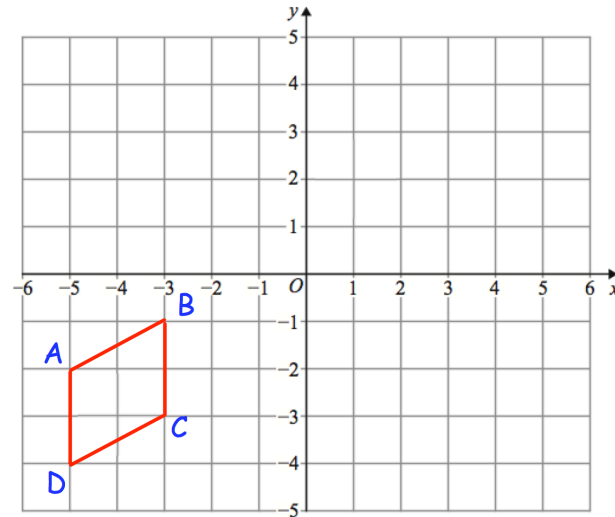


## Fluency Practice

Question 5: Here is quadrilateral ABCD

ABCD is reflected in the line  $x = -1$   
followed by a reflection in the line  $y = -x$   
followed by a rotation of  $180^\circ$  about  $(-1, -1)$

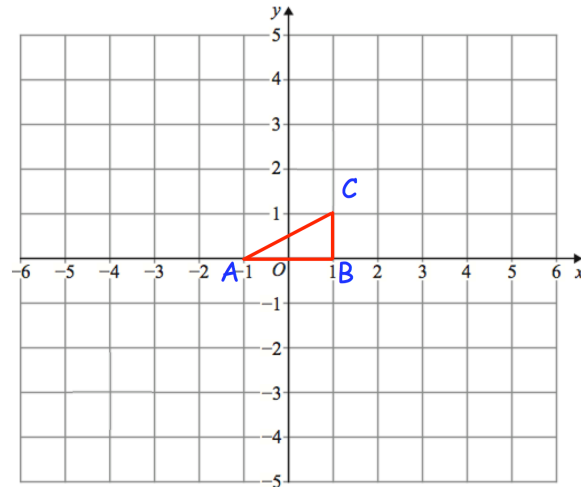
Which of the vertices are invariant?



Question 6: Shown is triangle ABC

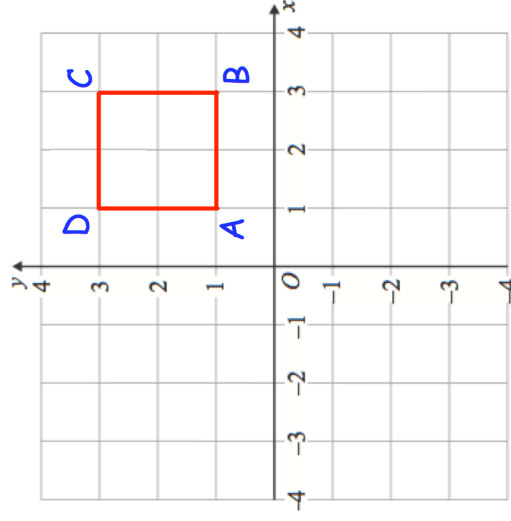
ABC is rotated  $180^\circ$  about  $(-1, 2)$  and then  
translated by the vector  $\begin{pmatrix} 2 \\ -4 \end{pmatrix}$

Write down the coordinate of the invariant point.

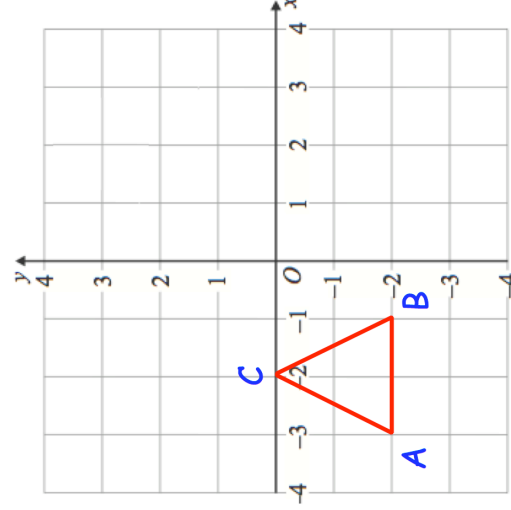


# Templates

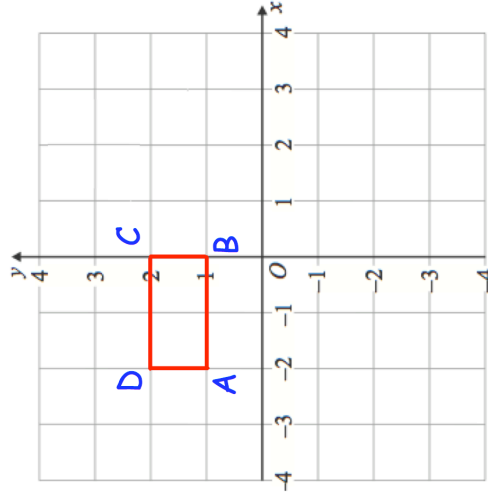
Question 1 Workout



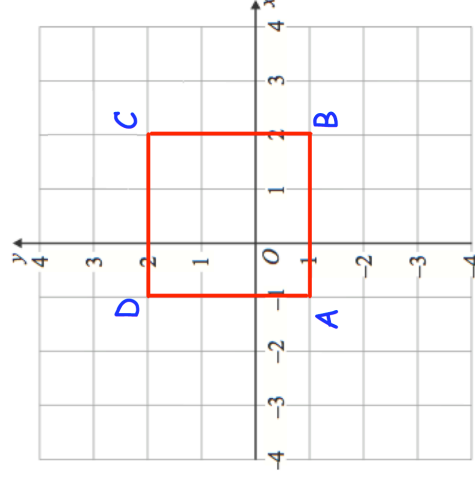
Question 2 Workout



Question 3 Workout

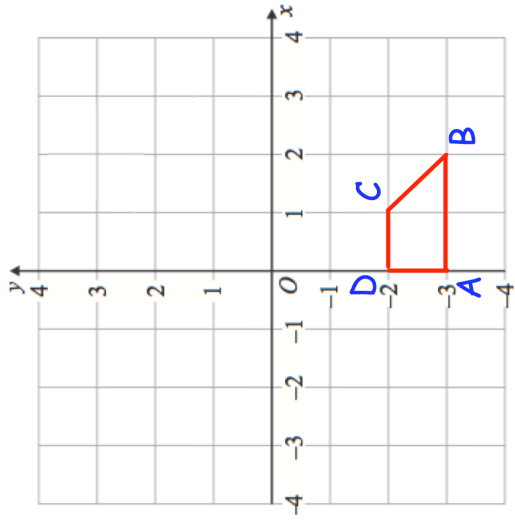


Question 4 Workout

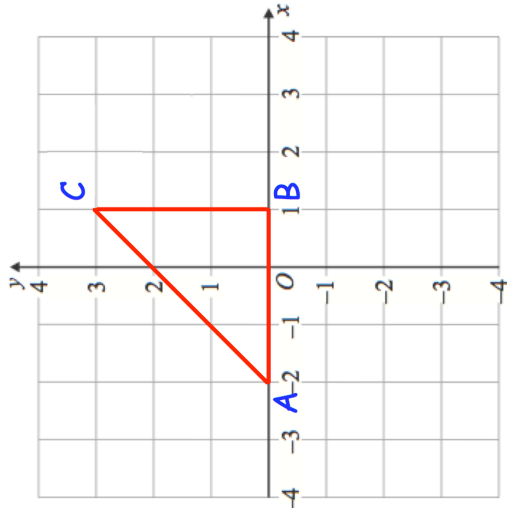


# Templates

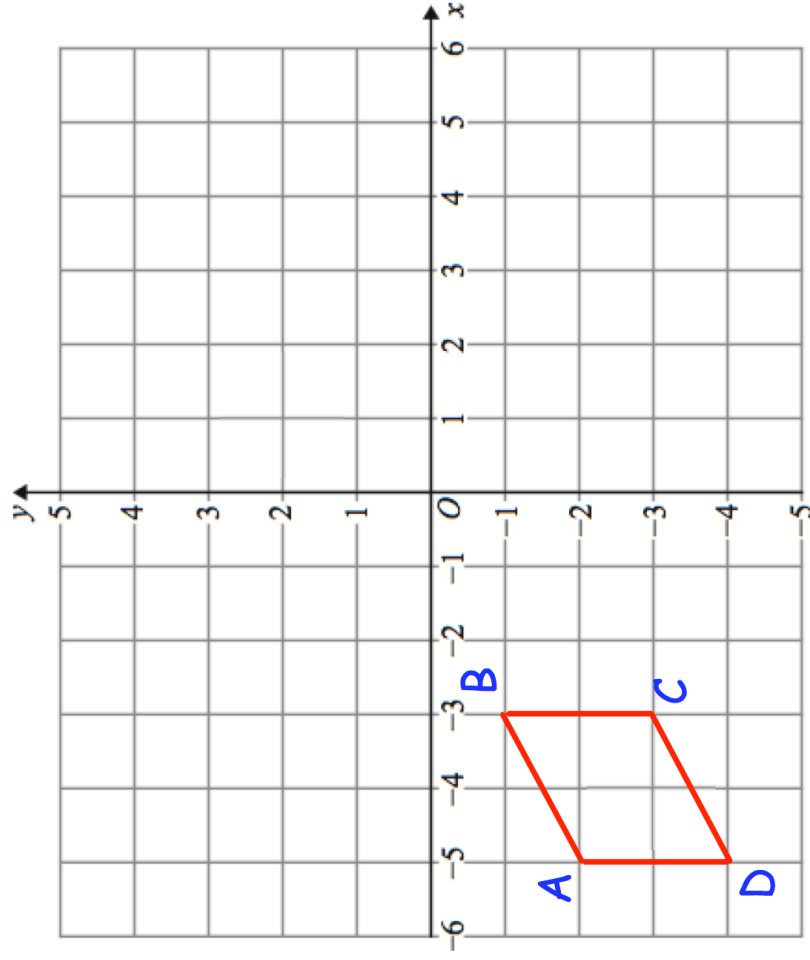
Question 5



Question 6



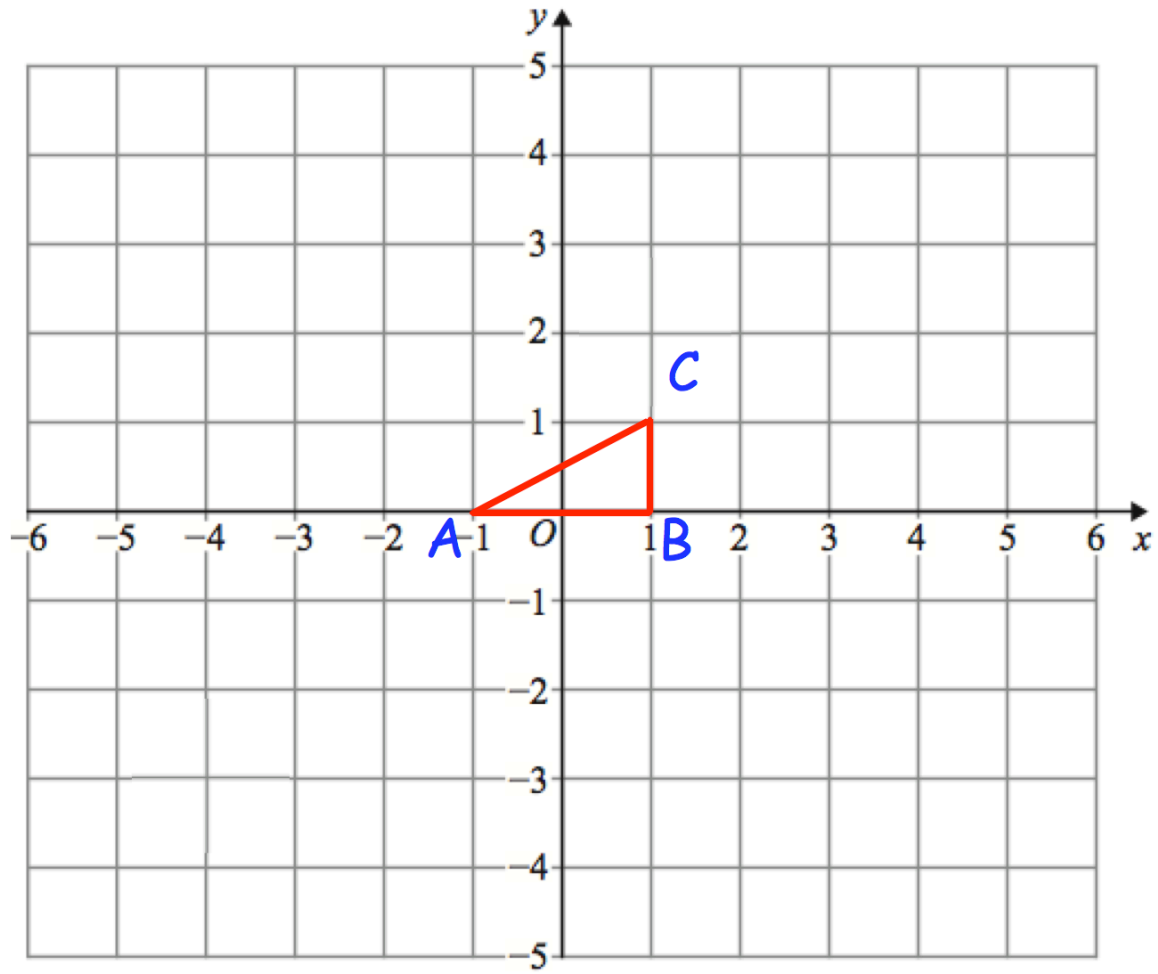
Question 5 Apply





# Templates

Question 6 Apply



## Extra Notes